


# ASTR 1120G FYS Lab Manual

## FALL 2021

Dr. Chanover



Astronomy Department  
New Mexico State University

©NMSU Astronomy

# Contents

1	Tools for Success in ASTR 1120G	1
2	Scale Model of the Solar System	16
3	The Origin of the Seasons	26
4	Phases of the Moon	43
5	Estimating the Earth's Density	55
6	Reflectance Spectroscopy	67
7	Building a Comet	79
8	Our Sun	91
9	Paleoclimate	109
10	The History of Water on Mars	119
11	Characterizing Exoplanets	131
12	Appendix A: Algebra Review	151
13	Observatory Worksheets	153

Name: \_\_\_\_\_  
Date: \_\_\_\_\_

# 1 Tools for Success in ASTR 1120G

## 1.1 Introduction

Astronomy is a physical science. Just like biology, chemistry, geology, and physics, astronomers collect data, analyze that data, attempt to understand the object/subject they are looking at, and submit their results for publication. Along the way astronomers use all of the mathematical techniques and physics necessary to understand the objects they examine. Thus, just like any other science, a large number of mathematical tools and concepts are needed to perform astronomical research. In today's introductory lab, you will review and learn some of the most basic concepts necessary to enable you to successfully complete the various laboratory exercises you will encounter during this semester. When needed, the weekly laboratory exercise you are performing will refer back to the examples in this introduction—so keep the completed examples you will do today with you at all times during the semester to use as a reference when you run into these exercises later this semester (in fact, on some occasions your TA might have you redo one of the sections of this lab for review purposes).

## 1.2 The Metric System

Like all other scientists, astronomers use the metric system. The metric system is based on powers of 10, and has a set of measurement units analogous to the English system we use in everyday life here in the US. In the metric system the main unit of length (or distance) is the *meter*, the unit of mass is the *kilogram*, and the unit of liquid volume is the *liter*. A meter is approximately 40 inches, or about 4" longer than the yard. Thus, 100 meters is about 111 yards. A liter is slightly larger than a quart (1.0 liter = 1.101 qt). On the Earth's surface, a kilogram = 2.2 pounds.

As you have almost certainly learned, the metric system uses prefixes to change scale. For example, one thousand meters is one "kilometer." One thousandth of a meter is a "millimeter." The prefixes that you will encounter in this class are listed in Table 1.2.

In the metric system, 3,600 meters is equal to 3.6 kilometers; 0.8 meter is equal to 80 centimeters, which in turn equals 800 millimeters, etc. In the lab exercises this semester we will encounter a large range in sizes and distances. For example, you will measure the sizes of some objects/things in class in millimeters, talk about the wavelength of light in nanometers, and measure the sizes of features on planets that are larger than 1,000 kilometers.

Table 1.1: Metric System Prefixes

Prefix Name	Prefix Symbol	Prefix Value
Giga	G	1,000,000,000 (one billion)
Mega	M	1,000,000 (one million)
kilo	k	1,000 (one thousand)
centi	c	0.01 (one hundredth)
milli	m	0.001 (one thousandth)
micro	$\mu$	0.0000001 (one millionth)
nano	n	0.0000000001 (one billionth)

### 1.3 Beyond the Metric System

When we talk about the sizes or distances to objects beyond the surface of the Earth, we begin to encounter very large numbers. For example, the average distance from the Earth to the Moon is 384,000,000 meters or 384,000 kilometers (km). The distances found in astronomy are usually so large that we have to switch to a unit of measurement that is much larger than the meter, or even the kilometer. In and around the solar system, astronomers use “Astronomical Units.” An Astronomical Unit is the mean (average) distance between the Earth and the Sun. One Astronomical Unit (AU) = 149,600,000 km. For example, Jupiter is about 5 AU from the Sun, while Pluto’s average distance from the Sun is 39 AU. With this change in units, it is easy to talk about the distance to other planets. It is more convenient to say that Saturn is 9.54 AU away than it is to say that Saturn is 1,427,184,000 km from Earth.

### 1.4 Changing Units and Scale Conversion

Changing units (like those in the previous paragraph) and/or scale conversion is something you must master during this semester. You already do this in your everyday life whether you know it or not (for example, if you travel to Mexico and you want to pay for a Coke in pesos), so **do not panic!** Let’s look at some examples (**2 points each**):

1. Convert 34 meters into centimeters:

Answer: Since one meter = 100 centimeters, 34 meters = 3,400 centimeters.

2. Convert 34 kilometers into meters:

3. If one meter equals 40 inches, how many meters are there in 400 inches?
4. How many centimeters are there in 400 inches?
5. In August 2003, Mars made its closest approach to Earth for the next 50,000 years. At that time, it was only about .373 AU away from Earth. How many km is this?

#### 1.4.1 Map Exercises

One technique that you will use this semester involves measuring a photograph or image with a ruler, and converting the measured number into a real unit of size (or distance). One example of this technique is reading a road map. Figure 1.1 shows a map of the state of New Mexico. Down at the bottom left hand corner of the map is a scale in both miles and kilometers.

Use a ruler to determine (**2 points each**):

6. How many kilometers is it from Las Cruces to Albuquerque?
7. What is the distance in miles from the border with Arizona to the border with Texas if you were to drive along I-40?
8. If you were to drive 100 km/hr (kph), how long would it take you to go from Las Cruces to Albuquerque?
9. If one mile = 1.6 km, how many miles per hour (mph) is 100 kph?



Figure 1.1: Map of New Mexico.

## 1.5 Squares, Square Roots, and Exponents

In several of the labs this semester you will encounter squares, cubes, and square roots. Let us briefly review what is meant by such terms as squares, cubes, square roots and exponents. The square of a number is simply that number times itself:  $3 \times 3 = 3^2 = 9$ . The *exponent* is the little number “2” above the three.  $5^2 = 5 \times 5 = 25$ . The exponent tells you how many times to multiply that number by itself:  $8^4 = 8 \times 8 \times 8 \times 8 = 4096$ . The square of a number simply means the exponent is 2 (three squared =  $3^2$ ), and the cube of a number means the exponent is three (four cubed =  $4^3$ ). Here are some examples:

- $7^2 = 7 \times 7 = 49$
- $7^5 = 7 \times 7 \times 7 \times 7 \times 7 = 16,807$
- The cube of 9 (or “9 cubed”) =  $9^3 = 9 \times 9 \times 9 = 729$
- The exponent of  $12^{16}$  is 16
- $2.56^3 = 2.56 \times 2.56 \times 2.56 = 16.777$

**Your turn (2 points each):**

10.  $6^3 =$

11.  $4^4 =$

12.  $3.1^2 =$

The concept of a square root is fairly easy to understand, but is much harder to calculate (we usually have to use a calculator). The square root of a *number* is that number whose square is the *number*: the square root of  $4 = 2$  because  $2 \times 2 = 4$ . The square root of 9 is 3 ( $9 = 3 \times 3$ ). The mathematical operation of a square root is usually represented by the symbol “ $\sqrt{\phantom{x}}$ ”, as in  $\sqrt{9} = 3$ . But mathematicians also represent square roots using a *fractional* exponent of one half:  $9^{1/2} = 3$ . Likewise, the cube root of a number is represented as  $27^{1/3} = 3$  ( $3 \times 3 \times 3 = 27$ ). The fourth root is written as  $16^{1/4} (= 2)$ , and so on. Here are some example problems:



- $\sqrt{100} = 10$
- $10.5^3 = 10.5 \times 10.5 \times 10.5 = 1157.625$
- Verify that the square root of 17 ( $\sqrt{17} = 17^{1/2}$ ) = 4.123

## 1.6 Scientific Notation

The range in numbers encountered in Astronomy is enormous: from the size of subatomic particles, to the size of the entire universe. You are certainly comfortable with numbers like ten, one hundred, three thousand, ten million, a billion, or even a trillion. But what about a number like one million trillion? Or, four thousand one hundred and fifty six million billion? Such numbers are too cumbersome to handle with words. Scientists use something called “Scientific Notation” as a short hand method to represent very large and very small numbers. The system of scientific notation is based on the number 10. For example, the number  $100 = 10 \times 10 = 10^2$ . In scientific notation the number 100 is written as  $1.0 \times 10^2$ . Here are some additional examples:

- Ten =  $10 = 1 \times 10 = 1.0 \times 10^1$
- One hundred =  $100 = 10 \times 10 = 10^2 = 1.0 \times 10^2$
- One thousand =  $1,000 = 10 \times 10 \times 10 = 10^3 = 1.0 \times 10^3$
- One million =  $1,000,000 = 10 \times 10 \times 10 \times 10 \times 10 \times 10 = 10^6 = 1.0 \times 10^6$

Ok, so writing powers of ten is easy, but how do we write 6,563 in scientific notation?  $6,563 = 6563.0 = 6.563 \times 10^3$ . To figure out the exponent on the power of ten, we simply count the numbers to the *left* of the decimal point, but do not include the left-most number. Here are some more examples:

- $1,216 = 1216.0 = 1.216 \times 10^3$
- $8,735,000 = 8735000.0 = 8.735000 \times 10^6$
- $1,345,999,123,456 = 1345999123456.0 = 1.345999123456 \times 10^{12} \approx 1.346 \times 10^{12}$



Note that in the last example above, we were able to eliminate a lot of the “unnecessary” digits in that very large number. While  $1.345999123456 \times 10^{12}$  is technically correct as the scientific notation representation of the number 1,345,999,123,456, we do not need to keep **all** of the digits to the right of the decimal place. We can keep just a few, and approximate that number as  $1.346 \times 10^{12}$ .

**Your turn! Work the following examples (2 points each):**

13.  $121 = 121.0 =$

14.  $735,000 =$

15.  $999,563,982 =$

Now comes the sometimes confusing issue: writing very small numbers. First, let's look at powers of 10, but this time in fractional form. The number  $0.1 = \frac{1}{10}$ . In scientific notation we would write this as  $1 \times 10^{-1}$ . The negative number in the exponent is the way we write the fraction  $\frac{1}{10}$ . How about 0.001? We can rewrite 0.001 as  $\frac{1}{10} \times \frac{1}{10} \times \frac{1}{10} = 0.001 = 1 \times 10^{-3}$ . Do you see where the exponent comes from? Starting at the decimal point, we simply count over to the *right* of the first digit that isn't zero to determine the exponent. Here are some examples:

- $0.121 = 1.21 \times 10^{-1}$

- $0.000735 = 7.35 \times 10^{-4}$

- $0.0000099902 = 9.9902 \times 10^{-6}$

**Your turn (2 points each):**

16.  $0.0121 =$

17.  $0.0000735 =$

18.  $0.000000999 =$

19.  $-0.121 =$

There is one issue we haven't dealt with, and that is *when* to write numbers in scientific notation. It is kind of silly to write the number 23.7 as  $2.37 \times 10^1$ , or 0.5 as  $5.0 \times 10^{-1}$ . You use scientific notation when it is a more compact way to write a number to insure that its value is quickly and easily communicated to someone else. For example, if you tell someone the answer for some measurement is 0.0033 meter, the person receiving that information has to count over the zeros to figure out what that means. It is better to say that the measurement was  $3.3 \times 10^{-3}$  meter. But telling someone the answer is 215 kg, is much easier than saying  $2.15 \times 10^2$  kg. It is common practice that numbers bigger than 10,000 or smaller than 0.01 are best written in scientific notation.

## 1.7 Calculator Issues

Since you will be using calculators in nearly all of the labs this semester, you should become familiar with how to use them for functions beyond simple arithmetic.

### 1.7.1 Scientific Notation on a Calculator

Scientific notation on a calculator is usually designated with an "E." For example, if you see the number 8.778046E11 on your calculator, this is the same as the number  $8.778046 \times 10^{11}$ . Similarly, 1.4672E-05 is equivalent to  $1.4672 \times 10^{-5}$ .

Entering numbers in scientific notation into your calculator depends on layout of your calculator; we cannot tell you which buttons to push without seeing your specific calculator. However, the "E" button described above is often used, so to enter  $6.589 \times 10^7$ , you may need to type 6.589 "E" 7.

Verify that you can enter the following numbers into your calculator:

- $7.99921 \times 10^{21}$
- $2.2951324 \times 10^{-6}$

### 1.7.2 Order of Operations

When performing a complex calculation, the order of operations is extremely important. There are several rules that need to be followed:

- i. Calculations must be done from left to right.
- ii. Calculations in brackets (parenthesis) are done first. When you have more than one set of brackets, do the inner brackets first.

- iii. Exponents (or radicals) must be done next.
- iv. Multiply and divide in the order the operations occur.
- v. Add and subtract in the order the operations occur.

If you are using a calculator to enter a long equation, when in doubt as to whether the calculator will perform operations in the correct order, apply parentheses.

Use your calculator to perform the following calculations (**2 points each**):

20.  $\frac{(7+34)}{(2+23)} =$

21.  $(4^2 + 5) - 3 =$

22.  $20 \div (12 - 2) \times 3^2 - 2 =$

## 1.8 Graphing and/or Plotting

Now we want to discuss graphing data. You probably learned about making graphs in high school. Astronomers frequently use graphs to plot data. You have probably seen all sorts of graphs, such as the plot of the performance of the stock market shown in Fig. 1.2. A plot like this shows the history of the stock market versus time. The “x” (horizontal) axis represents time, and the “y” (vertical) axis represents the value of the stock market. Each place on the curve that shows the performance of the stock market is represented by two numbers, the date (x axis), and the value of the index (y axis). For example, on May 10 of 2004, the Dow Jones index stood at 10,000.

Plots like this require two data points to represent each point on the curve or in the plot. For comparing the stock market you need to plot the value of the stocks versus the date. We call data of this type an “ordered pair.” Each data point requires a value for  $x$  (the date) and  $y$  (the value of the Dow Jones index).

Table 1.2 contains data showing how the temperature changes with altitude near the Earth’s surface. As you climb in altitude, the temperature goes down (this is why high mountains can have snow on them year round, even though they are located in warm areas). The data points in this table are plotted in Figure 1.3.

### 1.8.1 The Mechanics of Plotting

When you are asked to plot some data, there are several things to keep in mind.

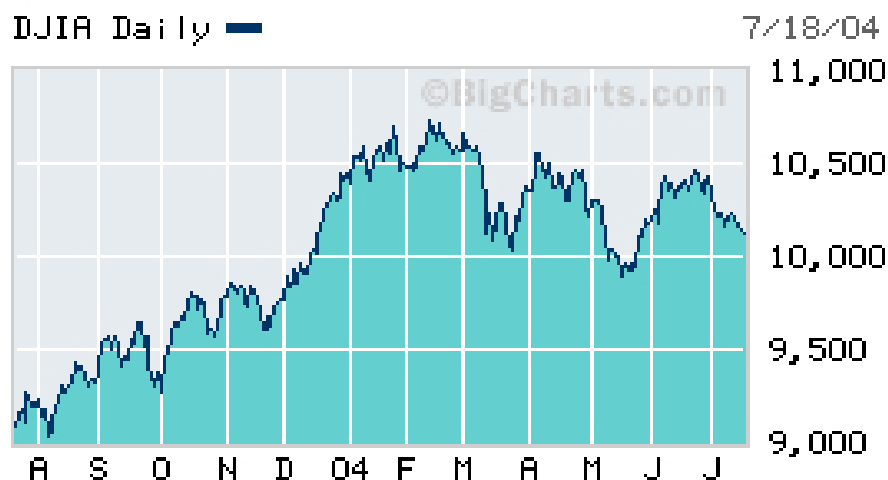


Figure 1.2: The change in the Dow Jones stock index over one year (from April 2003 to July 2004).

Table 1.2: Temperature vs. Altitude

Altitude (feet)	Temperature °F
0	59.0
2,000	51.9
4,000	44.7
6,000	37.6
8,000	30.5
10,000	23.3
12,000	16.2
14,000	9.1
16,000	1.9

First of all, the plot axes **must be labeled**. This will be emphasized throughout the semester. In order to quickly look at a graph and determine what information is being conveyed, it is imperative that both the x-axis and y-axis have labels.

Secondly, if you are creating a plot, choose the numerical range for your axes such that the data fit nicely on the plot. For example, if you were to plot the data shown in Table 1.2, with altitude on the y-axis, you would want to choose your range of y-values to be something like 0 to 18,000. If, for example, you drew your y-axis going from 0 to 100,000, then all of the data would be compressed towards the lower portion of the page. It is important to choose your *ranges* for the x and y axes so they bracket the data points.

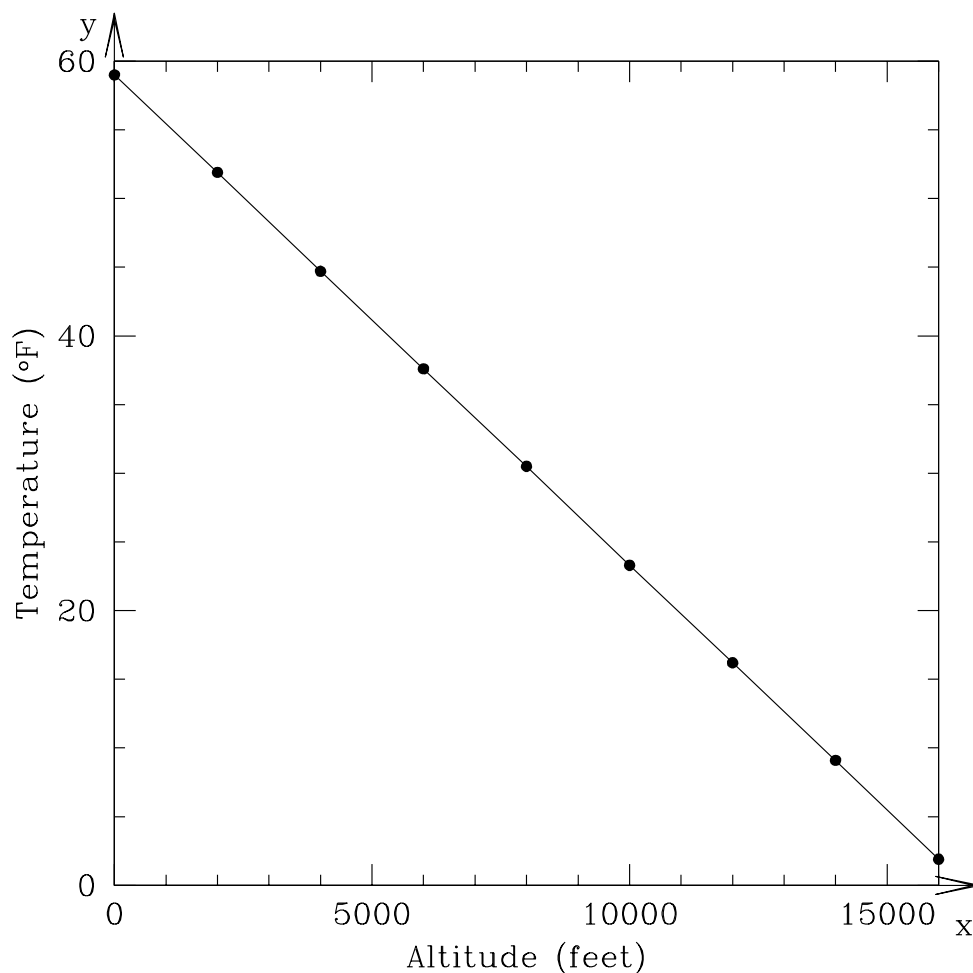


Figure 1.3: The change in temperature as you climb in altitude with the data from Table 1.2. At sea level (0 ft altitude) the surface temperature is 59°F. As you go higher in altitude, the temperature goes down.

### 1.8.2 Plotting and Interpreting a Graph

Table 1.3 contains hourly temperature data on January 19, 2006, for two locations: Tucson and Honolulu.

23. On the blank sheet of graph paper in Figure 1.4, plot the hourly temperatures measured for Tucson and Honolulu on 19 January 2006. **(10 points)**
24. Which city had the highest temperature on 19 January 2006? **(2 points)**
25. Which city had the highest *average* temperature? **(2 points)**

Table 1.3: Hourly Temperature Data from 19 January 2006

Time hh:mm	Tucson Temp. °F	Honolulu Temp. °F
00:00	49.6	71.1
01:00	47.8	71.1
02:00	46.6	71.1
03:00	45.9	70.0
04:00	45.5	72.0
05:00	45.1	72.0
06:00	46.0	73.0
07:00	45.3	73.0
08:00	45.7	75.0
09:00	46.6	78.1
10:00	51.3	79.0
11:00	56.5	80.1
12:00	59.0	81.0
13:00	60.8	82.0
14:00	60.6	81.0
15:00	61.7	79.0
16:00	61.7	77.0
17:00	61.0	75.0
18:00	59.2	73.0
19:00	55.0	73.0
20:00	53.4	72.0
21:00	51.6	71.1
22:00	49.8	72.0
23:00	48.9	72.0
24:00	47.7	72.0

26. Which city heated up the fastest in the morning hours? (**2 points**)

While straight lines and perfect data show up in science from time to time, it is actually quite rare for *real* data to fit perfectly on top of a line. One reason for this is that all measurements have *error*. So even though there might be a perfect relationship between  $x$  and  $y$ , the uncertainty of the measurements introduces small deviations from the line. In other cases, the data are *approximated* by a line. This is sometimes called a *best-fit* relationship for the data.

## 1.9 Does it Make Sense?

This is a question that you should be asking yourself after *every* calculation that you do in this class!



Figure 1.4: Graph paper for plotting the hourly temperatures in Tucson and Honolulu.

One of our primary goals this semester is to help you develop intuition about our solar system. This includes recognizing if an answer that you get “makes sense.” For example, you may be told (or you may eventually know) that Mars is 1.5 AU from Earth. You also know that the Moon is a lot closer to the Earth than Mars is. So if you are asked to calculate the Earth-Moon distance and you get an answer of 4.5 AU, this should alarm you! That would imply that the Moon is **three times** farther away from Earth than Mars is! And you know that’s not right.

Use your intuition to answer the following questions. In addition to just giving your answer, state *why* you gave the answer you did. (**5 points each**)



27. Earth's diameter is 12,756 km. Jupiter's diameter is about 11 times this amount. Which makes more sense: Jupiter's diameter being 19,084 km or 139,822 km?
28. Sound travels through air at roughly 0.331 kilometers per second. If BX 102 suddenly exploded, which would make more sense for when people in Mesilla (almost 5 km away) would hear the blast? About 14.5 seconds later, or about 6.2 minutes later?
29. Water boils at 100 °C. Without knowing anything about the planet Pluto other than the fact that is roughly 40 times farther from the Sun than the Earth is, would you expect the surface temperature of Pluto to be closer to -100° or 50°?

## 1.10 Putting it All Together

We have covered a lot of tools that you will need to become familiar with in order to complete the labs this semester. Now let's see how these concepts can be used to answer real questions about our solar system. *Remember, ask yourself **does this make sense?** for each answer that you get!*

30. To travel from Las Cruces to New York City by car, you would drive 3585 km. What is this distance in AU? (**10 points**)

31. The Earth is 4.5 billion years old. The dinosaurs were killed 65 million years ago due to a giant impact by a comet or asteroid that hit the Earth. If we were to compress the history of the Earth from 4.5 billion years into one 24-hour day, at what time would the dinosaurs have been killed? (**10 points**)
32. When it was launched towards Pluto, the New Horizons spacecraft was traveling at approximately 20 kilometers per second. How long did it take to reach Jupiter, which is roughly 4 AU from Earth? [Hint: see the definition of an AU in Section 1.3 of this lab.] (**7 points**)

Name: \_\_\_\_\_  
Date: \_\_\_\_\_

## 2 Scale Model of the Solar System

### 2.1 Introduction

The Solar System is large, at least when compared to distances we are familiar with on a day-to-day basis. Consider that for those of you who live here in Las Cruces, you travel 2 kilometers (or 1.2 miles) on average to campus each day. If you go to Albuquerque on weekends, you travel about 375 kilometers (232.5 miles), and if you travel to Disney Land for Spring Break, you travel  $\sim 1,300$  kilometers ( $\sim 800$  miles), where the ‘ $\sim$ ’ symbol means “approximately.” These are all distances we can mentally comprehend.

Now, how large is the Earth? If you wanted to take a trip to the center of the Earth (the very hot “core”), you would travel 6,378 kilometers (3954 miles) from Las Cruces down through the Earth to its center. If you then continued going another 6,378 kilometers you would ‘pop out’ on the other side of the Earth in the southern part of the Indian Ocean. Thus, the total distance through the Earth, or the **diameter** of the Earth, is 12,756 kilometers ( $\sim 7,900$  miles), or 10 times the Las Cruces-to-Los Angeles distance. Obviously, such a trip is impossible—to get to the southern Indian Ocean, you would need to travel on the surface of the Earth. How far is that? Since the Earth is a sphere, you would need to travel 20,000 km to go halfway around the Earth (remember the equation  $\text{Circumference} = 2\pi R$ ?). This is a large distance, but we’ll go farther still.

Next, we’ll travel to the Moon. The Moon, Earth’s natural satellite, orbits the Earth at a distance of  $\sim 400,000$  kilometers ( $\sim 240,000$  miles), or about 30 times the diameter of the Earth. This means that you could fit roughly 30 Earths end-to-end between here and the Moon. This Earth-Moon distance is  $\sim 200,000$  times the distance you travel to campus each day (if you live in Las Cruces). So you can see, even though it is located very close to us, it is a long way to the Earth’s nearest neighbor.

Now let’s travel from the Earth to the Sun. The *average Earth-to-Sun distance*,  $\sim 150$  million kilometers ( $\sim 93$  million miles), is referred to as one **Astronomical Unit** (AU). When we look at the planets in our Solar System, we can see that the planet Mercury, which orbits nearest to the Sun, has an average distance of 0.4 AU and Pluto, the planet almost always the furthest from the Sun, has an average distance of 40 AU. Thus, the Earth’s distance from the Sun is only 2.5 percent of the distance between the Sun and planet Pluto!! Pluto is very far away!

The purpose of today’s lab is to allow you to develop a better appreciation for the distances between the largest objects in our solar system, and the physical sizes of these objects relative to each other. To achieve this goal, we will use the length of the football field in Aggie Memorial Stadium as our platform for developing a scale model of the Solar System. A *scale*

*model* is simply a tool whereby we can use manageable distances to represent larger distances or sizes (like the road map of New Mexico used in Lab #1). We will properly distribute our planets on the football field in the same *relative* way they are distributed in the real Solar System. *The length of the football field will represent the distance between the Sun and the planet Pluto.* We will also determine what the sizes of our planets should be to appropriately fit on the same scale. Before you start, what do you think this model will look like?

Below you will proceed through a number of steps that will allow for the development of a scale model of the Solar System. For this exercise, we will use the convenient unit of the Earth-Sun distance, the Astronomical Unit (AU). Using the AU allows us to keep our numbers to manageable sizes.

SUPPLIES: a calculator, Appendix E in your textbook, the football field in Aggie Memorial Stadium, and a collection of different sized spherical-shaped objects

## 2.2 The Distances of the Planets From the Sun

Fill in the first and second columns of Table 6.1. In other words, list, in order of increasing distance from the Sun, the planets in our solar system and their average distances from the Sun in Astronomical Units (usually referred to as the “semi-major axis” of the planet’s orbit). You can find these numbers in back of your textbook. **(21 points)**

Table 2.1: Planets’ average distances from Sun.

Planet	Average Distance From Sun	
	AU	Yards
Earth	1	
Pluto	40	100

Next, we need to convert the distance in AU into the unit of a football field: the yard. This is called a “scale conversion”. Determine the SCALED orbital semi-major axes of the planets, based upon the assumption that the Sun-to-Pluto average distance in Astronomical Units (which is already entered into the table, above) is represented by 100 yards, or goal-line to goal-line, on the football field. To determine similar scalings for each of the planets, you

must figure out how many yards there are per AU, and use that relationship to fill in the values in the third column of Table 6.1.

## 2.3 Sizes of Planets

You have just determined where on the football field the planets will be located in our scaled model of the Solar System. Now it is time to determine how large (or small) the planets themselves are on the **same** scale.

We mentioned in the introduction that the diameter of the Earth is 12,756 kilometers, while the distance from the Sun to Earth (1 AU) is equal to 150,000,000 km. We have also determined that in our scale model, 1 AU is represented by 2.5 yards (= 90 inches).

We will start here by using the largest object in the solar system, the Sun, as an example for how we will determine how large the planets will be in our scale model of the solar system. The Sun has a diameter of  $\sim 1,400,000$  (1.4 million) kilometers, more than 100 times greater than the Earth's diameter! Since in our scaled model 150,000,000 kilometers (1 AU) is equivalent to 2.5 yards, how many inches will correspond to 1,400,000 kilometers (the Sun's actual diameter)? This can be determined by the following calculation:

$$\text{Scaled Sun Diameter} = \text{Sun's true diameter (km)} \times \frac{(90 \text{ in.})}{(150,000,000 \text{ km})} = \mathbf{0.84 \text{ inches}}$$

So, on the scale of our football field Solar System, the *scaled Sun* has a diameter of only 0.84 inches!! Now that we have established the scaled Sun's size, let's proceed through a similar exercise for each of the nine planets, and the Moon, using the same formula:

$$\text{Scaled object diameter (inches)} = \text{actual diameter (km)} \times \frac{(90 \text{ in.})}{(150,000,000 \text{ km})}$$

Using this equation, fill in the values in Table 6.2 (**8 points**).

Now we have all the information required to create a scaled model of the Solar System. Using any of the items listed in Table 6.3 (spheres of different diameter), select the ones that most closely approximate the sizes of your scaled planets, along with objects to represent both the Sun and the Moon.

Designate one person for each planet, one person for the Sun, and one person for the Earth's Moon. Each person should choose the model object which represents their solar system object, and then walk (or run) to that object's scaled orbital semi-major axis on the football field. The Sun will be on the goal line of the North end zone (towards the Pan Am Center) and Pluto will be on the south goal line.

### Observations:

On Earth, we see the Sun as a disk. Even though the Sun is far away, it is physically so large, we can actually see that it is a round object with our naked eyes (unlike the planets,

Table 2.2: Planets' diameters in a football field scale model.

<b>Object</b>	<b>Actual Diameter (km)</b>	<b>Scaled Diameter (inches)</b>
Sun	~ 1,400,000	0.84
Mercury	4,878	
Venus	12,104	
Earth	12,756	0.0075
Moon	3,476	
Mars	6,794	
Jupiter	142,800	
Saturn	120,540	
Uranus	51,200	
Neptune	49,500	
Pluto	2,200	0.0013

Table 2.3: Objects that Might Be Useful to Represent Solar System Objects

<b>Object</b>	<b>Diameter (inches)</b>
Basketball	15
Tennis ball	2.5
Golf ball	1.625
Nickel	0.84
Marble	0.5
Peppercorn	0.08
Sesame seed	0.07
Poppy seed	0.04
Sugar grain	0.02
Salt grain	0.01
Ground flour	0.001

where we need a telescope to see their tiny disks). Let's see what the Sun looks like from the other planets! Ask each of the "planets" whether they can tell that the Sun is a round object from their "orbit". What were their answers? List your results here: **(5 points)**:

Note that because you have made a "scale model", the results you just found would be exactly what you would see if you were standing on one of those planets!

## 2.4 Questions About the Football Field Model

When all of the "planets" are in place, note the relative spacing between the planets, and the size of the planets relative to these distances. Answer the following questions using the information you have gained from this lab and your own intuition:

1) Is this spacing and planet size distribution what you expected when you first began thinking about this lab today? Why or why not? **(10 points)**

2) Given that there is very little material between the planets (some dust, and small bits of rock), what do you conclude about the nature of our solar system? **(5 points)**



3) Which planet would you expect to have the warmest surface temperature? Why? (**2 points**)

4) Which planet would you expect to have the coolest surface temperature? Why? (**2 points**)

5) Which planet would you expect to have the greatest mass? Why? (**3 points**)

6) Which planet would you expect to have the longest orbital period? Why? (**2 points**)

7) Which planet would you expect to have the shortest orbital period? Why? (**2 points**)

8) The Sun is a normal sized star. As you will find out at the end of the semester, it will one day run out of fuel (this will happen in about 5 billion years). When this occurs, the Sun will undergo dramatic changes: it will turn into something called a “red giant”, a cool star that has a radius that may be  $100\times$  that of its current value! When this happens, some of the innermost planets in our solar system will be “swallowed-up” by the Sun. Calculate which planets will be swallowed-up by the Sun (**5 points**).

## 2.5 Take Home Exercise (35 points total)

Now you will work out the numbers for a scale model of the Solar System for which the size of New Mexico along Interstate Highway 25 will be the scale.

Interstate Highway 25 begins in Las Cruces, just southeast of campus, and continues north through Albuquerque, all the way to the border with Colorado. The total distance of I-25 in New Mexico is 455 miles. Using this distance to represent the Sun to Pluto distance (40 AU), and assuming that the Sun is located at the start of I-25 here in Las Cruces and Pluto is located along the Colorado-New Mexico border, you will determine:

- the scaled locations of each of the planets in the Solar System; that is, you will determine the city along the highway (I-25) each planet will be located nearest to, and how far north or south of this city the planet will be located. If more than one planet is located within a given city, identify which street or exit the city is nearest to.
- the size of the Solar system objects (the Sun, each of the planets) on this same scale, for which 455 miles ( $\sim 730$  kilometers) corresponds to 40 AU. Determine how large each of these scaled objects will be (probably best to use feet; there are 5280 feet per mile), and suggest a real object which well represents this size. For example, if one of the scaled Solar System objects has a diameter of 1 foot, you might suggest a soccer ball as the object that best represents the relative size of this object.

**If you have questions, this is a good time to ask!!!!!!**

1. List the planets in our solar system and their average distances from the Sun in units of Astronomical Units (AU). Then, using a scale of  $40 \text{ AU} = 455 \text{ miles}$  ( $1 \text{ AU} = 11.375 \text{ miles}$ ), determine the scaled planet-Sun distances and the city near the location of this planet's scaled average distance from the Sun. Insert these values into Table 6.4, and draw on your map of New Mexico (on the next page) the locations of the solar system objects. **(20 points)**
2. Determine the scaled size (diameter) of objects in the Solar System for a scale in which  $40 \text{ AU} = 455 \text{ miles}$ , or  $1 \text{ AU} = 11.375 \text{ miles}$ . Insert these values into Table 6.5. **(15 points)**

$$\text{Scaled diameter (feet)} = \text{actual diameter (km)} \times \frac{(11.4 \text{ mi.} \times 5280 \text{ ft/mile})}{150,000,000 \text{ km}}$$

Table 2.4: Planets' average distances from Sun.

Planet	Average Distance from Sun		Nearest City
	in AU	in Miles	
Earth	1	11.375	
Jupiter	5.2		
Uranus	19.2		
Pluto	40	455	3 miles north of Raton

Table 2.5: Planets' diameters in a New Mexico scale model.

Object	Actual Diameter (km)	Scaled Diameter (feet)	Object
Sun	~ 1,400,000	561.7	
Mercury	4,878		
Venus	12,104		
Earth	12,756	5.1	height of 12 year old
Mars	6,794		
Jupiter	142,800		
Saturn	120,540		
Uranus	51,200		
Neptune	49,500		
Pluto	2,200	0.87	soccer ball







## 2.6 Possible Quiz Questions

1. What is the approximate diameter of the Earth?
2. What is the definition of an Astronomical Unit?
3. What value is a “scale model”?

## 2.7 Extra Credit (ask your TA for permission before attempting, 5 points)

Later this semester we will talk about comets, objects that reside on the edge of our Solar System. Most comets are found either in the “Kuiper Belt”, or in the “Oort Cloud”. The Kuiper belt is the region that starts near Pluto’s orbit, and extends to about 100 AU. The Oort cloud, however, is enormous: it is estimated to be 40,000 AU in radius! Using your football field scale model answer the following questions:

- 1) How many yards away would the edge of the Kuiper belt be from the northern goal line at Aggie Memorial Stadium?
- 2) How many football fields does the radius of the Oort cloud correspond to? If there are 1760 yards in a mile, how many miles away is the edge of the Oort cloud from the northern goal line at Aggie Memorial Stadium?

Name(s): \_\_\_\_\_  
Date: \_\_\_\_\_

## 3 The Origin of the Seasons

### 3.1 Introduction

The origin of the science of Astronomy owes much to the need of ancient peoples to have a practical system that allowed them to predict the seasons. It is critical to plant your crops at the right time of the year—too early and the seeds may not germinate because it is too cold, or there is insufficient moisture. Plant too late and it may become too hot and dry for a sensitive seedling to survive. In ancient Egypt, they needed to wait for the Nile to flood. The Nile river would flood every July, once the rains began to fall in Central Africa.

Thus, the need to keep track of the annual cycle arose with the development of agriculture, and this required an understanding of the motion of objects in the sky. The first devices used to keep track of the seasons were large stone structures (such as Stonehenge) that used the positions of the rising Sun or Moon to forecast the coming seasons. The first recognizable calendars that we know about were developed in Egypt, and appear to date from about 4,200 BC. Of course, all a calendar does is let you know what time of year it was, it does not provide you with an understanding of *why* the seasons occur! The ancient people had a variety of models for why seasons occurred, but thought that everything, including the Sun and stars, orbited around the Earth. Today, you will learn the real reason *why* there are seasons.

- *Goals:* To learn why the Earth has seasons.
- *Materials:* a meter stick, a mounted plastic globe, an elevation angle apparatus, string, a halogen lamp, and a few other items

### 3.2 The Seasons

Before we begin today's lab, let us first talk about the seasons. In New Mexico we have rather mild Winters, and hot Summers. In the northern parts of the United States, however, the winters are much colder. In Hawaii, there is very little difference between Winter and Summer. As you are also aware, during the Winter there are fewer hours of daylight than in the Summer. In Table 3.1 we have listed seasonal data for various locations around the world. Included in this table are the average January and July maximum temperatures, the latitude of each city, and the length of the daylight hours in January and July. We will use this table in Exercise #2.

In Table 3.1, the “N” following the latitude means the city is in the northern hemisphere of the Earth (as is all of the United States and Europe) and thus *North* of the equator. An “S” following the latitude means that it is in the southern hemisphere, *South* of the Earth's

Table 3.1: **Season Data for Select Cities**

City	Latitude (Degrees)	January Ave. Max. Temp.	July Ave. Max. Temp.	January Daylight Hours	July Daylight Hours
Fairbanks, AK	64.8N	-2	72	3.7	21.8
Minneapolis, MN	45.0N	22	83	9.0	15.7
Las Cruces, NM	32.5N	57	96	10.1	14.2
Honolulu, HI	21.3N	80	88	11.3	13.6
Quito, Ecuador	0.0	77	77	12.0	12.0
Apia, Samoa	13.8S	80	78	11.1	12.7
Sydney, Australia	33.9S	78	61	14.3	10.3
Ushuaia, Argentina	54.6S	57	39	17.3	7.4

equator. What do you think the latitude of Quito, Ecuador ( $0.0^\circ$ ) means? Yes, it is right on the equator. Remember, latitude runs from  $0.0^\circ$  at the equator to  $\pm 90^\circ$  at the poles. If north of the equator, we say the latitude is XX degrees north (or sometimes “+XX degrees”), and if south of the equator we say XX degrees south (or “−XX degrees”). We will use these terms shortly.

Now, if you were to walk into the Mesilla Valley Mall and ask a random stranger “why do we have seasons”? The most common answer you would get is “because we are closer to the Sun during Summer, and further from the Sun in Winter”. This answer suggests that the general public (and most of your classmates) correctly understand that the Earth orbits the Sun in such a way that at some times of the year it is closer to the Sun than at other times of the year. As you have (or will) learn in your lecture class, the orbits of all planets around the Sun are ellipses. As shown in Figure 3.1 an ellipse is sort of like a circle that has been squashed in one direction. For most of the planets, however, the orbits are only very slightly elliptical, and closely approximate circles. But let us explore this idea that the distance from the Sun causes the seasons.

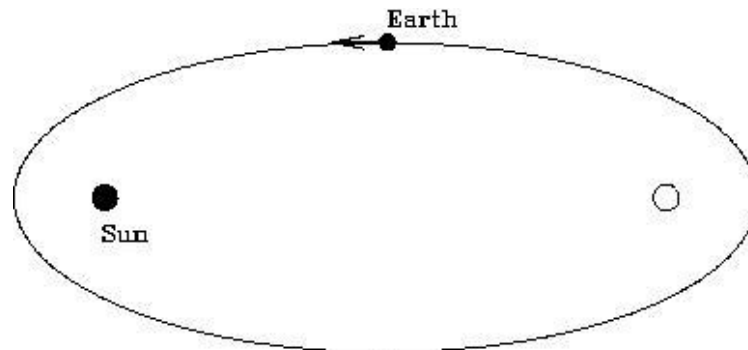


Figure 3.1: An ellipse with the two “foci” identified. The Sun sits at one focus, while the other focus is empty. The Earth follows an elliptical orbit around the Sun, but not nearly as exaggerated as that shown here!



**Exercise #1.** In Figure 3.1, we show the locations of the two “foci” of an ellipse (foci is the plural form of focus). We will ignore the mathematical details of what foci are for now, and simply note that the Sun sits at one focus, while the other focus is empty (see the Kepler Law lab for more information if you are interested). A planet orbits around the Sun in an elliptical orbit. So, there are times when the Earth is closest to the Sun (“perihelion”), and times when it is furthest (“aphelion”). When closest to the Sun, at perihelion, the distance from the Earth to the Sun is 147,056,800 km (“147 million kilometers”). At aphelion, the distance from the Earth to the Sun is 152,143,200 km (152 million km).

With the meter stick handy, we are going to examine these distances. Obviously, our classroom is not big enough to use kilometers or even meters so, like a road map, we will have to use a reduced scale: 1 cm = 1 million km. Now, stick a piece of tape on the table and put a mark on it to set the starting point (the location of the Sun!). Carefully measure out the two distances (along the same direction) and stick down two more pieces of tape, one at the perihelion distance, one at the aphelion distance (put small dots/marks on the tape so you can easily see them).

1) Do you think this change in distance is big enough to cause the seasons? Explain your logic. **(3 points)**

2) Take the ratio of the aphelion to perihelion distances: \_\_\_\_\_. **(1 point)**

Given that *we know* objects appear bigger when we are closer to them, let’s take a look at the two pictures of the Sun you were given as part of the materials for this lab. One image was taken on January 23<sup>rd</sup>, 1992, and one was taken on the 21<sup>st</sup> of July 1992 (as the “date stamps” on the images show). Using a ruler, *carefully* measure the diameter of the Sun in each image:

Sun diameter in January image = \_\_\_\_\_ mm.

Sun diameter in July image = \_\_\_\_\_ mm.

3) Take the ratio of bigger diameter / smaller diameter, this = \_\_\_\_\_. **(1 point)**

4) How does this ratio compare to the ratio you calculated in question #2? **(2 points)**

5) So, if an object appears bigger when we get closer to it, in what month is the Earth

closest to the Sun? (**2 points**)

6) At that time of year, what season is it in Las Cruces? What do you conclude about the statement “the seasons are caused by the changing distance between the Earth and the Sun”? (**4 points**)

**Exercise #2.** Characterizing the nature of the seasons at different locations. For this exercise, we are going to be exclusively using the data contained in Table 3.1. First, let’s look at Las Cruces. Note that here in Las Cruces, our latitude is  $+32.5^\circ$ . That is we are about one third of the way from the equator to the pole. In January our average high temperature is  $57^\circ\text{F}$ , and in July it is  $96^\circ\text{F}$ . It is hotter in Summer than Winter (duh!). Note that there are about 10 hours of daylight in January, and about 14 hours of daylight in July.

7) Thus, for Las Cruces, the Sun is “up” longer in July than in January. Is the same thing true for all cities with northern latitudes: Yes or No ? (**1 point**)

Ok, let’s compare *Las Cruces with Fairbanks, Alaska*. Answer these questions by filling in the blanks:

8) Fairbanks is \_\_\_\_\_ the North Pole than Las Cruces. (**1 point**)

9) In January, there are more daylight hours in \_\_\_\_\_. (**1 point**)

10) In July, there are more daylight hours in \_\_\_\_\_. (**1 point**)

Now let’s compare *Las Cruces with Sydney, Australia*. Answer these questions by filling in the blanks:

12) While the latitudes of Las Cruces and Sydney are similar, Las Cruces is \_\_\_\_\_ of the Equator, and Sydney is \_\_\_\_\_ of the Equator. (**2 points**)

13) In January, there are more daylight hours in \_\_\_\_\_. (**1 point**)

14) In July, there are more daylight hours in \_\_\_\_\_. (**1 point**)

15) **Summarizing:** During the Wintertime (January) in both Las Cruces and Fairbanks there are fewer daylight hours, *and* it is colder. During July, it is warmer in both Fairbanks

and Las Cruces, *and* there are more daylight hours. Is this also true for Sydney?:  
\_\_\_\_\_. (1 point)

16) In fact, it is Wintertime in Sydney during \_\_\_\_\_, and Summertime during  
\_\_\_\_\_. (2 points)

17) From Table 3.1, I conclude that the times of the seasons in the Northern hemisphere are exactly \_\_\_\_\_ to those in the Southern hemisphere. (1 point)

From Exercise #2 we learned a few simple truths, but ones that maybe you have never thought about. As you move away from the equator (either to the north or to the south) there are several general trends. The first is that as you go closer to the poles it is *generally* cooler at all times during the year. The second is that as you get closer to the poles, the amount of daylight during the Winter decreases, but the reverse is true in the Summer.

The first of these is not always true because the local climate can be moderated by the proximity to a large body of water, or depend on the elevation. For example, Sydney is milder than Las Cruces, even though they have similar latitudes: Sydney is on the eastern coast of Australia (South Pacific ocean), and has a climate like that of San Diego, California (which has a similar latitude and is on the coast of the North Pacific). Quito, Ecuador has a mild climate even though it sits right on the equator due to its high elevation—it is more than 9,000 feet above sea level, similar to the elevation of Cloudcroft, New Mexico.

The second conclusion (amount of daylight) is always true—as you get closer and closer to the poles, the amount of daylight during the Winter decreases, while the amount of daylight during the Summer increases. In fact, for all latitudes north of  $66.5^\circ$ , the Summer Sun is up all day (24 hrs of daylight, the so called “land of the midnight Sun”) for at least one day each year, while in the Winter there are times when the Sun never rises!  $66.5^\circ$  is a special latitude, and is given the name “Arctic Circle”. Note that Fairbanks is very close to the Arctic Circle, and the Sun is up for just a few hours during the Winter, but is up for nearly 22 hours during the Summer! The same is true for the southern hemisphere: all latitudes south of  $-66.5^\circ$  experience days with 24 hours of daylight in the Summer, and 24 hours of darkness in the Winter.  $-66.5^\circ$  is called the “Antarctic Circle”. But note that the seasons in the Southern Hemisphere are exactly opposite to those in the North. During Northern Winter, the North Pole experiences 24 hours of darkness, but the South Pole has 24 hours of daylight.

### 3.3 The Spinning, Revolving Earth

It is clear from the preceding that your latitude determines both the annual variation in the amount of daylight, and the time of the year when you experience Spring, Summer, Autumn and Winter. To truly understand why this occurs requires us to construct a model. One of the key insights to the nature of the motion of the Earth is shown in the long exposure photographs of the nighttime sky on the next two pages.



Figure 3.2: Pointing a camera to the North Star (Polaris, the bright dot near the center) and exposing for about one hour, the stars appear to move in little arcs. The center of rotation is called the “North Celestial Pole”, and Polaris is very close to this position. The dotted/dashed trails in this photograph are the blinking lights of airplanes that passed through the sky during the exposure.

What is going on in these photos? The easiest explanation is that the Earth is spinning, and as you keep your camera shutter open, the stars appear to move in “orbits” around the North Pole. You can duplicate this motion by sitting in a chair that is spinning—the objects in the room appear to move in circles around you. The further they are from the “axis of rotation”, the bigger arcs they make, and the faster they move. An object straight above you, exactly on the axis of rotation of the chair, does not move. As apparent in Figure 3.3, the “North Star” Polaris is not perfectly on the axis of rotation at the North Celestial Pole, but it is very close (the fact that there is a bright star near the pole is just random chance). Polaris has been used as a navigational aid for centuries, as it allows you to determine the direction of North.

As the second photograph shows, the direction of the spin axis of the Earth does not change during the year—it stays pointed in the same direction *all* of the time! If the Earth’s spin axis moved, the stars would not make perfect circular arcs, but would wander




Figure 3.3: Here is a composite of many different exposures (each about one hour in length) of the night sky over Vienna, Austria taken throughout the year (all four seasons). The images have been composited using a software package like Photoshop to demonstrate what would be possible if it stayed dark for 24 hrs, and you could actually obtain a 24 hour exposure (which can only be truly done north of the Arctic circle). Polaris is the smallest circle at the very center.

around in whatever pattern was being executed by the Earth’s axis.

Now, as shown back in Figure 3.1, we said the Earth orbits (“revolves” around) the Sun on an ellipse. We could discuss the evidence for this, but to keep this lab brief, we will just assume this fact. So, now we have two motions: the spinning and revolving of the Earth. It is the combination of these that actually give rise to the seasons, as you will find out in the next exercise.

**Exercise #3:** In this part of the lab, we will be using the mounted plastic globe, a piece of string, a ruler, and the halogen desk lamp. **Warning: while the globe used here is made of fairly inexpensive parts, it is very time consuming to make. Please be careful with your globe, as the painted surface can be easily scratched.** Make sure that the piece of string you have is long enough to go slightly more than halfway

around the globe at the equator—if your string is not that long, ask your TA for a longer piece of string. As you may have guessed, this plastic globe is a model of the Earth. The spin axis of the Earth is actually tilted with respect to the plane of its orbit by  $23.5^\circ$ . Set up the experiment in the following way. Place the halogen lamp at one end of the table (shining towards the closest wall so as to not affect your classmates), and set the globe at a distance of 1.5 meters from the lamp. After your TA has dimmed the classroom lights, turn on the halogen lamp to the highest setting (depending on the lamp, there may be a dim, and a bright setting). Note these lamps get very hot, so be careful. For this lab, we will define the top of the globe as the Northern hemisphere, and the bottom as the Southern hemisphere.

First off, it will be helpful to know the length of the entire arc at the 4 latitudes at which you'll be measuring later. Using the piece of string, measure the length of the arc at each latitude and note it below.

Table 3.2: Total Arc Length

Latitude	Total Length of Arc
Arctic Circle	
$45^\circ\text{N}$	
Equator	
Antarctic Circle	

**Experiment #1:** For the first experiment, *arrange the globe so the axis of the “Earth” is pointed at a right angle ( $90^\circ$ ) to the direction of the “Sun”*. Use your best judgement. Now adjust the height of the desk lamp so that the light bulb in the lamp is at the same approximate height as the equator.

There are several colored lines on the globe that form circles which are concentric with the axis, and these correspond to certain latitudes. The red line is the equator, the black line is  $45^\circ$  North, while the two blue lines are the Arctic (top) and Antarctic (bottom) circles.

Note that there is an illuminated half of the globe, and a dark half of the globe. The line that separates the two is called the “terminator”. It is the location of sunrise or sunset. Using the piece of string, we want to measure the length of each arc that is in “daylight”, and the length that is in “night”. This is kind of tricky, and requires a bit of judgement as to exactly where the terminator is located. So make sure you have a helper to help keep the string *exactly* on the line of constant latitude, and get the advice of your lab partners of where the terminator is (and it is probably best to do this more than once!). Fill in the following table (**4 points**):

As you know, the Earth rotates once every 24 hours (= 1 Day). Each of the lines of constant latitude represents a full circle that contains  $360^\circ$ . But note that these circles get smaller in radius as you move away from the equator. The circumference of the Earth at the

Table 3.3: Position #1: Equinox Data Table

Latitude	Length of Daylight Arc	Length of Nighttime Arc
Arctic Circle		
45°N		
Equator		
Antarctic Circle		

equator is 40,075 km (or 24,901 miles). At a latitude of 45°, the circle of constant latitude has a circumference of 28,333 km. At the arctic circles, the circle has a circumference of only 15,979 km. This is simply due to our use of two coordinates (longitude and latitude) to define a location on a sphere.

Since the Earth is a solid body, all of the points on Earth rotate once every 24 hours. Therefore, the sum of the daytime and nighttime arcs you measured equals 24 hours! So, fill in the following table (**2 points**):

Table 3.4: Position #1: Length of Night and Day

Latitude	Daylight Hours	Nighttime Hours
Arctic Circle		
45°N		
Equator		
Antarctic Circle		

18) The caption for Table 3.3 was “Equinox data”. The word Equinox means “equal nights”, as the length of the nighttime is the same as the daytime. While your numbers in Table 3.4 may not be exactly perfect, what do you conclude about the length of the nights and days for *all* latitudes on Earth in this experiment? Is this result consistent with the term Equinox? (**3 points**)

**Experiment #2:** Now we are going to *re-orient the globe so that the (top) polar axis points exactly away from the Sun* and repeat the process of Experiment #1. Fill in the following two tables (**4 points**):

19) Compare your results in Table 3.6 for +45° latitude with those for Minneapolis in Table 3.1. Since Minneapolis is at a latitude of +45°, what season does this orientation of the globe correspond to? (**2 points**)



Table 3.5: Position #2: Solstice Data Table

Latitude	Length of Daylight Arc	Length of Nighttime Arc
Arctic Circle		
45°N		
Equator		
Antarctic Circle		

Table 3.6: Position #2: Length of Night and Day

Latitude	Daylight Hours	Nighttime Hours
Arctic Circle		
45°N		
Equator		
Antarctic Circle		

20) What about near the poles? In this orientation what is the length of the nighttime at the North pole, and what is the length of the daytime at the South pole? Is this consistent with the trends in Table 3.1, such as what is happening at Fairbanks or in Ushuaia? (4 points)

**Experiment #3:** Now we are going to approximate the Earth-Sun orientation six months after that in Experiment #2. To do this correctly, the globe and the lamp should now switch locations. Go ahead and do this if this lab is confusing you—or you can simply *rotate the globe apparatus by 180° so that the North polar axis is tilted exactly towards the Sun*. Try to get a good alignment by looking at the shadow of the wooden axis on the globe. Since this is six months later, it easy to guess what season this is, but let's prove it! Complete the following two tables (4 points):

Table 3.7: Position #3: Solstice Data Table

Latitude	Length of Daylight Arc	Length of Nighttime Arc
Arctic Circle		
45°N		
Equator		
Antarctic Circle		

21) As in question #19, compare the results found here for the length of daytime and

Table 3.8: Position #3: Length of Night and Day

Latitude	Daylight Hours	Nighttime Hours
Arctic Circle		
45°N		
Equator		
Antarctic Circle		

nighttime for the +45° degree latitude with that for Minneapolis. What season does this appear to be? (**2 points**)

22) What about near the poles? In this orientation, how long is the daylight at the North pole, and what is the length of the nighttime at the South pole? Is this consistent with the trends in Table 3.1, such as what is happening at Fairbanks or in Ushuaia? (**2 points**)

23) Using your results for all three positions (Experiments #1, #2, and #3) can you explain what is happening at the Equator? Does the data for Quito in Table 3.1 make sense? Why? Explain. (**3 points**)

**We now have discovered the driver for the seasons:** the Earth spins on an axis that is inclined to the plane of its orbit (as shown in Figure 3.4). *But the spin axis always points to the same place in the sky* (towards Polaris). Thus, as the Earth orbits the Sun, the amount of sunlight seen at a particular latitude varies: the amount of daylight and nighttime hours change with the seasons. In Northern Hemisphere Summer (approximately June 21<sup>st</sup>) there are more daylight hours, at the start of the Autumn ( $\sim$  Sept. 20<sup>th</sup>) and Spring ( $\sim$  Mar. 21<sup>st</sup>) the days are equal to the nights. In the Winter (approximately Dec. 21<sup>st</sup>) the nights are long, and the days are short. We have also discovered that the seasons in the Northern

and Southern hemispheres are exactly opposite. If it is Winter in Las Cruces, it is Summer in Sydney (and vice versa). This was clearly demonstrated in our experiments, and is shown in Figure 3.4.

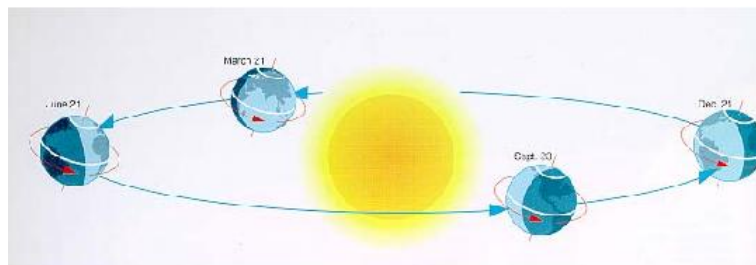


Figure 3.4: The Earth's spin axis always points to one spot in the sky, *and* it is tilted by  $23.5^\circ$  to its orbit. Thus, as the Earth orbits the Sun, the illumination changes with latitude: sometimes the North Pole is bathed in 24 hours of daylight, and sometimes in 24 hours of night. The exact opposite is occurring in the Southern Hemisphere.

The length of the daylight hours is one reason why it is hotter in Summer than in Winter: the longer the Sun is above the horizon the more it can heat the air, the land and the seas. But this is not the whole story. At the North Pole, where there is constant daylight during the Summer, the temperature barely rises above freezing! Why? We will discover the reason for this now.

### 3.4 Elevation Angle and the Concentration of Sunlight

We have found out part of the answer to why it is warmer in summer than in winter: the length of the day is longer in summer. But this is only part of the story—you would think that with days that are 22 hours long during the summer, it would be hot in Alaska and Canada during the summer, but it is not. The other affect caused by Earth's tilted spin axis is the changing height that the noontime Sun attains during the various seasons. Before we discuss why this happens (as it takes quite a lot of words to describe it correctly), we want to explore what happens when the Sun is higher in the sky. First, we need to define two new terms: "altitude", or "elevation angle". As shown in the diagram in Fig. 3.5.

The Sun is highest in the sky at noon everyday. But how high is it? This, of course, depends on both your latitude and the time of year. For Las Cruces, the Sun has an altitude of  $81^\circ$  on June 21<sup>st</sup>. On both March 21<sup>st</sup> and September 20<sup>th</sup>, the altitude of the Sun at noon is  $57.5^\circ$ . On December 21<sup>st</sup> its altitude is only  $34^\circ$ . Thus, the Sun is almost straight overhead at noon during near the Summer Solstice, but very low during the Winter Solstice. What difference can this possibly make? We now explore this using the other apparatus, the elevation angle device, that accompanies this lab (the one with the protractor and flashlight).

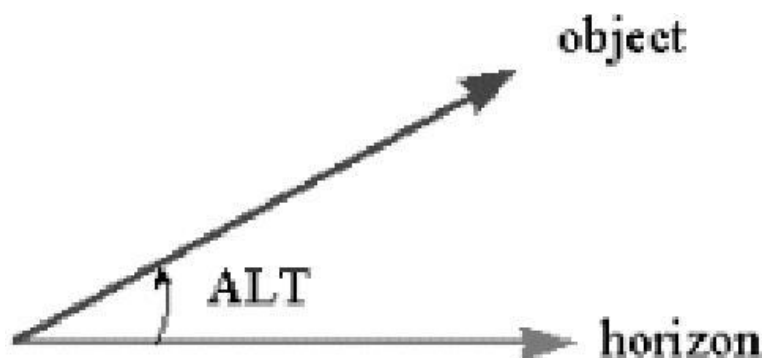


Figure 3.5: Altitude (“Alt”) is simply the angle between the horizon, and an object in the sky. The smallest this angle can be is  $0^\circ$ , and the maximum altitude angle is  $90^\circ$ . Altitude is interchangeably known as elevation.

**Exercise #4:** Using the elevation angle apparatus, we now want to measure what happens when the Sun is at a higher or lower elevation angle. We mimic this by a flashlight mounted on an arm that allows you to move it to just about any elevation angle. It is difficult to exactly model the Sun using a flashlight, as the light source is not perfectly uniform. But here we do as well as we can. Play around with the device.

24) Turn on the flashlight and move the arm to lower and higher angles. How does the illumination pattern change? Does the illuminated pattern appear to change in brightness as you change angles? Explain. **(2 points)**

Ok, now we are ready to begin to quantify this affect. Take a blank sheet of white paper and tape it to the base so we have a more reflective surface. Now arrange the apparatus so the elevation angle is  $90^\circ$ . The illuminated spot should look circular. Measure the diameter of this circle using a ruler.

25) The diameter of the illuminated circle is \_\_\_\_\_ cm.

Do you remember how to calculate the area of a circle? Does the formula  $\pi R^2$  ring a bell? R is the radius, not the diameter, so first you’ll need the radius of the circle.

The radius of the illuminated circle is \_\_\_\_\_ cm.

The area of the circle of light at an elevation angle of  $90^\circ$  is \_\_\_\_\_  $\text{cm}^2$ . **(1 point)**

Now, as you should have noticed at the beginning of this exercise, as you move the

flashlight to lower and lower elevations, the circle changes to an ellipse. Now adjust the elevation angle to be  $45^\circ$ . Ok, time to introduce you to two new terms: the major axis and minor axis of an ellipse. Both are shown in Fig. 3.6. The minor axis is the smallest diameter, while the major axis is the longest diameter of an ellipse.

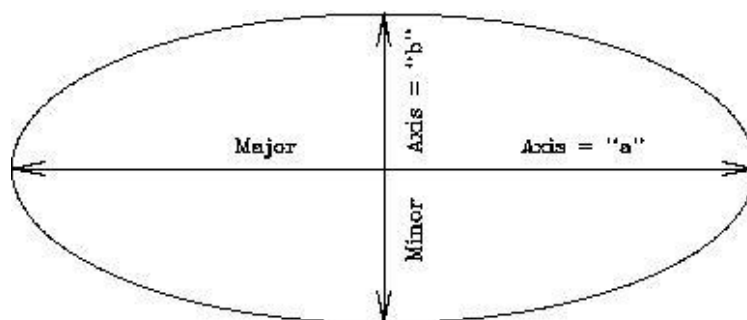


Figure 3.6: An ellipse with the major and minor axes defined.

Ok, now measure the lengths of the major (" $a$ ") and minor (" $b$ ") axes at  $45^\circ$ :

26) The major axis has a length of  $a =$  \_\_\_\_\_ cm, while the minor axis has a length of  $b =$  \_\_\_\_\_ cm.

The area of an ellipse is simply  $(\pi \times a \times b)/4$ . So, the area of the ellipse at an elevation angle of  $45^\circ$  is: \_\_\_\_\_  $\text{cm}^2$  (**1 point**).

So, why are we making you measure these areas? Note that the black tube restricts the amount of light coming from the flashlight into a cylinder. Thus, there is only a certain amount of light allowed to come out and hit the paper. Let's say there are "one hundred units of light" emitted by the flashlight. Now let's convert this to how many units of light hit each square centimeter at angles of  $90^\circ$  and  $45^\circ$ .

27) At  $90^\circ$ , the amount of light per centimeter is 100 divided by the Area of circle = \_\_\_\_\_ units of light per  $\text{cm}^2$  (**1 point**).

28) At  $45^\circ$ , the amount of light per centimeter is 100 divided by the Area of the ellipse = \_\_\_\_\_ units of light per  $\text{cm}^2$  (**1 point**).

29) Since light is a form of energy, at which elevation angle is there more energy per square centimeter? Since the Sun is our source of light, what happens when the Sun is higher in the sky? Is its energy more concentrated, or less concentrated? How about when it is low in the sky? Can you tell this by looking at how bright the ellipse appears versus the circle? (**4 points**)

As we have noted, the Sun never is very high in the arctic regions of the Earth. In fact, at the poles, the highest elevation angle the Sun can have is  $23.5^\circ$ . Thus, the light from the Sun is spread out, and cannot heat the ground as much as it can at a point closer to the equator. That's why it is always colder at the Earth's poles than elsewhere on the planet.

You are now finished with the in-class portion of this lab. To understand why the Sun appears at different heights at different times of the year takes a little explanation (and the following can be read at home unless you want to discuss it with your TA). Let's go back and take a look at Fig. 3.3. Note that Polaris, the North Star, barely moves over the course of a night or over the year—it is always visible. If you had a telescope and could point it accurately, you could see Polaris during the daytime too. Polaris never sets for people in the Northern Hemisphere since it is located very close to the spin axis of the Earth. Note that as we move away from Polaris the circles traced by other stars get bigger and bigger. But all of the stars shown in this photo are *always* visible—they never set. We call these stars “circumpolar”. For every latitude on Earth, there is a set of circumpolar stars (the number decreases as you head towards the equator).

Now let us add a new term to our vocabulary: the “Celestial Equator”. The Celestial Equator is the projection of the Earth's Equator onto the sky. It is a great circle that spans the night sky that is directly overhead for people who live on the Equator. As you have now learned, the lengths of the days and nights at the equator are nearly always the same: 12 hours. But we have also learned that during the Equinoxes, the lengths of the days and the nights *everywhere* on Earth are also twelve hours. Why? Because during the equinoxes, the Sun is *on the Celestial Equator*. That means it is straight overhead (at noon) for people who live in Quito, Ecuador (and everywhere else on the equator). Any object that is on the Celestial Equator is visible for 12 hours per night from everywhere on Earth. To try to understand this, take a look at Fig. 3.7. In this figure is shown the celestial geometry explicitly showing that the Celestial Equator is simply the Earth's equator projected onto the sky (left hand diagram). But the Earth is large, and to us, it appears flat. Since the objects in the sky are very far away, we get a view like that shown in the right hand diagram: we see one hemisphere of the sky, and the stars, planets, Sun and Moon rise in the east, and set in the west. But note that the Celestial Equator exactly intersects East and West. Only objects located on the Celestial Equator rise exactly due East, and set exactly due West. All other objects rise in the northeast or southeast and set in the northwest or the southwest. Note that in this diagram (for a latitude of  $40^\circ$ ) all stars that have latitudes (astronomers call them “Declinations”, or “dec”) above  $50^\circ$  never set—they are circumpolar.

What happens is that during the year, the Sun appears to move above and below the Celestial Equator. On, or about, March 21<sup>st</sup> the Sun is on the Celestial Equator, and each day after this it gets higher in the sky (for locations in the Northern Hemisphere) until June 21<sup>st</sup>. After which it retraces its steps until it reaches the Autumnal Equinox (September 20<sup>th</sup>), after which it is South of the Celestial Equator. It is lowest in the sky on December 21<sup>st</sup>. This is simply due to the fact that the Earth's axis is tilted with respect to its orbit, and this tilt does not change. You can see this geometry by going back to the illuminated globe model used in Exercise #3. If you stick a pin at some location on the globe away from the equator, turn on the halogen lamp, and slowly rotate the entire apparatus around (while

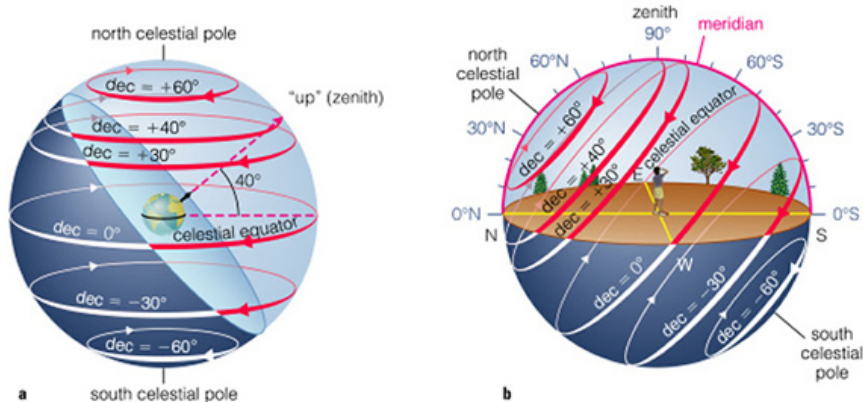


Figure 3.7: The Celestial Equator is the circle in the sky that is straight overhead (“the zenith”) of the Earth’s equator. In addition, there is a “North Celestial” pole that is the projection of the Earth’s North Pole into space (that almost points to Polaris). But the Earth’s spin axis is tilted by  $23.5^\circ$  to its orbit, and the Sun appears to move above and below the Celestial Equator over the course of a year.

keeping the pin facing the Sun) you will notice that the shadow of the pin will increase and decrease in size. This is due to the apparent change in the elevation angle of the “Sun”.

Name: \_\_\_\_\_  
Date: \_\_\_\_\_

### 3.5 Take Home Exercise (35 total points)

On a clean sheet of paper, answer the following questions:

1. Why does the Earth have seasons?
2. What is the origin of the term “Equinox”?
3. What is the origin of the term “Solstice”?
4. Most people in the United States think the seasons are caused by the changing distance between the Earth and the Sun. Why do you think this is?
5. What type of seasons would the Earth have if its spin axis was *exactly* perpendicular to its orbital plane? Make a diagram like Fig. 3.4.
6. What type of seasons would the Earth have if its spin axis was *in* the plane of its orbit? (Note that this is similar to the situation for the planet Uranus.)
7. What do you think would happen if the Earth’s spin axis wobbled randomly around on a monthly basis? Describe how we might detect this.

### 3.6 Possible Quiz Questions

- 1) What does the term “latitude” mean?
- 2) What is meant by the term “Equator”?
- 3) What is an ellipse?
- 4) What are meant by the terms perihelion and aphelion?
- 5) If it is summer in Australia, what season is it in New Mexico?

### 3.7 Extra Credit (make sure to ask your TA for permission before attempting, 5 points)

We have stated that the Earth’s spin axis constantly points to a single spot in the sky. This is actually not true. Look up the phrase “precession of the Earth’s spin axis”. Describe what is happening and the time scale of this motion. Describe what happens to the timing of the seasons due to this motion. Some scientists believe that precession might help cause ice ages. Describe why they believe this.



Name(s): \_\_\_\_\_  
Date: \_\_\_\_\_

## 4 Phases of the Moon

### 4.1 Introduction

Every once in a while, your teacher or TA is confronted by a student with the question “Why can I see the Moon today, is something wrong?”. Surprisingly, many students have never noticed that the Moon is visible in the daytime. The reason they are surprised is that it confronts their notion that the shadow of the Earth is the cause of the phases—it is obvious to them that the Earth cannot be causing the shadow if the Moon, Sun and Earth are simultaneously in view! Maybe you have a similar idea. You are not alone, surveys of science knowledge show that the idea that the shadow of the Earth causes lunar phases is one of the most common misconceptions among the general public. Today, you will learn why the Moon has phases, the names of these phases, and the time of day when these phases are visible.

Even though they adhered to a “geocentric” (Earth-centered) view of the Universe, it may surprise you to learn that the ancient Greeks completely understood why the Moon has phases. In fact, they noticed during lunar eclipses (when the Moon *does* pass through the Earth’s shadow) that the shadow was curved, and that the Earth, like the Moon, must be spherical. The notion that Columbus feared he would fall off the edge of the flat Earth is pure fantasy—it was not a flat Earth that was the issue of the time, *but how big the Earth actually was* that made Columbus’ voyage uncertain.

The phases of the Moon are cyclic, in that they repeat every month. In fact the word “month”, is actually an Old English word for the Moon. That the average month has 30 days is directly related to the fact that the Moon’s phases recur on a 29.5 day cycle. Note that it only takes the Moon 27.3 days to orbit once around the Earth, but the changing phases of the Moon are due to the relative positions of the Sun, Earth, and Moon. Given that the Earth is moving around the Sun, it takes a few days longer for the Moon to get to the same *relative* position each cycle.

Your textbook probably has a figure showing the changing phases exhibited by the Moon each month. Generally, we start our discussion of the changing phases of the Moon at “New Moon”. During New Moon, the Moon is invisible because it is in the same direction as the Sun, and cannot be seen. Note: because the orbit of the Moon is tilted with respect to the Earth’s orbit, the Moon rarely crosses in front of the Sun during New Moon. When it does, however, a spectacular “solar eclipse” occurs.

As the Moon continues in its orbit, it becomes visible in the western sky after sunset a few days after New Moon. At this time it is a thin “crescent”. With each passing day, the crescent becomes thicker, and thicker, and is termed a “waxing” crescent. About seven days

after New Moon, we reach “First Quarter”, a phase when we see a half moon. The visible, illuminated portion of the Moon continues to grow (“wax”) until fourteen days after New Moon when we reach “Full Moon”. At Full Moon, the entire, visible surface of the Moon is illuminated, and we see a full circle. After Full Moon, the illuminated portion of the Moon declines with each passing day so that at three weeks after New Moon we again see a half Moon which is termed “Third” or “Last” Quarter. As the illuminated area of the Moon is getting smaller each day, we refer to this half of the Moon’s monthly cycle as the “waning” portion. Eventually, the Moon becomes a waning crescent, heading back towards New Moon to begin the cycle anew. Between the times of First Quarter and Full Moon, and between Full Moon and Third Quarter, we sometimes refer to the Moon as being in a “gibbous” phase. Gibbous means “hump-backed”. When the phase is increasing towards Full Moon, we have a “waxing gibbous” Moon, and when it is decreasing, the “waning gibbous” phases.

The objective of this lab is to improve your understanding of the Moon phases [a topic that you WILL see on future exams!]. This concept, the phases of the Moon, involves

1. the position of the Moon in its orbit around the Earth,
2. the illuminated portion of the Moon that is visible from here in Las Cruces, and
3. the time of day that a given Moon phase is at the highest point in the sky as seen from Las Cruces.

You will **finish** this lab by demonstrating to your instructor that you do clearly understand the concept of Moon phases, including an understanding of:

- which direction the Moon travels around the Earth
- how the Moon phases progress from day-to-day
- at what time of the day the Moon is highest in the sky at each phase

## Materials

- small spheres (representing the Moon), with two different colored hemispheres. The **dark** hemisphere represents the portion of the Moon not illuminated by the Sun.
- flashlight (representing the Sun)
- yourself (representing the Earth, and your nose Las Cruces!)

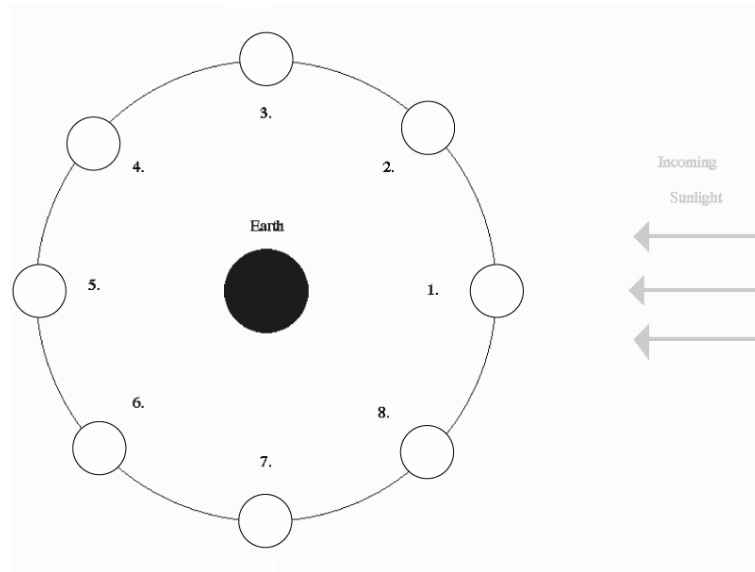
You will use the colored sphere and flashlight as props for this demonstration. Carefully read and thoroughly answer the questions associated with each of the five Exercises on the following pages. [Don’t be concerned about eclipses as you answer the questions in these Exercises]. Using the dual-colored sphere to represent the Moon, the flashlight to represent the Sun, and a member of the group to represent the Earth (with that person’s nose representing Las Cruces’ location), ‘walk through’ and ‘rotate through’ the positions indicated in the Exercise figures to fully understand the situation presented.

Note that there are additional questions at the end.

## Work in Groups of Three People!

### 4.2 Exercise 1 (10 points)

The figure below shows a “top view” of the Sun, Earth, and eight different positions (1-8) of the Moon during one orbit around the Earth. Note that the distances shown are **not** drawn to scale.



**Ranking Instructions:** Rank (from *greatest* to *least*) the amount of the Moon’s **entire surface** that is illuminated for the eight positions (1-8) shown.

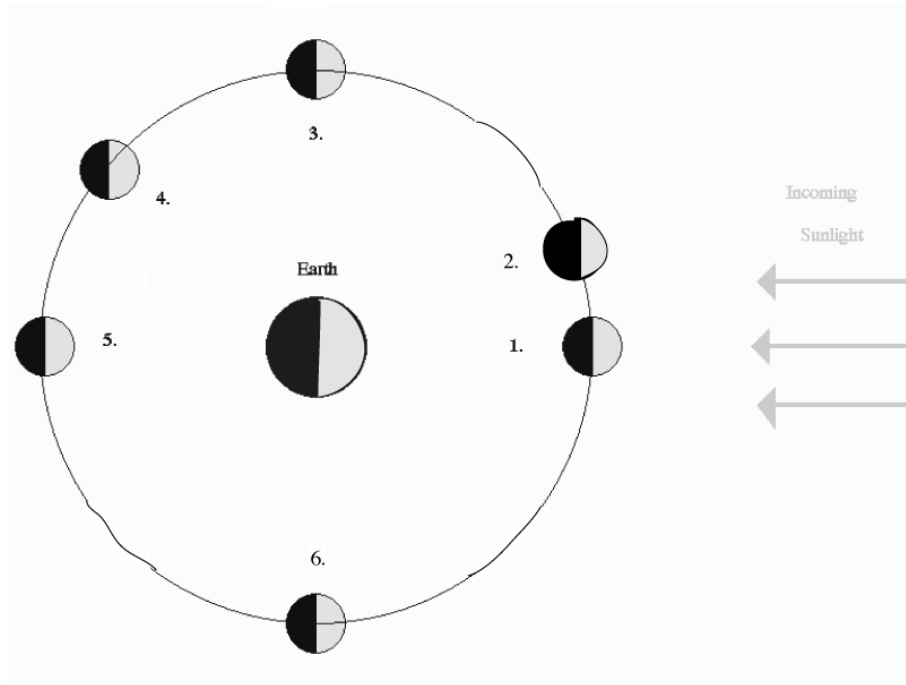
**Ranking Order:** Greatest A \_\_\_\_ B \_\_\_\_ C \_\_\_\_ D \_\_\_\_ E \_\_\_\_ F \_\_\_\_ G \_\_\_\_ H \_\_\_\_ Least

**Or,** the amount of the entire surface of the Moon illuminated by sunlight is the same at all the positions. \_\_\_\_\_ (indicate with a check mark).

**Carefully explain** the reasoning for your result:

### 4.3 Exercise 2 (10 points)

The figure below shows a “top view” of the Sun, Earth, and six different positions (1-6) of the Moon during one orbit of the Earth. Note that the distances shown are **not** drawn to scale.



**Ranking Instructions:** Rank (from *greatest* to *least*) the amount of the Moon’s illuminated surface that is **visible from Earth** for the six positions (1-6) shown.

**Ranking Order:** Greatest A \_\_\_\_\_ B \_\_\_\_\_ C \_\_\_\_\_ D \_\_\_\_\_ E \_\_\_\_\_ F \_\_\_\_\_ Least

**Or,** the amount of the Moon’s illuminated surface visible from Earth is the same at all the positions. \_\_\_\_\_ (indicate with a check mark).

**Carefully explain** the reasoning for your result:

#### 4.4 Exercise 3 (10 points)

Shown below are different phases of the Moon as seen by an observer in the Northern Hemisphere.



A

B

C

D

E

**Ranking Instructions:** Beginning with the *waxing gibbous* phase of the Moon, rank all five Moon phases shown above in the order that the observer would see them over the next four weeks (write both the picture letter and the phase name in the space provided!).

**Ranking Order:**

1) Waxing Gibbous

2) \_\_\_\_\_

3) \_\_\_\_\_

4) \_\_\_\_\_

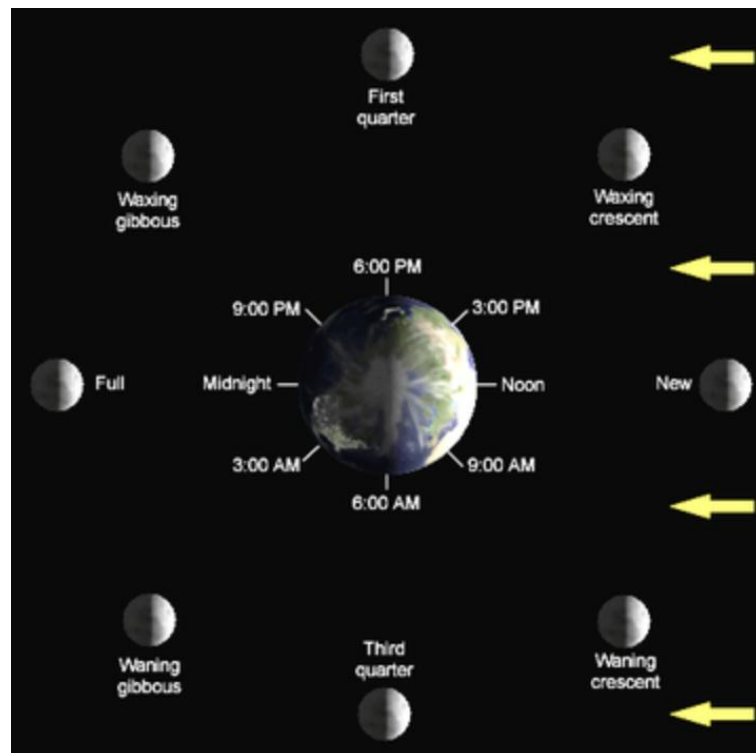
5) \_\_\_\_\_

**Or**, all of these phases would be visible at the same time: \_\_\_\_\_ (indicate with a check mark).

## 4.5 Lunar Phases, and When They Are Observable







The next three exercises involve determining when certain lunar phases can be observed. Or, alternatively, determining the approximate time of day or night using the position and phase of the Moon in the sky.

In Exercises 1 and 2, you learned about the changing geometry of the Earth-Moon-Sun system that is the cause of the phases of the Moon. When the Moon is in the same direction as the Sun, we call that phase New Moon. During New Moon, the Moon rises with the Sun, and sets with the Sun. So if the Sun rose at 7 am, the Moon also rose at 7 am—even though you cannot see it! The opposite occurs at Full Moon: at Full Moon the Moon is in the opposite direction from the Sun. Therefore, as the Sun sets, the Full Moon rises, and vice versa. The Sun reaches its highest point in the sky at noon each day. The Full Moon will reach the highest point in the sky at midnight. At First and Third quarters, the Moon-Earth-Sun angle is a right angle, that is it has an angle of  $90^\circ$  (positions 3 and 6, respectively, in the diagram for exercise #2). At these phases, the Moon will rise or set at either noon, or midnight (it will be up to you to figure out which is which!). To help you with exercises 4 through 6, we include the following figure detailing *when the observed phase is highest* in the sky.



#### 4.6 Exercise 4 (6 points)







In the set of figures below, the Moon is shown in the first quarter phase at different times of the day (or night). Assume that sunset occurs at 6 p.m. and that sunrise occurs at 6 a.m.

 <div style="text-align: center;"> <div style="display: flex; justify-content: space-between; width: 100%;"> <span>EAST</span> <span>SOUTH</span> <span>WEST</span> </div> <p><b>Time:</b> _____</p> </div>	 <div style="text-align: center;"> <div style="display: flex; justify-content: space-between; width: 100%;"> <span>EAST</span> <span>SOUTH</span> <span>WEST</span> </div> <p><b>Time:</b> _____</p> </div>
 <div style="text-align: center;"> <div style="display: flex; justify-content: space-between; width: 100%;"> <span>EAST</span> <span>SOUTH</span> <span>WEST</span> </div> <p><b>Time:</b> _____</p> </div>	 <div style="text-align: center;"> <div style="display: flex; justify-content: space-between; width: 100%;"> <span>EAST</span> <span>SOUTH</span> <span>WEST</span> </div> <p><b>Time:</b> _____</p> </div>
 <div style="text-align: center;"> <div style="display: flex; justify-content: space-between; width: 100%;"> <span>EAST</span> <span>SOUTH</span> <span>WEST</span> </div> <p><b>Time:</b> _____</p> </div>	 <div style="text-align: center;"> <div style="display: flex; justify-content: space-between; width: 100%;"> <span>EAST</span> <span>SOUTH</span> <span>WEST</span> </div> <p><b>Time:</b> _____</p> </div>

**Instructions:** Determine the time at which each view of the Moon would be seen, and write it on each panel of the figure.

#### 4.7 Exercise 5 (6 points)

In the set of figures below, the Moon is shown overhead, at its highest point in the sky, but in different phases. Assume that sunset occurs at 6 p.m. and that sunrise occurs at 6 a.m.







 <div>EAST      SOUTH      WEST</div> <b>Time:</b> _____	 <div>EAST      SOUTH      WEST</div> <b>Time:</b> _____
 <div>EAST      SOUTH      WEST</div> <b>Time:</b> _____	 <div>EAST      SOUTH      WEST</div> <b>Time:</b> _____
 <div>EAST      SOUTH      WEST</div> <b>Time:</b> _____	 <div>EAST      SOUTH      WEST</div> <b>Time:</b> _____

**Instructions:** Determine the time at which each view of the Moon would have been seen, and write it on each panel of the figure.



#### 4.8 Exercise 6 (6 points)

In the two sets of figures below, the Moon is shown in different parts of the sky and in different phases. Assume that sunset occurs at 6 p.m. and that sunrise occurs at 6 a.m.

 <div style="text-align: center;">             EAST                  SOUTH                  WEST           </div> <p style="text-align: center;"><b>Time:</b> _____</p>	 <div style="text-align: center;">             EAST                  SOUTH                  WEST           </div> <p style="text-align: center;"><b>Time:</b> _____</p>
 <div style="text-align: center;">             EAST                  SOUTH                  WEST           </div> <p style="text-align: center;"><b>Time:</b> _____</p>	 <div style="text-align: center;">             EAST                  SOUTH                  WEST           </div> <p style="text-align: center;"><b>Time:</b> _____</p>
 <div style="text-align: center;">             EAST                  SOUTH                  WEST           </div> <p style="text-align: center;"><b>Time:</b> _____</p>	 <div style="text-align: center;">             EAST                  SOUTH                  WEST           </div> <p style="text-align: center;"><b>Time:</b> _____</p>

**Instructions:** Determine the time at which each view of the Moon would have been seen, and write it on each panel of the figure.

## 4.9 Demonstrating Your Understanding of Lunar Phases

After you have completed the six Exercises and are comfortable with Moon phases, and how they relate to the Moon's orbital position and the time of day that a particular Moon phase is highest in the sky, you will be verbally quizzed by your instructor (*without the Exercises available*) on these topics. You will use the dual-colored sphere, and the flashlight, and a person representing the Earth to illustrate a specified Moon phase (appearance of the Moon in the sky). You will do this for three different phases. **(17 points)**

Name: \_\_\_\_\_  
Date: \_\_\_\_\_

#### 4.10 Take-Home Exercise (35 points total)

On a separate sheet of paper, answer the following questions:

1. If the Earth was one-half as massive as it actually is, how would the time interval (number of days) from one Full Moon to the next in this ‘small Earth mass’ situation compare to the actual time interval of 29.5 days between successive Full Moons? Assume that all other aspects of the Earth and Moon system, including the Moon’s orbital semi-major axis, the Earth’s rotation rate, etc. do not change from their current values. **(15 points)**
2. What (approximate) phase will the Moon be in one week from today’s lab? **(5 points)**
3. If you were on Earth looking up at a Full Moon at midnight, and you saw an astronaut at the center of the Moon’s disk, what phase would the astronaut be seeing the Earth in? **Draw a diagram to support your answer. (15 points)**

#### 4.11 Possible Quiz Questions

- 1) What causes the phases of the Moon?
- 2) What does the term “New Moon” mean?
- 3) What is the origin of the word “Month”?
- 4) How long does it take the Moon to go around the Earth once?
- 5) What is the time interval between successive New Moons?

#### 4.12 Extra Credit (make sure you get permission from your TA before attempting, 5 points)

Write a one page essay on the term “Blue Moon”. Describe what it is, and how it got its name.



Name: \_\_\_\_\_  
Date: \_\_\_\_\_

## 5 Estimating the Earth's Density

### 5.1 Introduction

We know, based upon a variety of measurement methods, that the density of the Earth is 5.52 grams per cubic centimeter. [This value is equal to 5520 kilograms per cubic meter. Your initial density estimate in Table 5.3 should be a value similar to this.] This density value clearly indicates that Earth is composed of a combination of rocky materials and metallic materials.

With this lab exercise, we will obtain some measurements, and use them to calculate our own estimate of the Earth's density. Our observations will be relatively easy to obtain, but they will involve contacting someone in the Boulder, Colorado area (where the University of Colorado is located) to assist with our observations. We will then do some calculations to convert our measurements into a density estimate.

As we have discussed in class, and in previous labs this semester, we can calculate the density of an object (say, for instance, a planet, or more specifically, the Earth) by knowing that object's mass and volume. It is a challenge, using equipment readily available to us, to determine the Earth's mass and its volume directly. [There is no mass balance large enough upon which we can place the Earth, and if we could what would we have available to "balance" the Earth?] But we have through the course of this semester discussed physical processes which relate to mass. One such process is the gravitational attraction (force) one object exerts upon another.

The magnitude of the gravitational force between two objects depends upon both the masses of the two objects in question, as well as the distance separating the centers of the two objects. Thus, we can use some measure of the Earth's gravitational attraction for an object upon its surface to ultimately determine the Earth's mass. However, there is another piece of information that we require, and that is the distance from the Earth's surface to its center: the Earth's radius.

We will need to determine both the MASS of the Earth and the RADIUS of the Earth. Since we will use the magnitude of Earth's gravitational attraction to determine Earth's mass, and since this magnitude depends upon the Earth's radius, we'll first determine Earth's circumference (which will lead us to the Earth's radius and then to the Earth's volume) and then determine the Earth's mass.

## 5.2 Determining Earth's Radius

Earlier this semester you read (or should have read!) in your textbook the description of Eratosthenes' method, implemented two-thousand plus years ago, to determine Earth's circumference. Since the Earth's circumference is related to its radius as:

$$\text{Circumference} = 2 \times \pi \times \text{RADIUS (with } \pi = \text{"pi"} = 3.141592)$$

and the Earth's volume is a function of its radius:

$$\text{VOLUME} = (4/3) \times \pi \times \text{RADIUS}^3$$

We will implement Eratosthenes' circumference measurement method and end up with an estimate of the Earth's radius.

Now, what measurements did Eratosthenes use to estimate Earth's circumference? Eratosthenes, knowing that Earth is spherical in shape, realized that the length of an object's shadow would depend upon how far in latitude (north-or-south) the object was from being directly beneath the Sun. He measured the length of a shadow cast by a vertical post in Egypt at local noon on the day of the northern hemisphere summer solstice (June 20 or so). He made a measurement at the point directly beneath the Sun (23.5 degrees North, at the Egyptian city Syene), and at a second location further north (Alexandria, Egypt). The two shadow lengths were not identical, and it is that difference in shadow length plus the knowledge of how far apart the two posts were from each other (a few hundred kilometers), that permitted Eratosthenes to calculate his estimate of Earth's circumference.

As we conduct this lab exercise we are not in Egypt, nor is today the seasonal date of the northern hemisphere summer solstice (which occurs in June), nor is it locally Noon (since our lab times do not overlap with Noon). But, nonetheless, we will forge ahead and estimate the Earth's circumference, and from this we will estimate the Earth's radius.

### TASKS:

- Take a post outside, into the sunlight, and measure the length of the post with the tape measure.
  - Place one end of the post on the ground, and hold the post as vertical as possible.
  - Using the tape measure provided, measure to the nearest 1/2 centimeter the length of the shadow cast by the post; this shadow length should be measured three times, by three separate individuals; record these shadow lengths in Table 5.1.
  - You will be provided with the length of a post and its shadow measured simultaneously today in Boulder, Colorado.
1. Proceed through the calculations described after Table 5.1, and write your answers in the appropriate locations in Table 5.1. **(10 points)**

Table 5.1: **Angle Data**

Location	Post Height (cm)	Shadow Length (cm)	Angle (Degrees)
Las Cruces Shadow #1			
Las Cruces Shadow #2			
Las Cruces Shadow #3			
Average Las Cruces Angle:			
Boulder, Colorado			

### 5.3 Angle Determination:

With a bit of trigonometry we can transform the height and shadow length you measured into an angle. As shown in Figure 5.1 there is a relationship between the length (of your shadow in this situation) and the height (of the shadow-casting pole in this situation), where:

$$\text{TANGENT of the ANGLE} = \text{far-side length} / \text{near-side length}$$

Since you know the length of the post (the near-side length, which you have measured) and the length of the shadow (the far-side length, which you have also measured, three separate times), you can determine the shadow angle from your measurements, using the ATAN, or  $\text{TAN}^{-1}$  capability on your calculator (these functions will give you an angle if you provide the ratio of the height to length):

$$\text{ANGLE} = \text{ATAN}(\text{shadow length} / \text{post length})$$

or

$$\text{ANGLE} = \text{TAN}^{-1}(\text{shadow length} / \text{post length})$$

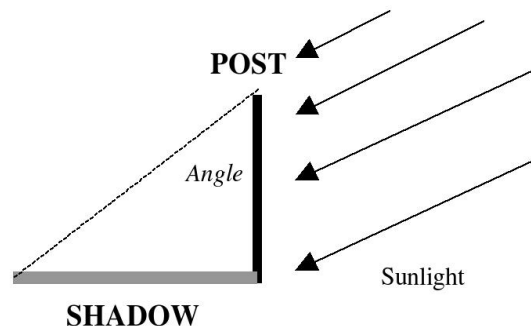


Figure 5.1: The geometry of a vertical post sitting in sunlight.

2. Calculate the shadow angle for each of your three shadow-length measurements, and also for the Boulder, Colorado shadow-length measurement. Write these angle values in the appropriate locations in Table 5.1. Then calculate the average of the three Las Cruces shadow angles, and write the value on the “Average Las Cruces Angle” line.

The angles you have determined are: 1) an estimate of the angle (latitude) difference between Las Cruces and the latitude at which the Sun appears to be directly overhead (which is currently  $\sim 12$  degrees south of the equator since we are experiencing early northern autumn), *and* 2) the angle (latitude) difference between Boulder, Colorado and the latitude at which the Sun appears to be directly overhead. The difference (Boulder angle minus Las Cruces angle) between these two angles is the angular (latitude) separation between Las Cruces and Boulder, Colorado.

We will now use this information and our knowledge of the actual distance (in kilometers) between Las Cruces’ latitude and Boulder’s latitude. This distance is:

### **857 kilometers north-south distance between Las Cruces and Boulder, Colorado**

In the same way that Eratosthenes used his measurements (just like those you have made today), we can now determine an estimate of the Earth’s circumference.

3. Using your calculated Boulder Shadow Angle and your Average Las Cruces Shadow Angle values, calculate the corresponding EARTH CIRCUMFERENCE value, and write it below:

$$\begin{aligned} \text{Average Earth Circumference (kilometers)} &= \\ 857 \text{ kilometers} \times (360^\circ) / (\text{Boulder angle} - \text{Avg LC Angle}) &= \\ 857 \times [360^\circ / (\underline{\hspace{2cm}} - \underline{\hspace{2cm}})] &= \underline{\hspace{2cm}} \text{ km (2 points)} \end{aligned}$$

The CIRCUMFERENCE value you have just calculated is related to the RADIUS via the equation:

$$\text{EARTH CIRCUMFERENCE} = 2 \times \pi \times \text{EARTH RADIUS}$$

which can be converted to RADIUS using:

$$\text{EARTH RADIUS} = R_E = \text{EARTH CIRCUMFERENCE} / (2 \times \pi)$$



4. For your calculated CIRCUMFERENCE, calculate that value of the Radius (in units of kilometers) in the appropriate location below:

**AVERAGE EARTH RADIUS VALUE =  $R_E$  = \_\_\_\_\_**  
**kilometers (3 points)**

5. **Convert this radius ( $R_E$ ) from kilometers to meters, and enter that value in Table 5.3.** (*Note we will use the radius in meters the rest of this lab.*)

You have now obtained one important piece of information (the radius of the Earth) needed for determining the density of Earth. We will, in a bit, use this radius value to calculate the Earth's volume. Next, we will determine Earth's mass, since we need to know both the Earth's volume and its mass in order to be able to calculate the Earth's density.

## 5.4 Determining the Earth's Mass

The gravitational acceleration (increase of speed with increase of time) that a dropped object experiences here at the Earth's surface has a magnitude defined by the Equation (thanks to Sir Isaac Newton for working out this relationship!) shown below:

$$\text{Acceleration (meters per second per second)} = G \times M_E / R_E^2$$

Where  $M_E$  is the mass of the Earth in *kilograms*,  $R_E$  is the radius of the Earth in units of *meters*, and the Gravitational Constant,  $G = 6.67 \times 10^{-11}$  meters<sup>3</sup>/(kg-seconds<sup>2</sup>). You have obtained several estimates, and calculated an average value of  $R_E$ , above. However, you currently have no estimate for  $M_E$ . You can estimate the Earth's mass from the measured acceleration of an object dropped here at the surface of Earth; you will now conduct such an exercise.

A falling object, as shown in Figure 5.2, increases its downward speed at the constant rate "**X**" (in units of meters per second per second). Thus, as you hold an object in your hand, its downward speed is zero meters per second. One second after you release the object, its downward speed has increased to **X** meters per second. After two seconds of falling, the dropped object has a speed of **2X** meter per second, after 3 seconds its downward speed is **3X** meters per second, and so on. So, if we could measure the speed of a falling object at some point in time after it is dropped, we could determine the object's acceleration rate, and from this determine the Earth's mass (since we know the Earth's radius). However, it is difficult to measure the instantaneous speed of a

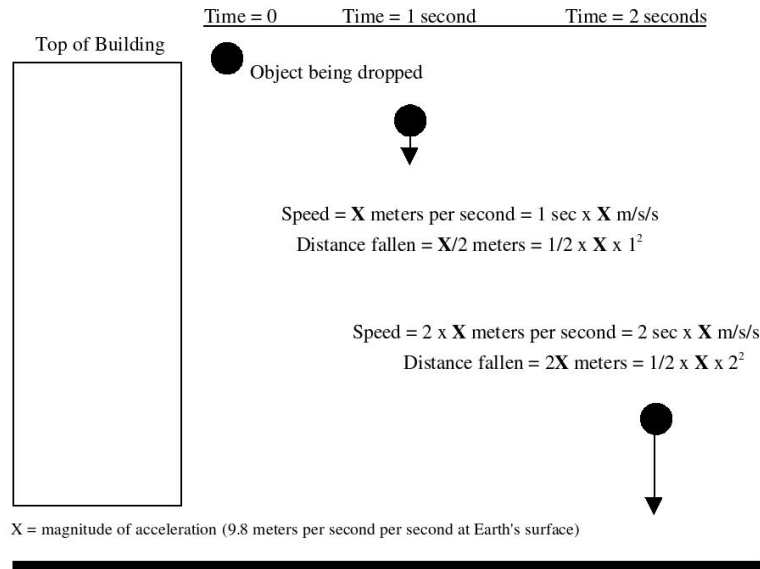


Figure 5.2: The distance a dropped object will fall during a time interval  $t$  is proportional to  $t^2$ . A dropped object speeds up as it falls, so it travels faster and faster and falls a greater distance as  $t$  increases.

dropped object.

We can, however, make a different measurement from which we can derive the dropped object's acceleration, which will then permit us to calculate the Earth's mass. As was pointed out above, before being dropped the object's downward speed is zero meters per second. One second after being dropped, the object's downward speed is  $X$  meters per second. During this one-second interval, what was the object's AVERAGE downward speed? Well, if it was zero to begin with, and  $X$  meters per second after falling for one second, **its average fall speed during the one-second interval is:**

**Average Fall speed during first second =  $(\text{Zero} + X) / 2 = X/2$  meters per second**, which is just the average of the initial (zero) and final ( $X$ ) speeds.

At an average speed of  $X/2$  meters per second during the first second, the distance traveled during that one second will be:

$$(X/2) \text{ (meters per second)} \times 1 \text{ second} = (X/2) \text{ meters,}$$

since:

$$\text{DISTANCE} = \text{AVERAGE SPEED} \times \text{TIME} = 1/2 \times \text{ACCELERATION} \times \text{TIME}^2$$

So, if we measure the length of time required for a dropped object to fall a certain distance, we can calculate the object's acceleration.

### Tasks:

- Using a stopwatch, measure the amount of time required for a dropped object (from the top of the Astronomy Building) to fall 9.0 meters (28.66 feet). Different members of your group should take turns making the fall-time measurements; write these fall time values for two “drops” in the appropriate location in Table 5.2. **(10 points for a completed table)**

- **Use the equation: Acceleration = [2.0 x Fall Distance] / [(Time to fall)<sup>2</sup>]**

and your measured Time to Fall values and the measured distance (9.0 meters) of Fall to determine the gravitational acceleration due to the Earth; write these acceleration values (in units of meters per second per second) in the proper locations in Table 5.2.

- Now, knowing the magnitude of the average acceleration that Earth's gravity imposes upon a dropped object, we will now use the “Gravity” equation to get  $M_E$ :

Gravitational acceleration =  $G \times M_E / R_E^2$  (where  $R_E$  must be in meters!)

Table 5.2: **Time of Fall Data**

	Time to Fall	Fall Distance	Acceleration
Object Drop #1		9 meters	
Object Drop #2		9 meters	
Average =			

- By rearranging the Gravity equation to solve for  $M_E$ , we can now make an estimate of the Earth's mass:

$M_E = \text{Average Acceleration} \times (R_E)^2 / G = \underline{\hspace{4cm}}$  **(5 points)**

Write the value of  $M_E$  (in kilograms) in Table 5.3 below.

## 5.5 Determining the Earth's Density

Now that we have estimates for the mass ( $M_E$ ) and radius ( $R_E$ ) of the Earth, we can easily calculate the density: Density = Mass/Volume. You will do this below.

**Tasks:**

- Calculate the volume ( $V_E$ ) of the Earth given your determination of its radius *in meters!*

$$V_E = (4/3) \times \pi \times R_E^3$$

and write this value in the appropriate location in Table 5.3 below.

- *Divide your value of  $M_E$  (that you entered in Table 5.3) by your estimate of  $V_E$  that you just calculated (also written in Table 5.3):* the result will be your estimate of the Average Earth Density in units of kilograms per cubic meter. Write this value in the appropriate location in Table 5.3.
- *Divide your AVERAGE ESTIMATE OF EARTH'S DENSITY value that you just calculated by the number 1000.0;* the result will be your estimated Earth density value in units of grams per cubic centimeter (the unit in which most densities are tabulated). Write this value in the appropriate location in Table 5.3.

Table 5.3: **Data for the Earth**

Estimate of Earth's Radius:	_____ <b>m</b> (4 points)
Estimate of Earth's Mass:	_____ <b>kg</b> (4 points)
Estimate of Earth's Volume:	_____ <b>m<sup>3</sup></b> (4 points)
Estimate of Earth's Density:	_____ <b>kg/m<sup>3</sup></b> (4 points)
Converted Density of the Earth:	_____ <b>gm/cm<sup>3</sup></b> (4 points)

## 5.6 In-Lab Questions:

1. Is your calculated value of the (Converted) Earth's density GREATER THAN, or LESS THAN, or EQUAL TO the actual value (see the Introduction) of the Earth's density? If your calculated density value is not identical to the known Earth density value, calculate the "percent error" of your calculated density value compared to the actual density value (**2 points**):

PERCENT ERROR =

$$\frac{100\% \times (\text{CALCULATED DENSITY} - \text{ACTUAL DENSITY})}{\text{ACTUAL DENSITY}} = \underline{\hspace{2cm}}$$

2. You used the AVERAGE Las Cruces shadow angle in calculating your estimate of the Earth's density (which you wrote down in Table 5.3). If you had used the LARGEST of the three measured Las Cruces shadow angles shown in Table 5.1, would the Earth density value that you would calculate with the LARGEST Las Cruces shadow angle be larger than or smaller than the Earth density value you wrote in Table 5.3? Think before writing your answer! Explain your answer. **(5 points)**

3. If the Las Cruces to Boulder, Colorado distance was actually 200 km in length, but your measured fall times did not change from what you measured, would you have calculated a larger or smaller Earth density value? Explain the reasoning for your answer. **(3 points)**

4. If we had conducted this experiment on the Moon rather than here on the Earth, would your measured values (fall time, angles and angle difference between two locations separated north-south by 857 kilometers) be the same as here on Earth, or different? Clearly explain your reasoning. [It might help if you draw a circle representing Earth and then draw a circle with  $1/4^{\text{th}}$  of the radius of the Earth's circle to represent the Moon.] **(5 points)**

Name: \_\_\_\_\_

Date: \_\_\_\_\_

## 5.7 Take Home Exercise (35 points total)

1. Type a 1.5-2 page Lab Report in which you will address the following topics:
  - a) The estimated density value you arrived at was likely different from the actual Earth density value of 5.52 grams per cubic centimeter; describe 2 or 3 potential errors in your measurements that could possibly play a role in generating your incorrect estimated density value.
  - b) Describe 2-3 ways in which you could improve the measurement techniques used in lab; keep in mind that NMSU is a state-supported school and thus we do not have infinite resources to purchase expensive sophisticated equipment, so your suggestions should not be too expensive.
  - c) Describe what you have learned from this lab, what aspects of the lab surprised you, what aspects of the lab worked just as you thought they would, etc.

## 5.8 Possible Quiz Questions

1. What is meant by the “radius” of a circle? (Drawing ok)
2. What does the term “circumference of a circle” mean?
3. How do you calculate the circumference of a circle if given the radius?
4. What is “pi” (or  $\pi$ )? What is the value of pi?
5. What is the volume of a sphere?
6. What does the term “density” mean?

## 5.9 Extra Credit (ask your TA for permission before attempting, 5 points)

Astronomers use density to segregate the planets into categories, such as “Terrestrial” and “Jovian”. Using your book, or another reference, look up the density of the Sun and Jupiter (or, if you have completed the previous lab, use the data table you constructed for Take-Home portion of that lab). Compare the densities of the Sun and Jupiter. Do you think they are composed of same elements? Why/why not? What are the two main elements in the periodic table that dominate the composition of the Sun? If the material that formed the Sun (and the Sun *has* 99.8% of the mass of the solar system) was the original “stuff” from which all of the planets were formed, how did planets like Earth end up with such high densities? What do you think might have happened in the distant past to the lighter elements? (Hint: think of a helium balloon, or a glass of water thrown out onto a Las Cruces

parking lot in the summer!).



Name: \_\_\_\_\_  
Date: \_\_\_\_\_

## 6 Reflectance Spectroscopy

### 6.1 Introduction

With this lab, we will look at the wavelength dependence of the visible reflectance of various objects, and learn what this can tell us about the composition of those objects. This is one technique by which we determine the composition of various solar system objects (*e.g.* Martian rocks, asteroids, clouds on Jupiter). We will specifically apply this method of investigation, using a hand-held reflectance spectrometer, to the reflectance characteristics of several different colored sheets of construction paper. We will then use these known spectra for different colors to identify some “mystery” objects for which we know only their reflectance as a function of wavelength.

We will use an ALTA reflectance spectrometer for this lab. This is an instrument that can quantitatively measure the reflectance in nine wavelength channels covering visible and near infrared wavelengths. The ALTA reflectance spectrometer provides measurements in units of millivolts. As the intensity of the measured (reflected) light changes, the displayed number (voltage) will change in the same proportion. That is, if the intensity of measured reflected light decreases by a factor of two, the displayed value will also decrease by a factor of two. What we will ultimately be interested in for each wavelength and for each object is the percentage of incident light that is reflected. That is, if all the light of a particular wavelength is reflected, that object has a 100% reflectance at that wavelength. If none of the incident light is reflected (it is all absorbed), the object has a zero-percent reflectance at that wavelength.

When we apply reflectance spectroscopy to solar system objects, the Sun is the source of the light that is reflected. Thus, if we know the spectral characteristics (intensity as a function of wavelength) of the Sun, we can measure the intensity of reflectance at our chosen wavelengths accurately. With the ALTA reflectance spectrometer, we do not use sunlight as our ‘source’. Rather, the spectrometer itself has nine bulbs (arranged in a circular pattern) that emit light of specified wavelengths (indicated on the buttons on the front of the instrument) and one detector which measures reflected radiation. The emitted light reflects off the object of interest and is measured by the detector located at the center of the circular pattern of bulbs. By proceeding through the nine wavelengths, we obtain the intensity of reflected light at each wavelength, and from this we can determine the reflectance spectrum of our objects of interest.

### 6.2 Exercises

Start by pressing one of the wavelength buttons on the front of the spectrometer and while depressing this button, turn the spectrometer over. You should see one of the bulbs ar-

ranged in a circular pattern illuminated (unless you are pressing one of the two near-infrared wavelength buttons). Release the button you are holding and press a different button; you should now see a different bulb illuminated. Remember, the ‘bulb’ at the center is actually the detector, which measures the reflected light.

1. Our first order of business is to determine what the instrument signal is when no light is available. This is called the *dark voltage* value and must be subtracted from all subsequent measurements with the spectrometer. Turn the spectrometer on and set it down on the table; the value currently in the display area is the dark voltage. Write this number down, as it will be subtracted from all subsequent measured values. Also write the unit number or letter of the spectrometer. **(2 points)**

**DARK VOLTAGE READING = \_\_\_\_\_**  
**SPECTROMETER # or Letter = \_\_\_\_\_**  
 (located in the upper right corner on the front of the spectrometer)

2. Now, since our spectrometer is not calibrated (we do not know what millivolt values to expect for 100 percent reflection, and there is no reason why this value must be the same for each wavelength), we will use a piece of white poster board to determine the ‘standard’ against which our reflectance spectra of several colored papers will be compared. In order to do this, we will measure the value (in millivolts) of reflected light from the white poster board for each of the nine wavelength channels of the spectrometer. Do this by:

- Placing the spectrometer onto the white poster board
- Sequentially pressing the nine wavelength buttons on the spectrometer
- While pressing each button, note the millivolt value that appears in the display and write this value down in Measured Value column of Table 6.1 for the appropriate wavelength

Remember, we are measuring the intensity of the light that has been: a) emitted by the spectrometer bulb, then b) reflected off the poster board, and then finally, c) measured by the spectrometer.

Since it is a white surface that we are measuring the reflectance from, we will expect that the reflectance (percent of light reflected) will not vary too much among the nine wavelengths (since ‘white’ is the combination of all wavelengths). We will assume that each wavelength is 100 percent reflected from the white surface. After determining the measured ‘calibration’ values for each wavelength, subtract the ‘Dark Voltage’ value from these calibration values to obtain the ‘standard’ value for each wavelength, and write these values in the right-hand column of Table 6.1. **(9 points)**

Wavelength (nanometers)	Measured Value (millivolts)	Standard (Measured - Dark Voltage)
470		
555		
585		
605		
635		
660		
695		
880		
940		

Table 6.1: White poster board calibration determination. (Recall that 1 nanometer =  $10^{-9}$  m = 1 billionth of a meter.)

3. Rather than comparing the reflectance spectra of rocks on Mars, as the Mars Pathfinder camera did, or clouds on Jupiter (as the Voyager and Galileo spacecraft have done), you will obtain and compare the reflectance spectra of several different colors of construction paper. When you have measured the spectra of the three pieces of colored paper, you will plot their spectra.

For each piece of colored paper,

- Measure the reflectance of that piece of paper at each wavelength in the same manner as you determined the spectrometer's 'Measured Value' above, writing the corresponding millivolt value for each wavelength in the Meas. column in Table 6.2.
- For each wavelength for each piece of paper, calculate the Measured minus Dark Voltage value. To do this, subtract your instrument's Dark Voltage value from the Meas. column value at each wavelength for each colored piece of paper.
- Determine the Reflectance value of each colored sheet of paper at each wavelength using the formula below, in which 'STANDARD Value' is the value in the right-most column of Table 6.1 at the appropriate wavelength. The REFLECTANCE values you arrive at should have values between 0 and 1. Write your calculated reflectance values in the "Reflect." columns of Table 6.2 for the appropriate colored piece of paper. **(20 points)**

$$\text{Reflectance} = \frac{\text{Measured Value} - \text{Dark Value}}{\text{STANDARD Value}}$$

4. On the sheets of graph paper at the end of this lab, plot the Reflectance values [column 3 Reflect. values in Table 6.2] you have calculated for each of the 3 colored pieces of paper. For each piece of colored paper and the calculated Reflectance values, draw a dot at the appropriate Reflectance value (y-axis) and appropriate wavelength point (x-axis). After you have drawn all 9 dots for a single sheet of colored paper, connect the

$\lambda$	Red Paper			Green Paper			Blue Paper		
(nm)	Meas.	Meas.-Dark	Reflect.	Meas.	Meas.-Dark	Reflect.	Meas.	Meas.-Dark	Reflect.
470									
555									
585									
605									
635									
660									
695									
880									
940									

Table 6.2: ALTA Reflectance Spectrometer Values (millivolts)

dots. This curve you have drawn is a **Reflectance Spectrum**. Repeat this procedure for your Reflectance results for the other two sheets of colored paper. Clearly label your three resulting curves. **(15 points)**

- Compare your three curves (reflectance spectra of the colored sheets of paper) with the spectra of the two mystery objects (A and B). The two mystery curves are the spectra for two separate objects. These objects are included among those listed below. Using your knowledge of the color of the objects in the list below, a) determine which object each of the mystery spectra corresponds to, and b) describe below how you have made this determination. You may find it useful to refer to Figure 6.6 on page 157 of your text to relate wavelength to color. **(7 points each)**

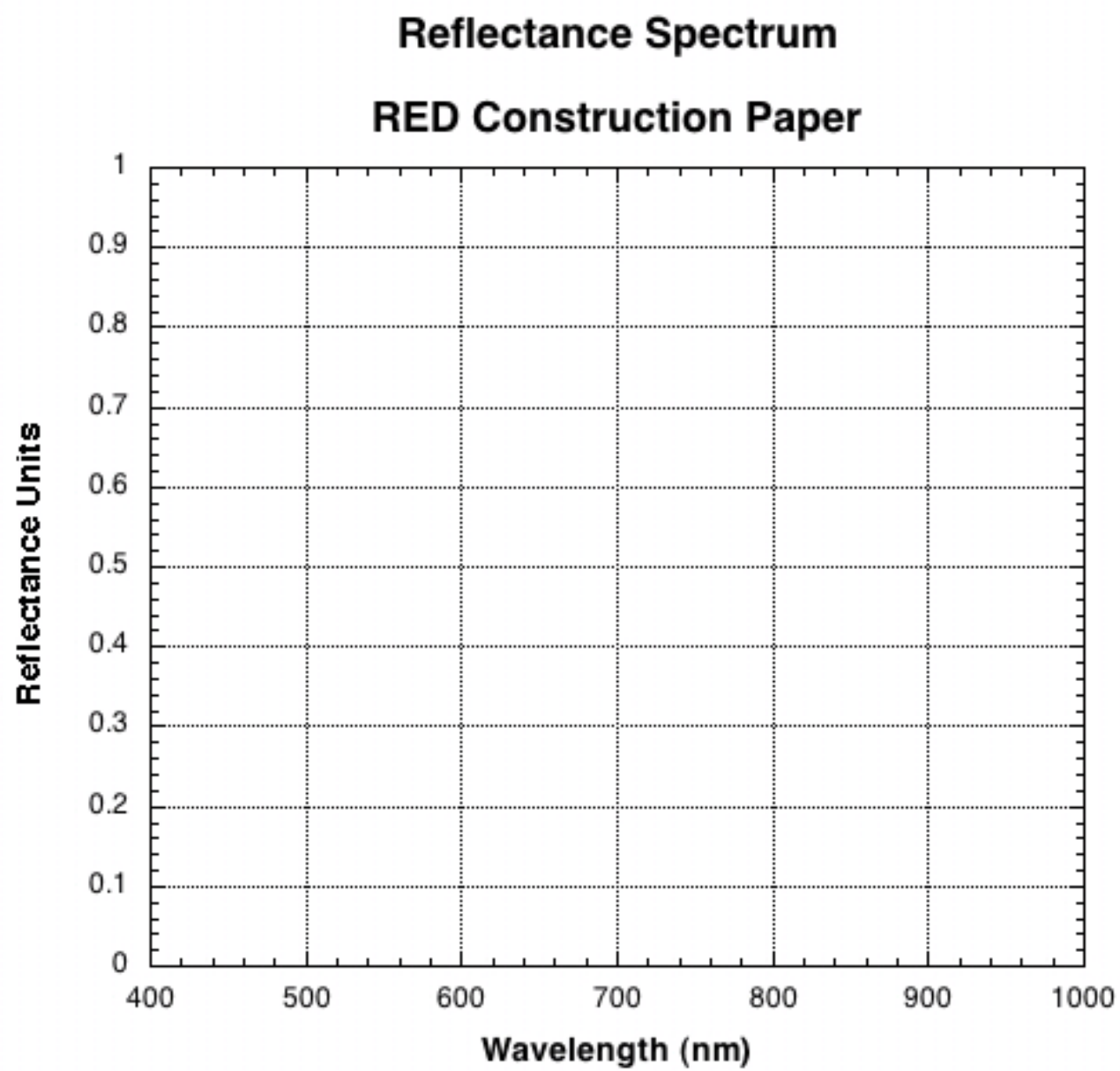
Tomato	blade of grass	White Paper
Black Paper	Eggplant	Navel Orange
Pink Flamingo	Neptune (page 215 of text)	Lemon

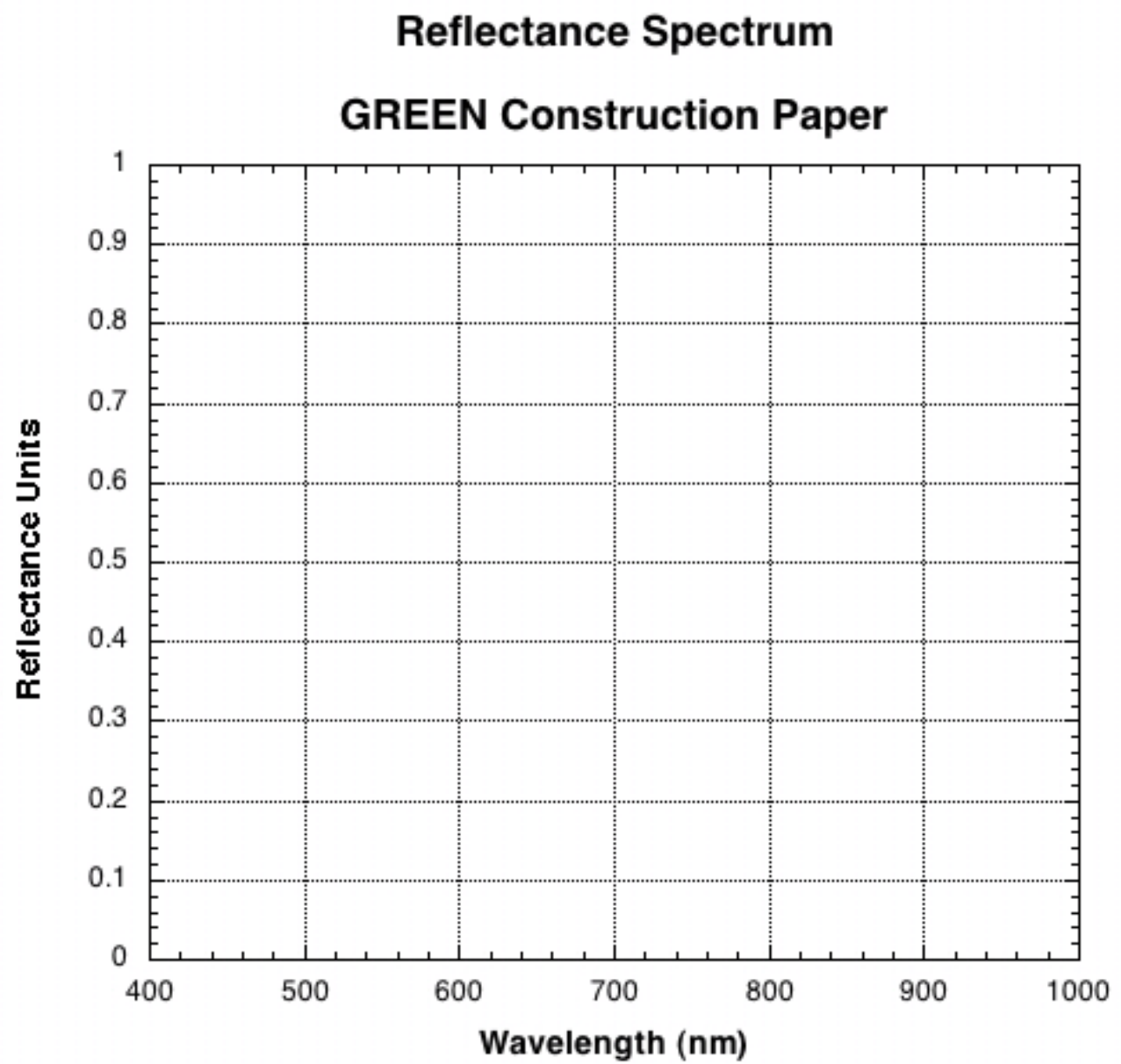
Object # \_\_\_\_\_ :

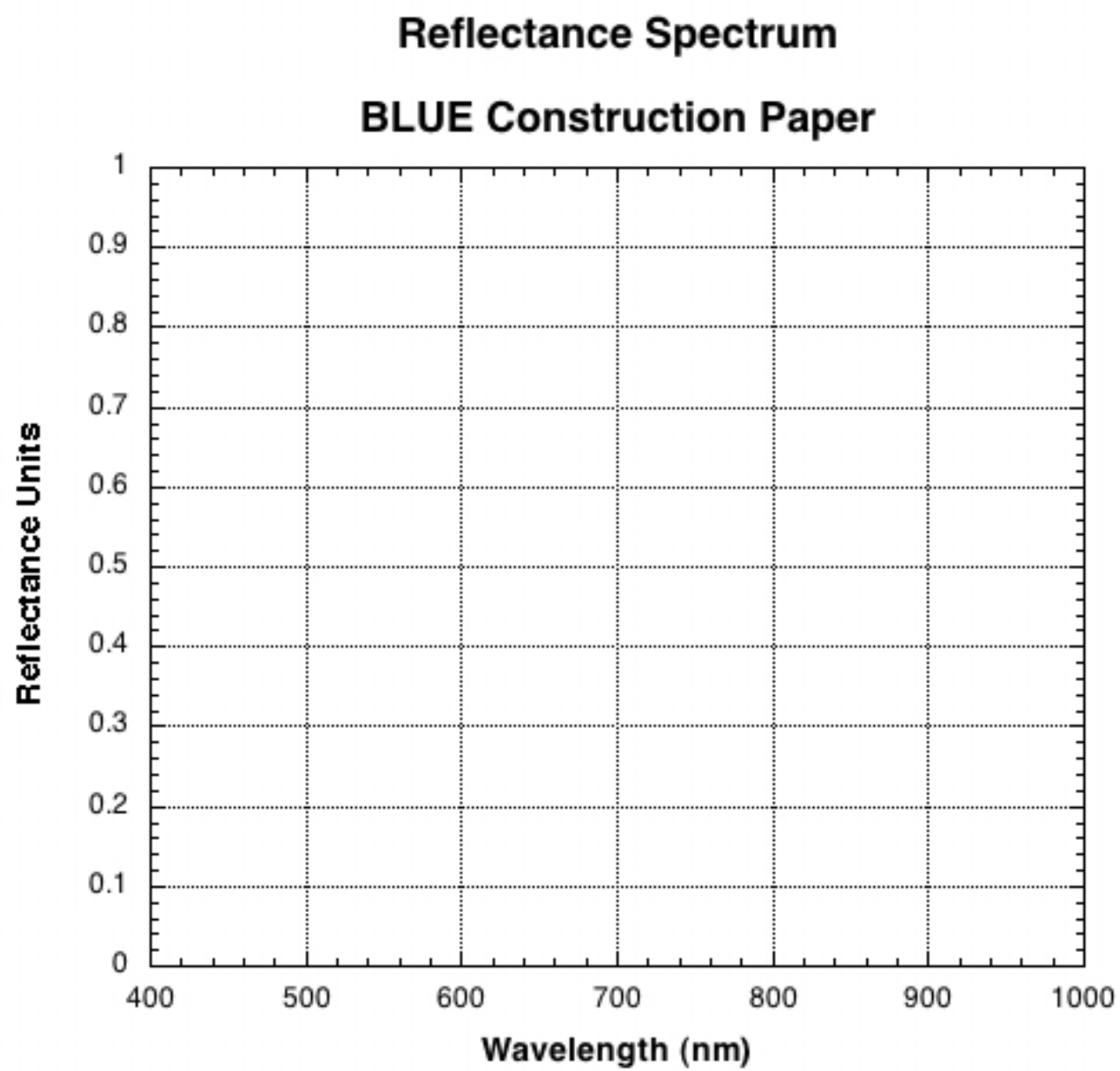
Object # \_\_\_\_\_ :

**Mystery Planet:**

The last graph in this lab shows a reflectance spectrum for a newly discovered planet that was just visited by a NASA spacecraft. Does this planet have vegetation on its surface? Justify your answer. **(5 points)**

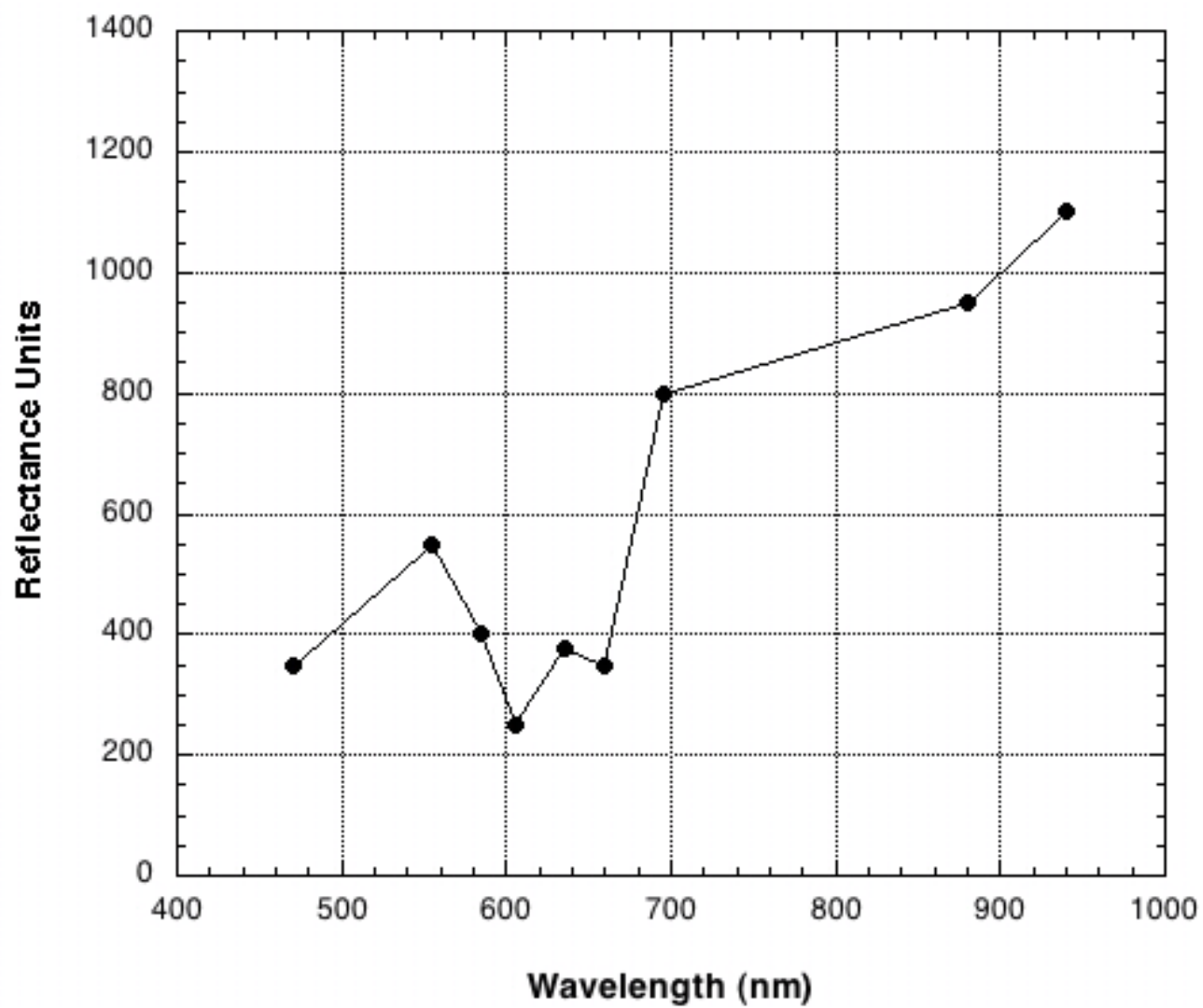








**Mystery Planet Reflectance Spectrum**





Name:\_\_\_\_\_

Date:\_\_\_\_\_

### 6.3 Take Home Exercise (35 points total)

On a separate sheet of paper, answer the following questions:

1. Why does the planet Jupiter appear brighter in the night sky than Mars, even though Mars is much closer to Earth than Jupiter? [Hint: the third column in Table 8.1 on page 200 of your textbook might be helpful.] **(10 points)**
2. Imagine that the colored lightbulbs in the Alta reflectance spectrometers emitted twice as much light as they actually do. In this brighter bulb situation, would you determine “Reflect.” values that are the same as those you have written in Table 6.2, or would you determine different (larger, smaller) Reflect. values with these brighter bulbs? Why? **(10 points)**
3. Clearly describe a concept you have learned in this lab, or last week in class, during our discussions about radiation. Describe something that you have not already addressed by answering other questions in this lab. **(15 points)**

### 6.4 Possible Quiz Questions

1. What is meant by the term “wavelength of light”?
2. What are the physical units of wavelength?
3. What is the definition of the word “spectroscopy”?
4. If a blade of grass is “green”, why does it look green?

### 6.5 Extra Credit (ask your TA for permission before attempting, 5 points)

Look up the spectrum of chlorophyll. Note that a spectrum can either be a “reflection” spectrum or an “absorption” spectrum. One is simply the inverse of the other. So, depending on the author’s preference, they will plot one or the other type of spectrum for chlorophyll. Chlorophyll is why most plants look green. Describe how chlorophyll interacts with light. What does chlorophyll do for plants? Why do you think it works this way? Rocks, ices, and gases all have complicated spectra, absorbing some wavelengths of light, and reflecting (or transmitting) others. The uniqueness of the spectra of these items allows astronomers to determine the composition of an object by using spectroscopy.



Name: \_\_\_\_\_  
Date: \_\_\_\_\_

## 7 Building a Comet

During this semester we have explored the surfaces of the Moon, terrestrial planets and other bodies in the solar system, and found that they often are riddled with craters. In Lab 12 there is a discussion on how these impact craters form. Note that every large body in the solar system has been bombarded by smaller bodies throughout all of history. In fact, this is one mechanism by which planets grow in size: they collect smaller bodies that come close enough to be captured by the planet's gravity. If a planet or moon has a rocky surface, the surface can still show the scars of these impact events—even if they occurred many billions of years ago! On planets with atmospheres, like our Earth, weather can erode these impact craters away, making them difficult to identify. On planets that are essentially large balls of gas (the “Jovian” planets), there is no solid surface to record impacts. Many of the smaller bodies in the solar system, such as the Moon, the planet Mercury, or the satellites of the Jovian planets, do not have atmospheres, and hence, faithfully record the impact history of the solar system. Astronomers have found that when the solar system was very young, there were large numbers of small bodies floating around the solar system impacting the young planets and their satellites. Over time, the number of small bodies in the solar system has decreased. Today we will investigate how impact craters form, and examine how they appear under different lighting conditions. During this lab we will discuss both asteroids and comets, and you will create your own impact craters as well as construct a “comet”.

- *Goals:* to discuss asteroids and comets; create impact craters; build a comet and test its strength and reaction to light
- *Materials:* A variety of items supplied by your TA

### 7.1 Asteroids and Comets

There are two main types of objects in the solar system that represent left over material from its formation: asteroids and comets. In fact, both objects are quite similar, their differences arise from the fact that comets are formed from material located in the most distant parts of our solar system, where it is very cold, and thus they have large quantities of frozen water and other frozen liquids and gases. Asteroids formed closer-in than comets, and are denser, being made-up of the same types of rocks and minerals as the terrestrial planets (Mercury, Venus, Earth, and Mars). Asteroids are generally just large rocks, as shown in Fig. 7.1 shown below.

The first asteroid, Ceres, was discovered in 1801 by the Italian astronomer Piazzi. Ceres is the largest of all asteroids, and has a diameter of 933 km (the Moon has a diameter of 3,476 km). There are now more than 40,000 asteroids that have been discovered, ranging in size from Ceres, all the way down to large rocks that are just a few hundred meters across. It has been estimated that there are at least 1 million asteroids in the solar system with diameters of 1 km or more. Most asteroids are harmless, and spend all of their time




Figure 7.1: Four large asteroids. Note that these asteroids have craters from the impacts of even smaller asteroids!

in orbits between those of Mars and Jupiter (the so-called “asteroid belt”, see Figure 7.2). Some asteroids, however, are in orbits that take them inside that of the Earth, and could

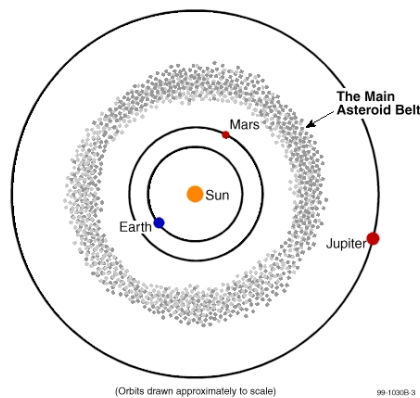


Figure 7.2: The Asteroid Belt.

potentially collide with the Earth, causing a great catastrophe for human life. It is now believed that the impact of a large asteroid might have been the cause for the extinction of the dinosaurs when its collision threw up a large cloud of dust that caused the Earth’s climate to dramatically cool. Several searches are underway to insure that we can identify future “doomsday” asteroids so that we have a chance to prepare for a collision—as the Earth will someday be hit by another large asteroid.

## 7.2 Comets

Comets represent some of the earliest material left over from the formation of the solar system, and are therefore of great interest to planetary astronomers. They can also be beautiful objects to observe in the night sky, unlike their darker and less spectacular cousins, asteroids. They therefore often capture the attention of the public.

## 7.3 Composition and Components of a Comet

Comets are composed of ices (water ice and other kinds of ices), gases (carbon dioxide, carbon monoxide, hydrogen, hydroxyl, oxygen, and so on), and dust particles (carbon and silicon). The dust particles are smaller than the particles in cigarette smoke. In general, the model for a comet's composition is that of a “dirty snowball.” 7.3

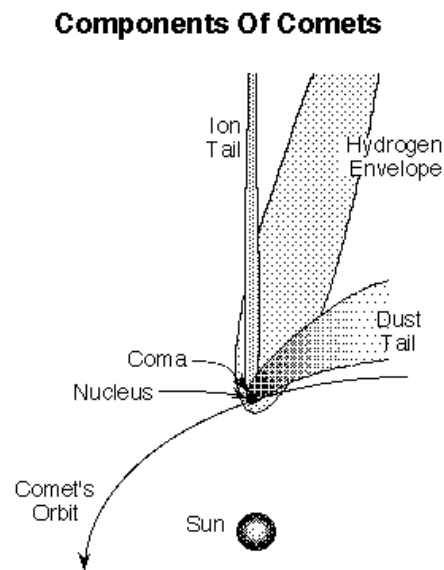


Figure 7.3: The main components of a comet.

Comets have several components that vary greatly in composition, size, and brightness. These components are the following:

- *nucleus*: made of ice and rock, roughly 5-10 km across
- *coma*: the “head” of a comet, a large cloud of gas and dust, roughly 100,000 km in diameter
- *gas tail*: straight and wispy; gas in the coma becomes ionized by sunlight, and gets carried away by the solar wind to form a straight blueish “ion” tail. The shape of the gas tail is influenced by the magnetic field in the solar wind. Gas tails are pointed in the direction directly opposite the sun, and can extend  $10^8$  km.
- *dust tail*: dust is pushed outward by the pressure of sunlight and forms a long, curving tail that has a much more uniform appearance than the gas tail. The dust tail is

pointed in the direction directly opposite the comet's direction of motion, and can also extend  $10^8$  km from the nucleus.

These various components of a comet are shown in the diagram, above (Fig. 7.3).

## 7.4 Types of Comets

Comets originate from two primary locations in the solar system. One class of comets, called the **long-period comets**, have long orbits around the sun with periods of *more* than 200 years. Their orbits are random in shape and inclination, with long-period comets entering the inner solar system from all different directions. These comets are thought to originate in the **Oort cloud**, a spherical cloud of icy bodies that extends from  $\sim 20,000$  to  $150,000$  AU from the Sun. Some of these objects might experience only one close approach to the Sun and then leave the solar system (and the Sun's gravitational influence) completely.

In contrast, the **short-period comets** have periods less than 200 years, and their orbits are all roughly in the plane of the solar system. Comet Halley has a 76-year period, and therefore is considered a short-period comet. Comets with orbital periods  $< 100$  years do not get much beyond Pluto's orbit at their farthest distance from the Sun. Short-period comets cannot survive many orbits around the Sun before their ices are all melted away. It is thought that these comets originate in the **Kuiper Belt**, a belt of small icy bodies beyond the large gas giant planets and in the plane of the solar system. Quite a few large Kuiper Belt objects have now been discovered, including one (Eris) that is about the same size as Pluto.

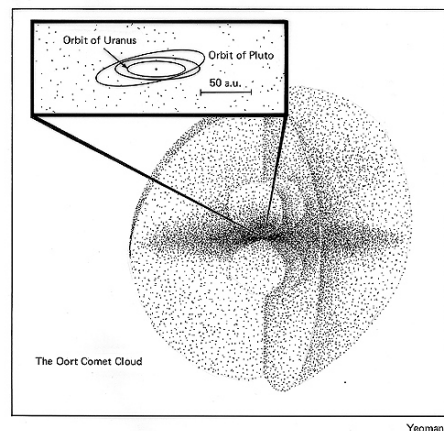


Figure 7.4: The Oort cloud.

## 7.5 The Impacts of Asteroids and Comets

Objects orbiting the Sun in our solar system do so at a variety of speeds that directly depends on how far they are from the Sun. For example, the Earth's orbital velocity is 30



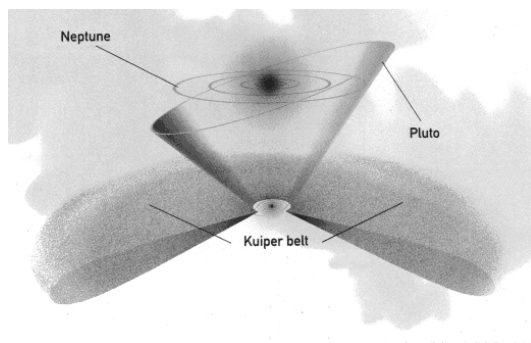


Figure 7.5: The Kuiper belt.

km/s (65,000 mph!). Objects further from the Sun than the Earth move more slowly, objects closer to the Sun than the Earth move more quickly. Note that asteroids and comets near the Earth will have space velocities similar to the Earth, but in (mostly) random directions, thus a collision could occur with a relative speed of impact of nearly 60 km/s! How fast is this? Note that the highest muzzle velocity of any handheld rifle is  $1,220 \text{ m/s} = 1.2 \text{ km/s}$ . Thus, the impact of any solar system body with another is a true *high speed collision* that releases a large amount of energy. For example, an asteroid the size of a football field that collides with the Earth with a velocity of 30 km/s releases as much energy as one thousand atomic bombs the size of that dropped on Japan during World War II (the Hiroshima bomb had a “yield” of 13 kilotons of TNT). Since the equation for kinetic energy (the energy of motion) is  $\text{K.E.} = 1/2(mv^2)$ , the energy scales directly as the mass, and mass goes as the cube of the radius (mass = density  $\times$  Volume = density  $\times R^3$ ). A moving object with ten times the radius of another traveling at the same velocity has 1,000 times the kinetic energy. It is this kinetic energy that is released during a collision.

## 7.6 Exercise #1: Creating Impact Craters

To create impact craters, we will be dropping steel ball bearings into a container filled with ordinary baking flour. There are at least two different sizes of balls, there is one that is twice as massive as the other. You will drop both of these balls from three different heights (0.5 meters, 1 meters, and 2 meters), and then measure the size of the impact crater that they produce. Then on graph paper, you will plot the size of the impact crater versus the speed of the impacting ball.

1. Have one member of your lab group take the meter stick, while another takes the smaller ball bearing.
2. Take the plastic tub that is filled with flour, and place it on the floor.
3. Make sure the flour is uniformly level (shake or comb the flour smooth)
4. Carefully hold the meter stick so that it is just touching the top surface of the flour.

5. The person with the ball bearing now holds the ball bearing so that it is located exactly one half meter (50 cm) above the surface of the flour.
6. Drop the ball bearing into the center of the flour-filled tub.
7. Use the magnet to carefully extract the ball bearing from the flour so as to cause the least disturbance.
8. Carefully measure the diameter of the crater caused by this impact, and place it in the data table, below.
9. Repeat the experiment for heights of 1 meter and 2 meters using the smaller ball bearing (note that someone with good balance might have to *carefully* stand on a chair to get to a height of two meters!).
10. Now repeat the entire experiment using the larger ball bearing. Record all of the data in the data table.

Height (meters)	Crater diameter (cm) Ball #1	Crater diameter (cm) Ball #2	Impact velocity (m/s)
0.5			
1.0			
2.0			

Now it is time to fill in that last column: Impact velocity (m/s). How can we determine the impact velocity? The reason the ball falls in the first place is because of the pull of the Earth's gravity. This force pulls objects toward the center of the Earth. In the absence of the Earth's atmosphere, an object dropped from a great height above the Earth's surface continues to accelerate to higher, and higher velocities as it falls. We call this the "acceleration" of gravity. Just like the accelerator on your car makes your car go faster the more you push down on it, the force of gravity accelerates bodies downwards (until they collide with the surface!).

We will not derive the equation here, but we can calculate the velocity of a falling body in the Earth's gravitational field from the equation  $v = (2ay)^{1/2}$ . In this equation, "y" is the height above the Earth's surface (in the case of this lab, it is 0.5, 1, and 2 meters). The constant "a" is the acceleration of gravity, and equals  $9.80 \text{ m/s}^2$ . The exponent of  $1/2$  means that you take the square root of the quantity inside the parentheses. For example, if  $y = 3$  meters, then  $v = (2 \times 9.8 \times 3)^{1/2}$ , or  $v = (58.8)^{1/2} = 7.7 \text{ m/s}$ .

1. Now plot the data you have just collected on graph paper. Put the impact velocity on the  $x$  axis, and the crater diameter on the  $y$  axis. **(10 points)**

### 7.6.1 Impact crater questions

1. Describe your graph, can the three points for each ball be *approximated* by a single straight line? How do your results for the larger ball compare to that for the smaller ball? (**3 points**)
2. If you could drop both balls from a height of 4 meters, how big would their craters be? (**2 points**)
3. What is happening here? How does the mass/size of the impacting body effect your results. How does the speed of the impacting body effect your results? What have you just proven? (**5 points**)

## 7.7 Crater Illumination

Now, after your TA has dimmed the room lights, have someone take the flashlight out and turn it on. If you still have a crater in your tub, great, if not create one (any height more than 1 meter is fine). Extract the ball bearing.

1. Now, shine the flashlight on the crater from straight over top of the crater. Describe what you see. (**2 points**)
2. Now, hold the flashlight so that it is just barely above the lip of the tub, so that the light shines at a very oblique angle (like that of the setting Sun!). Now, what do you see? (**2**

points)

3. When is the best time to see fine surface detail on a cratered body, when it is noon (the Sun is almost straight overhead), or when it is near “sunset”? [Confirm this at the observatory sometime this semester!] **(1 point)**

## 7.8 Exercise #2: Building a Comet

In this portion of the lab, you will actually build a comet out of household materials. These include water, ammonia, potting soil, and dry ice (CO<sub>2</sub> ice). Be sure to distribute the work evenly among all members of your group. Follow these directions: **(10 points)**

1. Use a freezer bag to line the bottom of your bucket.
2. Place a little less than 1 cup of water (this is a little less than 1/2 of a “Solo” cup!) in the bag/bucket.
3. Add 3 spoonfuls of sand, stirring well. (**NOTE:** Do not stir so hard that you rip the freezer bag lining!!)
4. Add 1 capful of ammonia.
5. Add 1 spoon of organic material (potting soil). Stir until well-mixed.
6. Your TA will place a block or chunk of dry ice inside a towel and crush the block with the mallet and give you some crushed dry ice.
7. Add about 1 cup of crushed dry ice to the bucket, while stirring vigorously. (**NOTE:** Do not stir so hard that you rip the freezer bag!!)
8. Continue stirring until mixture is almost frozen.
9. Lift the comet out of the bucket using the plastic liner and shape it for a few seconds as if you were building a snowball (use gloves!).
10. If not a solid mass, add small amounts of water and keep working the “snowball” until the mixture is completely frozen.

11. Unwrap the comet once it is frozen enough to hold its shape.

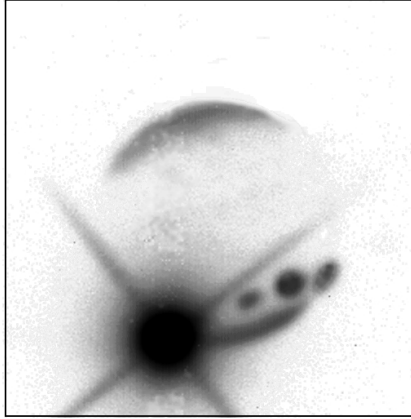
### 7.8.1 Comets and Light

1. Observe the comet as it is sitting on a desk. Make some notes about its physical characteristics, for example: shape, color, smell (**5 points**):
2. Now bring the comet over to the light source (overhead projector) and place it on top. Observe, and then describe what happens to the comet (**5 points**):

### 7.8.2 Comet Strength

Comets, like all objects in the solar system, are held together by their internal strength. If they pass too close to a large body, such as Jupiter, their internal strength is not large enough to compete with the powerful gravity of the massive body. In such encounters, a comet can be broken apart into smaller pieces. In 1994, we saw evidence of this when Comet Shoemaker-Levy/9 impacted into Jupiter. In 1992, that comet passed very close to Jupiter and was fragmented into pieces. Two years later, more than 21 cometary fragments crashed into Jupiter's atmosphere, creating spectacular (but temporary) "scars" on Jupiter's cloud deck.

**Exercise:** After everyone in your group has carefully examined your comet (make sure to note its appearance, shape, smell, weight), it is time to say goodbye. Take a sample rock and your comet, go outside, and drop them both on the sidewalk. What happened to each



Impact of Fragment K of Comet Shoemaker-Levy on Jupiter.  
The scars of three previous impacts can be seen on the planetary disk.  
Image from Peter McGregor and Mark Allen, ANU 2.3m telescope.  
Instrument: CASPIR at 2.34 $\mu$ m. Colour image Mt Stromlo Observatories.

Figure 7.6: The Impact of “Fragment K” of Comet Shoemaker-Levy/9 with Jupiter. Note the dark spots where earlier impacts occurred.

object? (2 points)

### 7.8.3 Comet Questions

1. Draw a comet and label all of its components. Be sure to indicate the direction the Sun is in, and the comet’s direction of motion. (5 points)
2. What are some differences between long-period and short-period comets? Does it make

sense that they are two distinct classes of objects? Why or why not? (**5 points**)

3. If a comet is far away from the Sun and then it draws nearer as it orbits the Sun, what would you expect to happen? (**5 points**)
  
4. Do you think comets have more or less internal strength than asteroids, which are composed primarily of rock? [Hint: If you are playing outside with your friends in a snow storm, would you rather be hit with a snowball or a rock?] (**3 points**)

Name:\_\_\_\_\_

Date:\_\_\_\_\_

## 7.9 Take Home Exercise (35 points total)

Write-up a summary of the important ideas covered in this lab. Questions you may want to consider are:

- How does the mass of an impacting asteroid or comet affect the size of an impact crater?
- How does the speed of an impacting asteroid or comet affect the size of an impact crater?
- Why are comets important to planetary astronomers?
- What can they tell us about the solar system?
- What are some components of comets and how are they affected by the Sun?
- How are comets different from asteroids?

Use complete sentences, and proofread your summary before handing it in.

## 7.10 Possible Quiz Questions

1. What is the main difference between comets and asteroids, and why are they different?
2. What is the Oort cloud and the Kuiper belt?
3. What happens when a comet or asteroid collides with the Moon?
4. How does weather effect impact features on the Earth?
5. How does the speed of the impacting body effect the energy of the collision?

## 7.11 Extra Credit (ask your TA for permission before attempting, 5 points)

On the 15<sup>th</sup> of February, 2013, a huge meteorite exploded in the skies over Chelyabinsk, Russia. Write-up a small report about this event, including what might have happened if instead of a grazing, or “shallow”, entry into our atmosphere, the meteor had plowed straight down to the surface.



Name: \_\_\_\_\_  
Date: \_\_\_\_\_

## 8 Our Sun

The Sun is a very important object for all life on Earth. The nuclear reactions which occur in its core produce the energy which plants and animals need to survive. We schedule our lives around the rising and setting of the Sun in the sky. During the summer, the Sun is higher in the sky and thus warms us more than during the winter, when the Sun stays low in the sky. But the Sun's effect on Earth is even more complicated than these simple examples.

The Sun is the nearest star to us, which is both an advantage and a disadvantage for astronomers who study stars. Since the Sun is very close, and very bright, we know much more about the Sun than we know about other distant stars. This complicates the picture quite a bit since we need to better understand the physics going in the Sun in order to comprehend all our detailed observations. This difference makes the job of solar astronomers in some ways more difficult than the job of stellar astronomers, and in some ways easier! It's a case of having lots of incredibly detailed data. But all of the phenomena associated with the Sun are occurring on other stars, so understanding the Sun's behavior provides insights to how other stars might behave.

- *Goals:* to discuss the layers of the Sun and solar phenomena; to use these concepts in conjunction with pictures to deduce characteristics of solar flares, prominences, sunspots, and solar rotation
- *Materials:* You will be given a Sun image notebook, a bar magnet with iron filings and a plastic tray. You will need paper to write on, a ruler, and a calculator

### 8.1 Layers of the Sun

One of the things we know best about the Sun is its overall structure. Figure 8.1 is a schematic of the layers of the Sun's interior and atmosphere. The interior of the Sun is made up of three distinct regions: the core, the radiative zone, and the convective zone. The *core* of the Sun is very hot and dense. This is the only place in the Sun where the temperature and pressure are high enough to support nuclear reactions. The *radiative zone* is the region of the sun where the energy is transported through the process of radiation. Basically, the photons generated by the core are absorbed and emitted by the atoms found in the radiative zone like cars in stop and go traffic. This is a very slow process. The *convective zone* is the region of the Sun where energy is transported by rising "bubbles" of material. This is the same phenomenon that takes place when you boil a pot of water. The hot bubbles rise to the top, cool, and fall back down. This gives the the surface of the Sun a granular look. Granules are bright regions surrounded by darker narrow regions. These granules cover the entire surface of the Sun.

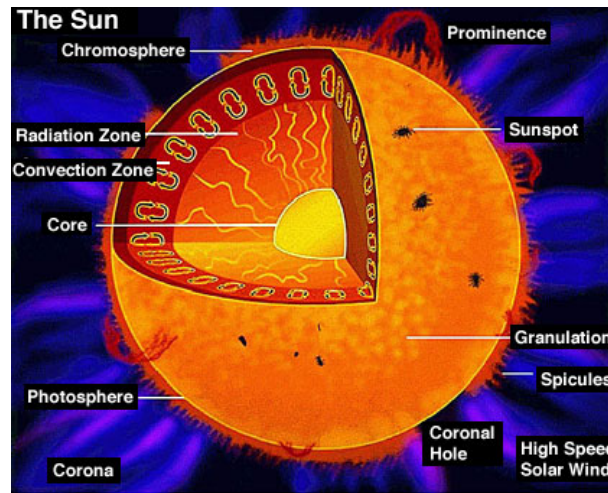


Figure 8.1: A diagram of the various layers/components of the Sun, as well as the appearance and location of other prominent solar features.

The atmosphere of the Sun is also comprised of three layers: the photosphere, the chromosphere, and the corona. The *photosphere* is a thin layer that forms the visible surface of the Sun. This layer acts as a kind of insulation, and helps the Sun retain some of its heat and slow its consumption of fuel in the core. The *chromosphere* is the Sun's lower atmosphere. This layer can only be seen during a solar eclipse since the photosphere is so bright. The *corona* is the outer atmosphere of the Sun. It is very hot, but has a very low density, so this layer can only be seen during a solar eclipse (or using specialized telescopes). More information on the layers of the Sun can be found in your textbook.

## 8.2 Sunspots

Sunspots appear as dark spots on the photosphere (surface) of the Sun (see Figure 8.2). They last from a few days to over a month. Their average size is about the size of the Earth, although some can grow to many times the size of the Earth! Sunspots are commonly found in pairs. How do these spots form?

The formation of sunspots is attributed to the Sun's *differential rotation*. The Sun is a ball of gas, and therefore does not rotate like the Earth or any other solid object. The Sun's equator rotates faster than its poles. It takes roughly 25 days for material to travel once around the equator, but about 35 days for it to travel once around near the north or south poles. This differential rotation acts to twist up the magnetic field lines inside the Sun. At times, the lines can get so twisted that they pop out of the photosphere. Figure 8.3 illustrates this concept. When a magnetic field loop pops out, the places where it leaves and re-enters the photosphere are cooler than the rest of the Sun's surface. These cool places appear darker, and therefore are called "sunspots".

The number of sunspots rises and falls over an 11 year period. This is the amount of time

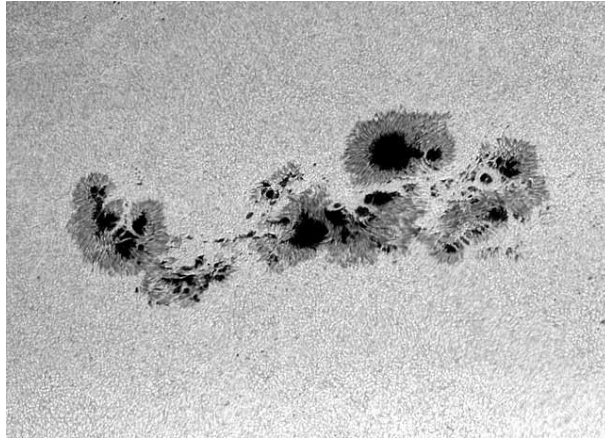


Figure 8.2: A large, complicated group of Sunspots.

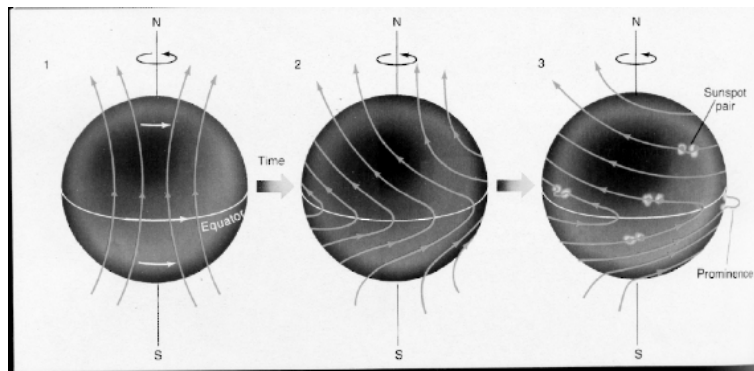


Figure 8.3: Sunspots are a result of the Sun's differential rotation.

it takes for the magnetic lines to tangle up and then become untangled again. This is called the *Solar Cycle*. Look in your textbook for more information on sunspots and the solar cycle.

### 8.3 Solar Phenomena

The Sun is a very exciting place. All sorts of activity and eruptions take place in it and around it. We will now briefly discuss a few of these interesting phenomena. You will be analyzing pictures of prominences during this lab.

Prominences are huge loops of glowing gas protruding from the chromosphere. Charged particles spiral around the magnetic field lines that loop out over the surface of the Sun, and therefore we see bright loops above the Sun's surface. Very energetic prominences can break free from the magnetic field lines and shoot out into space.

Flares are brief but bright eruptions of hot gas in the Sun's atmosphere. These eruptions occur near sunspot groups and are associated with the Sun's intertwined magnetic field lines. A large flare can release as much energy as 10 billion megatons of TNT! The charged particles that flares emit can disrupt communication systems here on Earth.

Another result of charged particles bombarding the Earth is the Northern Lights. When the particles reach the Earth, they latch on to the Earth's magnetic field lines. These lines enter the Earth's atmosphere near the poles. The charged particles from the Sun then excite the molecules in Earth's atmosphere and cause them to glow. Your textbook will have more fascinating information about these solar phenomena.

### 8.4 Lab Exercises

There are three main exercises in this lab. The first part consists of a series of "stations" in a three ring binder where you examine some pictures of the Sun and answer some questions about the images that you see. Use the information that you have learned from lectures and your book to give explanations for the different phenomena that you see at each station. In the second exercise you will learn about magnetic fields using a bar magnet and some iron filings. Finally, for those labs that occur during daylight hours (i.e., starting before 5 pm!), you will actually look at the Sun using a special telescope to see some of the phenomena that were detailed in the images in the first exercise of this lab (for those students in night-time labs, arrangements might be made so as to observe the Sun during one of your lecture sections). During this lab you will use your own insight and knowledge of basic physics and astronomy to obtain important information about the phenomena that we see on the Sun, just as solar astronomers do. As with all of the other exercises in this lab manual, if there is not sufficient room to write in your answers into this lab, do not hesitate to use additional sheets of paper. Do not try to squeeze your answers into the tiny blank spaces in this lab description if you need more space than provided! Don't forget to **SHOW ALL**

## OF YOUR WORK.

One note of caution about the images that you see: the colors of the pictures (especially those taken by SOHO) are *not* true colors, but are simply colors used by the observatories' image processing teams to best enhance the features shown in the image.

### 8.4.1 Exercise #1: Getting familiar with the Size and Appearance of the Sun

**Station 1:** In this first station we simply present some images of the Sun to familiarize yourself with what you will be seeing during the remainder of this lab. Note that this station has no questions that you have to answer, but you still should take time to familiarize yourself with the various features visible on/near the Sun, and get comfortable with the specialized, filtered image shown here.

- The first image in this station is a simple “white light” picture of the Sun as it would appear to you if you were to look at it in a telescope that was designed for viewing the Sun. Note the dark spots on the surface of the Sun. These are “sunspots”, and are dark because they are cooler than the rest of the photosphere.
- When we take a very close-up view of the Sun’s photosphere we see that it is broken up into much smaller “cells”. This is the “solar granulation”, and is shown in picture #2. Note the size of these granules. These convection cells are about the size of New Mexico!
- To explore what is happening on the Sun more fully requires special tools. If you have had the spectroscopy lab, you will have seen the spectral lines of elements. By choosing the right element, we can actually probe different regions in the Sun’s atmosphere. In our first example, we look at the Sun in the light of the hydrogen atom (“H-alpha”). This is the red line in the spectrum of hydrogen. If you have a daytime lab, and the weather is good, you will get to see the Sun just like it appears in picture #3. The dark regions in this image is where cool gas is present (the dark spot at the center is a sunspot). The dark linear, and curved features are “prominences”, and are due to gas caught in the magnetic field lines of the underlying sunspots. They are above the surface of the Sun, so they are a little bit cooler than the photosphere, and therefore darker.
- Picture #4 shows a “loop” prominence located at the edge (or “limb”) of the Sun (the disk of the Sun has been blocked out using a special telescope called a “coronagraph” to allow us to see activity near its limb). If the Sun cooperates, you may be able to see several of these prominences with the solar telescope. You will be returning to this image in Exercise #2.

**Station 2:** Here are two images of the Sun taken by the SOHO satellite several days apart (the exact times are at the top of the image). **(8 points)**

- Look at the sunspot group just below center of the Sun in **image 1**, and then note that it has rotated to the western (right-hand) limb of the Sun in **image 2**. Since the sunspot group has moved from center to limb, you then know that the Sun has rotated by one quarter of a turn ( $90^\circ$ ).
- Determine the precise time difference between the images. Use this information plus the fact that the Sun has turned by 90 degrees in that time to determine the rotation rate of the Sun. If the Sun turns by 90 degrees in time  $t$ , it would complete one revolution of 360 degrees in how much time?
- Does this match the rotation rate given in your textbook or in lecture? Show your work.

In the second photograph of this station are two different images of the Sun: the one on the left is a photo of the Sun taken in the near-infrared at Kitt Peak National Observatory, and the one on the right is a “magnetogram” (a picture of the magnetic field distribution on the surface of the Sun) taken at about the same time. (Note that black and white areas represent regions with different *polarities*, like the north and south poles of the bar magnet used in the second part of this lab.) (**7 points**)

- What do you notice about the location of *sunspots* in the photo and the location of the *strongest magnetic fields*, shown by the brightest or darkest colors in the magnetogram?
- Based on this answer, what do you think causes sunspots to form? Why are they dark?

**Station 3:** Here is a picture of the *corona* of the Sun, taken by the SOHO satellite in the extreme ultraviolet. (An image of the Sun has been superimposed at the center of the picture. The black ring surrounding it is a result of image processing and is not real.) **(10 points)**

- Determine the diameter of the Sun, then measure the minimum extent of the corona (diagonally from upper left to lower right).
- If the photospheric diameter of the Sun is 1.4 million kilometers ( $1.4 \times 10^6$  km), how big is the corona? (HINT: use unit conversion!)
- How many times larger than the Earth is the corona? (Earth diameter=12,500 km)

**Station 4:** This image shows a time-series of exposures by the SOHO satellite showing an *eruptive prominence*. **(15 points)**

- As in station 3, measure the diameter of the Sun and then measure the distance of the top of the prominence from the edge of the Sun in the first (earliest) image. Then measure the distance of the top of the prominence from the edge of the Sun in the last image.

- Convert these values into real distances based on the linear scale of the images. Remember the diameter of the Sun is  $1.4 \times 10^6$  kilometers.
- The velocity of an object is the distance it travels in a certain amount of time ( $\text{vel} = \text{dist}/\text{time}$ ). Find the velocity of the prominence by subtracting the two distances and dividing the answer by the amount of time between the two images.
- In the most severe of solar storms, those that cause flares, and “coronal mass ejections” (and can disrupt communications on Earth), the material ejected in the prominence (or flare) can reach velocities of 2,000 kilometers per second. If the Earth is  $150 \times 10^6$  kilometers from the Sun, how long (hours or days) would it take for this ejected material to reach the Earth?

**Station 5:** This is a plot of where sunspots tend to occur on the Sun as a function of *latitude* (top plot) and time (bottom plot). What do you notice about the distribution sunspots? How long does it take the pattern to repeat? What does this length of time correspond to? **(3 points)**



### 8.4.2 Exercise #2: Exploring Magnetic Fields

The magnetic field of the Sun drives most of the solar activity. In this section we compare the magnetic field of sunspots to that of a bar magnet (and an optional exercise that shows that a magnetic field is generated by an electric current). During this exercise you will be using a plastic tray in which you will sprinkle iron filings (small bits of iron) to trace the magnetic field of a bar magnet. This can be messy, so be careful as we only have a finite supply of these iron filings, and the other lab sections will need to re-use the ones supplied to you.

- First, let's explore the behavior of a compass in the presence of a magnetic field. Grab the bar magnet and wave the “north pole” (the red end of the bar magnet with the large “N”) of the magnet by the compass. Which end of the compass needle (or arrow) seems to be attracted by the north pole of the magnet? (**1 point**)
- Ok, reverse the bar magnet so the south pole (white end) is the one closest to the compass. Which end of the compass needle is attracted to the south pole of the bar magnet? (**1 point**)
- The compass needle itself is a little magnet, and the pointy, arrow end of the compass needle is the north pole of this little magnet. Knowing this, what does this say about magnets? Which pole is attracted to which pole (and vice versa)? (**1 point**)
- As you know, a compass can be used to find your way if you are lost because the needle always points towards the North Pole of the Earth. The Earth has its own magnetic field generated deep in its molten iron core. This field acts just like that of a bar magnet. But given your answer to the last question, and the fact that the “north pole” of the compass needle points to the North Pole of the Earth, what is the actual “polarity” of the Earth’s “magnetic North” pole? (**1 point**)

We have just demonstrated the power of attraction of a magnetic field. What does a magnetic field look like? In this section we use some iron filings, a plastic tray, and the bar magnet to explore the appearance of a magnetic field, and compare that to what we see on the Sun.

- Place the bar magnet on the table, and center the plastic tray on top of the bar magnet. Gently sprinkle the iron filings on to the plastic tray so that a thin coating covers the entire tray. Sketch the pattern traced-out by the magnetic filings below, and describe this pattern. (**2 points**)

- The iron filings trace the magnetic field lines of the bar magnet. The field lines surround the magnet in all dimensions (though we can only easily show them in two dimensions). Your TA will show you a device that has a bar magnet inside a plastic case to demonstrate the three dimensional nature of the field. Compare the pattern of the iron filings around the bar magnet to the picture of the sunspot shown in Figure 8.4. They are similar! What does this imply about sunspots? (**3 points**)

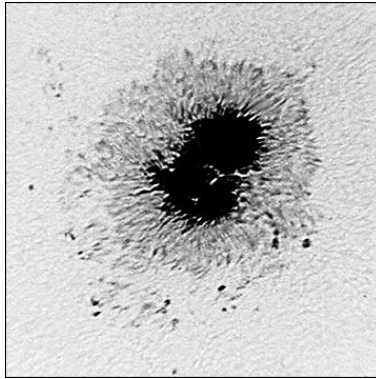


Figure 8.4: The darker region of this double sunspot is called the “umbra”, while the less dark, filamentary region is called the “penumbra”.

- Now, lets imagine what a fully three dimensional magnetic field looks like. The pattern of the iron filings around the bar magnet would also exist into the space *above* the bar magnet, but we cannot suspend the iron filings above the magnet. Complete Figure 8.5 by drawing-in what you imagine the magnetic field lines look like *above* the bar magnet. (**3 points**)



Figure 8.5: Draw in the field lines above this bar magnet.

- Compare your drawing, above, to the image of the loop prominence seen in station #1 of Exercise #1. What are their similarities—imagine if the magnetic field lines emitted light, what would you expect to see? (**3 point**)

If a sunspot pair is like a little bar magnet on the surface of the Sun, the field extends up into the atmosphere, and along the magnetic field charged particles can collect, and we see light emitted by these moving particles (mostly ionized hydrogen). Note that we do not always see the complete set of field lines in prominences because of the lack of material high in the Sun's atmosphere—but the bases of the prominences are visible, and are located just above the sunspot.

\*\*\*\*\*If the weather is clear, and your TA is ready, you can proceed to Exercise #3 to look at the Sun with a special solar telescope.\*\*\*\*\*

### 8.4.3 Optional Exercise: Generating a magnetic field with an electric current

If yours is a nighttime lab, or the weather is poor, you may not be able to complete exercise #3. If this is the case, we offer this alternative exercise on how magnetic fields are created.

How are magnetic fields generated? There are two general categories of magnetism, one is due to intrinsically magnetic materials such as the bar magnet you have been playing with, and the other are magnetic fields generated by electric currents. The mechanism for why some materials are magnetic is complicated, and requires an understanding of the atomic/molecular structure of materials, and is beyond the scope of this class. The second type of magnetism, that caused by electric currents, is more relevant for understanding solar activity.

Electricity and magnetism are intimately related, in fact, scientists talk about the theory of “Electromagnetism”. An electric current, which is (usually) composed of moving electrons, generates a magnetic field. A moving magnetic field, can generate an electric current. The magnetic fields of both the Earth and the Sun are generated because they have regions deep inside them that act as electromagnetic fluids. In the Earth’s core, it is very hot, and the iron there is molten. Due to the rotation of the Earth, this molten iron fluid is rotating very quickly. Thus, the liquid iron core acts like a current flowing around a wire and can generate a magnetic field. A similar process occurs in the Sun. The gas in the interior of the Sun is “ionized” (the electrons are no longer bound to the protons), and thus the rotation of the Sun spins this ionized gas around generating an electric current that, in turn, generates a magnetic field.

In this exercise you will be using a voltage source (either a battery or low voltage transformer) to generate an electric current to produce a magnetic field. For our “electromagnet” we will simply use a bolt wound with wire. The current flows through the wire, which generates a magnetic field that is carried by the nail. **(Warning: the wire and/or bolt can get fairly hot if you leave the current on too long, so be careful!)**

- Take the two ends of the wire that is wound around the bolt and hook them to the terminals of the lantern battery (or 6V transformer). You now have an electromagnet. Move the compass slowly around the electromagnet. Describe its behavior, does it act like the bar magnet? **(2 points)**

- Using the experience gained from Exercise #2, which end of the nail is the “North” pole of the electromagnet? Switch the wire leads so that they wires are connected in an opposite way. What happens? (**2 points**).
- Just as you did for the bar magnet, place the white plastic tray on top of the electro-magnet and gently sprinkle the iron filings into the tray (sprinkle them very lightly, and gently tap the white tray to get them to align—your electro-magnet is not quite as strong as the bar magnet). Draw the resulting pattern on the next page. (**2 points**)
- Does the pattern you have just drawn resemble the one generated by the magnetic field? Describe your results. (**2 points**)


#### 8.4.4 Exercise #3: Looking at the Sun

The Sun is very bright, and looking at it with either the naked eye or any optical device is dangerous—special precautions are necessary to enable you to actually look at the Sun. To make the viewing safe, we must eliminate 99.999% of the light from the Sun to reduce it to safe levels. In this exercise you will be using a very special telescope designed for viewing the Sun. This telescope is equipped with a hydrogen light filter. It only allows a tiny amount of light through, isolating a single emission line from hydrogen (“H-alpha”). In your lecture session you will learn about the emission spectrum of hydrogen, and in the spectroscopy lab you get to see this red line of hydrogen using a spectroscope. Several of the pictures in Exercise #1 were actually obtained using a similar filter system. This filter system gives us a unique view of the Sun that allows us to better see certain types of solar phenomena, especially the “prominences” you encountered in Exercise #1.

- In the “Solar Observation Worksheet” below, draw what you see on and near the Sun as seen through the special solar telescope. (**7 points**)

Note: Kitt Peak Vacuum Telescope images are courtesy of KPNO/NOAO. SOHO Extreme Ultraviolet Imaging Telescope images courtesy of the SOHO/EIT consortium. SOHO Michelson

## Solar Observation Worksheet



Name: \_\_\_\_\_

Lab Sec.: \_\_\_\_\_

Date: \_\_\_\_\_

TA: \_\_\_\_\_

Doppler Imager images courtesy of the SOHO/MDI consortium. SOHO is a project of international cooperation between the European Space Agency (ESA) and NASA.



Name: \_\_\_\_\_  
Date: \_\_\_\_\_

## 8.5 Take Home Exercise (35 points total)

On a separate sheet of paper, please summarize the important concepts discussed in this lab including these topics:

- Discuss the different types of phenomena and structures you looked at in the lab
- Explain how you can understand what causes a phenomenon to occur by looking at the right kind of data
- List the six layers of the Sun (in order) and give their temperatures.
- What causes the Northern (and Southern) Lights, also known as “Aurorae”?

Use complete sentences and, proofread your summary before turning it in.

## 8.6 Possible Quiz Questions

- 1) What are sunspots, and what leads to their formation?
- 2) Name the three interior regions of the Sun.
- 3) What is differential rotation?
- 4) What is the “photosphere”?
- 5) What are solar flares?

## 8.7 Extra Credit (ask your TA for permission before attempting, 5 points)

Look-up a plot of the number of sunspots versus time that spans the last four hundred years. For about 50 years, centered around 1670, the Sun was unusually “quiet”, in that sunspots were rarely seen. This event was called the “Maunder minimum” (after the discoverer). At the same time as this lack of sunspots, the climate in the northern hemisphere was much colder than normal. The direct link between sunspots and the Earth’s climate has not been fully established, but there must be some connection between these two events. Near 1800 another brief period of few sunspots, the “Dalton minimum” was observed. Looking at recent sunspot numbers, some solar physicists have suggested the Sun may be entering another period like the Dalton minimum. Search for the information these scientists have used to make this prediction. Describe the climate in the northern hemisphere during the last Dalton minimum. Are there any good ideas on the link between sunspot number and climate that you can find?



Name: \_\_\_\_\_  
 Date: \_\_\_\_\_

## 9 Paleoclimate

### 9.1 Introduction

While the gravitational force on the Earth is dominated by the force of gravity between the Earth and the Sun, other bodies in the Solar System affect the orbit of the earth in small ways, leading to some variations in orbital parameters over time. Given that the orbital parameters of planets can have an effect on climate, changes in the orbital parameters can lead to climate changes over long periods of time.

In this lab, we will investigate several effects on the Earth's orbital parameters over time, and see how, together, they are expected to lead to variations in Earth's climate.

We will also learn about how scientists can measure the past climate of the Earth uses samples of ice that have accumulated over hundreds of thousands of years. We will see whether the predictions of climate change from the changes in orbital parameters are matched by the climate record.

Finally, we will consider recent changes in climate and compare them to historical changes.

Before we begin, let's review the timeline of the Earth's history, which is shown graphically in Figure 9.1 The Earth was formed, along with the Sun, about 4.5 *billion* years ago. The simplest forms of life arose about 2-4 billion years ago. Abundant life on Earth started about 0.5 billion years ago (500 million years). Dinosaurs disappeared about 65 million years ago. The first homo sapiens appeared about 200 thousand years ago (=0.2 million years = 0.0002 billion years!).

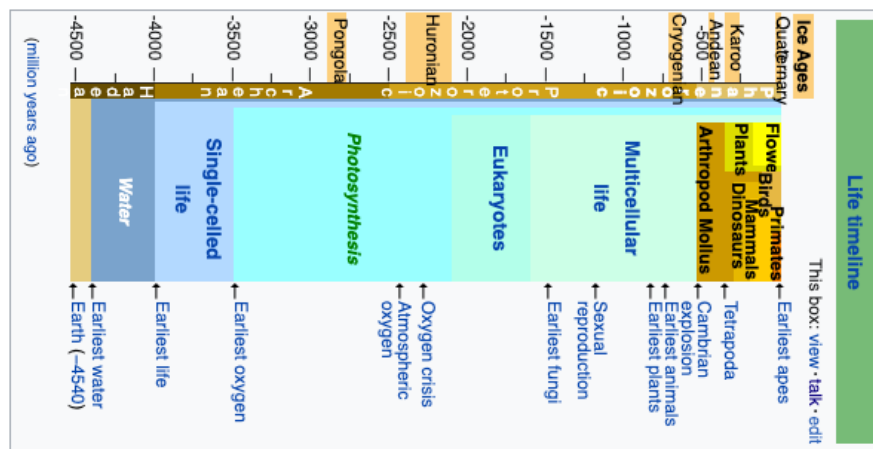


Figure 9.1:

## 9.2 Milankovich Cycles

Changes in the orbital parameters of Earth are often known as *Milankovich cycles*. Read about these at the following two sites:

- <https://earthobservatory.nasa.gov/features/Milankovitch> and find out who Milutin Milankovitch was.
- <https://climate.nasa.gov/news/2948/milankovitch-orbital-cycles-and-their-role-in-earths-climate/>

1. Define the following terms in your own words:

- (a) eccentricity
- (b) obliquity (or tilt)
- (c) precession

Let's investigate how variations in these parameters are expected to lead to climate changes on Earth.

Go to <http://cimss.ssec.wisc.edu/wxfest/Milankovitch/earthorbit.html>

Notes on using this simulator:

- The red and gray buttons at the bottom can be turned on and off. Red is on; gray is off. In some cases, multiple buttons can be selected at the same time, such as tilt, precession and eccentricity.
- The yellow triangle on the graph on the side can be adjusted to move around in time.

Click on Orbit and Faster Orbit, as well as Top View and Oblique View to see how the system works. Also drag the yellow arrow on the chart up and down.

Click on the button Top View. You should now be able to view the orbit of the earth from above. Note where in the orbit the Earth is closest to the Sun (perihelion) and where it is farthest (aphelion),

1. At what time of the year is the Earth the farthest from the Sun? What season is that in the northern hemisphere? What can you infer about the importance of distance from the Sun on climate at the current time?

Click on the button Oblique View. You should now be able to view the tilt of the earth on its axis as it rotates around the sun.

1. Describe the direction of the tilt of the N pole of the Earth's rotation axis at aphelion. (\*Hint: Using the Season Lock button may be useful.)

2. Describe the direction of the tilt at perihelion.

Select the Eccentricity button and go to Top View. Drag the yellow arrow up and down and make note of any changes you see.

1. How do you think eccentricity could impact climate?
2. The predicted effects on temperature show a regular spacing in time. What is the approximate amount of time for each cycle (the time between successive peaks in the purple line)?

Unselect the Eccentricity button and click on Precession. Drag the yellow arrow up and down while you are in the "Top View." Do the same for Oblique View. Make a note of any changes you see while moving the yellow arrow while in Oblique View and Top View. (Note, you might want to start off moving the yellow arrow slowly, paying attention to the Earth).

1. From this investigation, describe what you think Precession means. How do you think precession could impact climate?
2. The predicted effects on temperature show a regular spacing in time. What is the approximate amount of time for each cycle (the time between successive peaks in the purple line)?

Unselect the Precession button and click on Tilt. Drag the yellow arrow up and down while in Top view and Oblique View, make note of any changes you see.

1. What is the approximate amount of time for each tilt cycle (the time between successive peaks in the purple line)?

Collectively, the natural variations in these three parameters are called the Milankovitch Cycles. To see the combined effect of all three cycles, click on Eccentricity, Precession and Tilt at the same time. Note the Cycle indicated by the purple line that you see in the right-hand graph. It is a combination of all three effects, and predicts the change in temperature coming from the combined effect of the different orbital parameter variations.

1. In your own words, explain how the tilt of the earth and its orbit determine the amount of solar radiation we receive.

### 9.3 Ice cores and past climate record

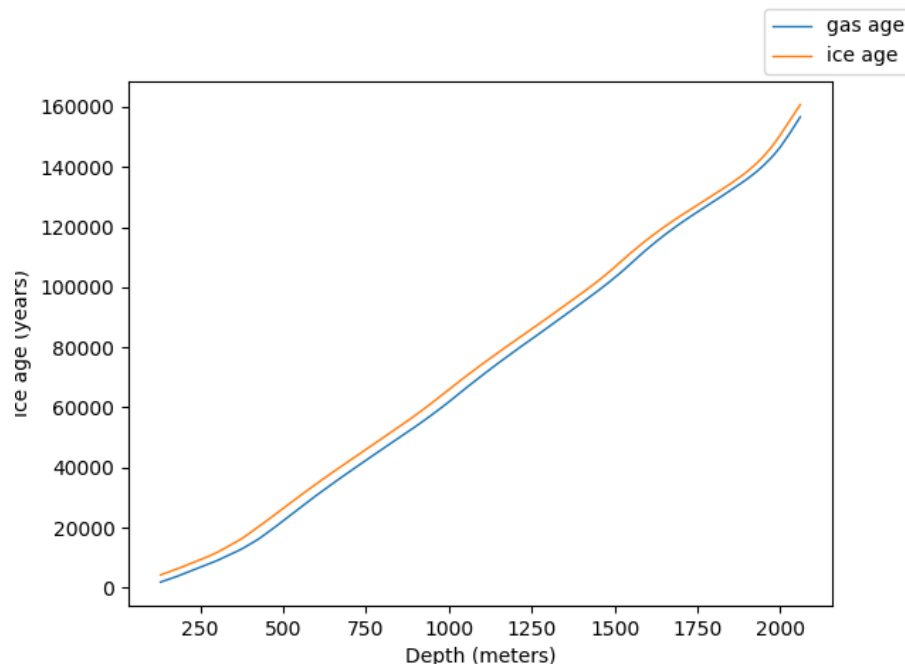
The Vostok ice core was the result of a collaborative ice-drilling project between Russia and the U.S. in 1998. The core was drilled at the Russian station named Vostok in East Antarctica and produced the deepest ice core ever recovered. It reached a depth of 3,623 meters and the trapped air in the ice reveals changes in atmospheric composition of trace gases, which can be used to study temperatures in the past as well as the amount of certain gases in the Earth's atmosphere in the past. The deeper the ice core goes, the further back in time we are able to examine. In total, there was about 420,000 years worth of data that was able to be provided from the Vostok ice cores.

To learn more about ice cores, watch the video at:

[https://d32ogoqmya1dw8.cloudfront.net/files/eslabs/cryosphere/ice\\_core\\_video.v2.mp4](https://d32ogoqmya1dw8.cloudfront.net/files/eslabs/cryosphere/ice_core_video.v2.mp4)

1. What does each layer of an ice core represent? (Select one of the following.)
  - (a) a different atmospheric gas
  - (b) a different year of weather and snow
  - (c) a different glacier

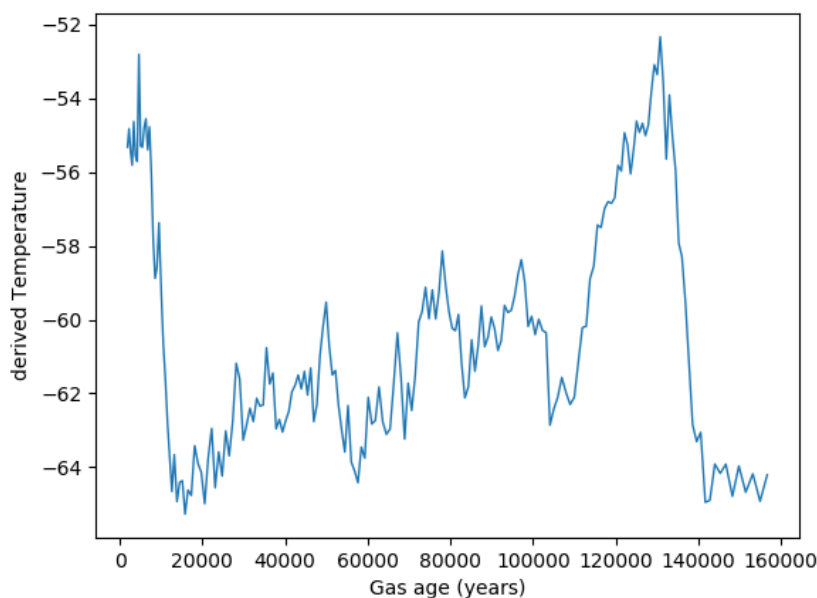
Age is calculated in two different ways within an ice core. The ice age is calculated from an analysis of annual layers in the top part of the core, and using an ice flow model for the bottom part (the details of which are beyond the scope of this unit). The gas age data accounts for the fact that gas is only trapped in the ice at a depth well below the surface where the pores close up. The following is a plot of both types of ages as a function of depth below the surface.



1. What is the gas age at a depth of 500 meters?
2. At what depth in the ice core is the ice age closest to 100,000 years?
3. Based on what you read, why is there is difference between the gas age and the ice age?

The maximum amount of moisture that air can hold drops with decreasing temperatures. When humid air cools, the water molecules will condensate to form precipitation. Heavier isotopes (atoms with an extra neutron) have a slightly higher tendency to condensate, so humid air gradually loses relatively more and more of the heavier water molecules. Every time precipitation forms, the air mass becomes more depleted in heavy isotopes. During cold conditions (e.g., during winter or in a cold climatic period), the air masses arriving in over ice sheets have cooled more and have formed more precipitation, which means that the remaining vapor is more depleted in heavy isotopes. Measuring the abundance of different isotopes can be used as a proxy for temperature.

The following is a plot of the derived temperature vs age:



1. Approximately how long ago did the maximum temperature occur?

2. Approximately how long ago did the minimum temperature occur?

## 9.4 Relation of paleoclimate to orbital parameter variations

Milankovitch found that there are seasonal and latitudinal variations in the amount of solar radiation the earth receives. We have seen that it is possible to measure the past climate of the Earth over the past several hundred thousand years. Let's see whether the observed climate changes match up with the predicted ones from orbital parameter variations.

Go back to <http://cimss.ssec.wisc.edu/wxfest/Milankovitch/earthorbit.html>

Turn off (grey) all of the orbital parameters (eccentricity, tilt, precession). Turn on (red) the Vostok Ice Core button to plot a green line that represents Earth's recent temperature fluctuations. Note that the data here go back about 400,000 years, while the data we used in the last section only go back about 160,000 years. Can you match up the last graph with the data shown by the green line?

1. Are present day temperatures the warmest we have ever experienced in the last 400,000 years?

Click on the Eccentricity box on the bottom of the screen. This will produce a purple line on the Vostok ice core graph.

1. Does the shape of the Earth's orbit by itself correlate well with the observed temperature record?

Unclick the Eccentricity box on the bottom of the screen. Click on the Precession box on the bottom of the screen to produce another purple line on the Vostok ice core graph.

1. Does the precession of the Earth's rotation axis by itself correlate well with the observed temperature record?

Unclick the Precession box on the bottom of the screen. Click on the Tilt box on the bottom of the screen. This will produce a purple line on the Vostok ice core graph.

1. Does the tilt of the Earth's rotation axis by itself correlate well with the observed temperature record?

Experiment with combining multiple effects of tilt, eccentricity, and precession.



1. Which combination of eccentricity, tilt, and precession mostly closely matches the temperatures over the last 400,000 years as inferred from the ice cores?

The Milankovitch Theory that cyclical variations in three elements of Earth-sun geometry combine to produce variations in the amount of solar energy that reaches Earth explains past climates. The Vostok ice core data corroborates this theory.

## 9.5 Recent climate changes

Recent studies show that the earth is warming up, for example, as demonstrated by the worldwide climates stripe shown in Figure 9.2 that we have seen before.

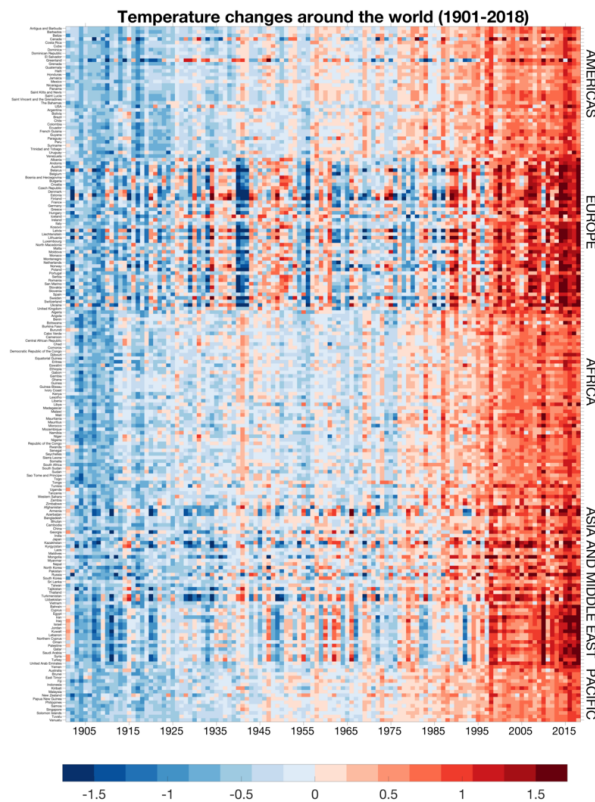


Figure 9.2: Climate stripes for all countries, showing warming around the globe over the past century.

We will demonstrate that this warming is unlike any warming seen in the climate record.

To do this, we will use the link -

<https://appleto.kcvs.ca/HistoricClimateTrends/HistoricalTemperatures.html>

Historic Climate Trends Learning Tool to measure the rate of current warming and compare it to the rate of past warming episodes.

After you open the tool, you should see various options at the bottom of the graph: Temperature, CO<sub>2</sub>, N<sub>2</sub>O, Methane, Trendlines, and lines. If the word / box is highlighted in blue,

that means its is turned on. If Temperature is not turned on already, click on Temperature to view past temperatures. If you don't see anything, make sure that trendlines and lines are turned on. You can zoom in on a region of data by clicking on the graph and dragging across the range you want to see. To reset to the full time range, use the Reset item at the top.

1. Find a region where you think the temperature has risen the fastest. What range of times did you choose to measure the slope over?

Zoom in on this region. To measure the rate of temperature change, we will use the Calculate Slope feature (at the top of the window) to calculate the average rate of change of temperature. To calculate the change in temperature across the region we are looking at, click on Calculate Slope and then click on Temperature from the drop-down menu. Once you've done this, start hovering over the graph, and you will see a dot. When you click a location on the curve, that dot will be locked into place. It will then ask you to select another point on the graph and calculate the slope between the two points. Do this by choosing the lowest point before a temperature rise, and then the highest point. The tool will then report the average rate of temperature change in degrees per year.

1. What value did you get for average rate of temperature change (which is what the slope is) during your chosen interval?

Now let's measure the recent rate of temperature rise. To do so, either reset and zoom in on the far right of the plot, or use the show item at the top of the screen and select the last 5000 years. You should see a relatively constant temperature with a rise in the last 100-200 years.

Measure the rate of this temperature rise using the Calculate Slope tool as before.

1. What range of times did you choose to measure the slope over?
2. What value did you get for average rate of temperature change?
1. Compare the rate of temperature change in the last 100-200 years with that of the fastest rate of change in the last 800,000 years: which is bigger?
2. Using the results from this section, explain how today's climate change is different from the natural episodes of climate change the Earth has experienced in the past.

3. Considering the rate of change of temperature you see in the Milankovich cycle simulator, what are the connections (if any) between the Milankovitch Cycles and the current phenomenon of global warming?

## 9.6 Long term climate change

Ice cores provide records of temperature over the last several hundred thousand years. This is only a tiny fraction of the Earth's history: the Earth is about 4.5 billion years old, and 500,000 years is 0.0005 billion years!

Tracking temperatures over longer periods of time is less precise, but scientists have provides some estimates.

Figure 9.3 shows estimates of temperature change over the last 500 *million* years. Note that the scale on the horizontal axis is not linear in time! The data we have been looking at appears in the rightmost two panels, but the more recent times are stretched out compared to older times. The same is true as one goes farther back in time on the plot, as you can see from the axis labels.

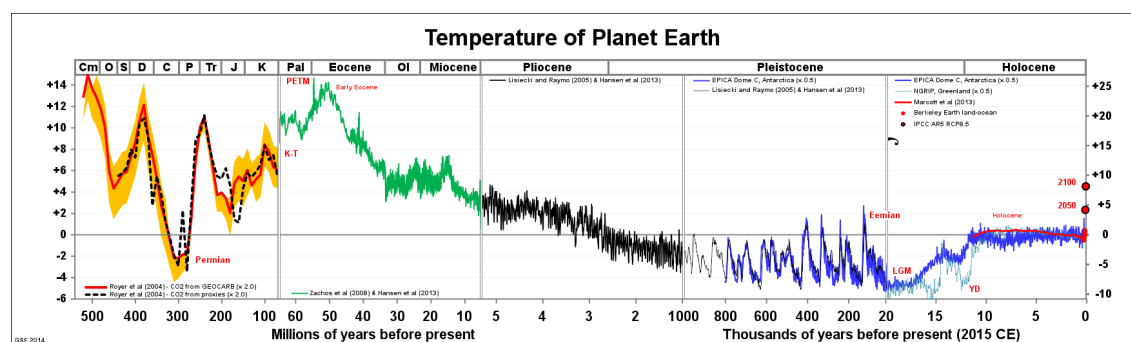


Figure 9.3: Long term temperature changes on Earth

1. Has the Earth been significantly hotter than it is now at any point in the past? When?
2. If the Earth was warmer in the past, does that mean that we shouldn't be concerned about a rise in temperature now? Why or why not?



Name: \_\_\_\_\_  
Date: \_\_\_\_\_

## 10 The History of Water on Mars

Scientists believe that for life to exist on a planet (or moon), there must be liquid water available. Thus, one of the priorities for NASA has been the search for water on other objects in our solar system. Currently, these studies are focused on three objects: Mars, Europa (a moon of Jupiter), and Enceladus (a moon of Saturn). It is believed that both Europa and Enceladus have liquid water below their surfaces. Unfortunately, it will be very difficult to find out if their subsurface oceans harbor lifeforms, as they are below very thick sheets of ice. Mars is different. Mars was discovered to have polar ice caps more than 350 years ago. While much of the surface ice of these polar caps is “dry ice”, frozen carbon dioxide, we believe there is a large quantity of frozen water in the polar regions of Mars.

Mars has many similarities to Earth. The rotation period of Mars is 24 hours and 37 minutes. Martian days are just a little longer than Earth days. Mars also has seasons that are similar to those of the Earth. Currently, the spin axis of Mars is tilted by  $25^\circ$  to its orbital plane (Earth’s axis is tilted by  $23.5^\circ$ ). Thus, there are times during the Martian year when the Sun never rises in the northernmost and southernmost parts of the planet (winter above the “arctic circles”). And times of the year in these same places where the Sun never sets (northern or southern summer). Mars is also very different from the Earth: its radius is about 50% that of Earth, the average surface temperature is very cold,  $-63^\circ\text{C}$  ( $= -81^\circ\text{F}$ ), and the atmospheric pressure at the surface is only 1% that of the Earth. The low temperatures and pressures mean that it is hard for liquid water to currently exist on the surface of Mars. Was this always true? We will find that out today.

In this lab you will be examining a notebook of images of Mars made by recent space probes and looking for signs of water. You will also be making measurements of some valleys and channels on Mars to enable you to distinguish the different surface features left by small, slow flowing streams and large, rapid outflows. You will calculate the volumes of water required to carve these features, and consider how this volume compares with other bodies of water.

### 10.1 Water Flow Features on Mars

The first evidence that there was once water on Mars was revealed by the NASA spacecraft Mariner 9. Mariner 9 reached Mars in 1971, and after waiting-out a global dust storm that obscured the surface of Mars, started sending back images in December of that year. Since that time a flotilla of spacecraft have been investigating Mars, supplying insight into the history of water there.



Figure 10.1: A dendritic drainage pattern in Yemen (left), and an anastomosing drainage in Alaska (right).

### 10.1.1 Warrego Valles

The first place we are going to visit is called “Warrego Valles”, where the “Valles” part of its name indicates valleys (or canyons). The singular of Valles is Vallis. The location of Warrego is indicated by the red dot on the map of Mars that is the first image (“Image #1”) in the three ring binder.

*The following set of questions refer to the images of Warrego Valles. Image #2 is a wide view of the region, while Image #3 is a close-up.*

1. By looking at the morphology, or shape, of the valley, geologists can tell how the valley was formed. Does this valley system have a dendritic pattern (like the veins in a leaf) or an anastomosing pattern (like an intertwined rope)? See Figure 10.1. **(1 point)**
2. Overlay a transparency film onto the **close-up** image. Trace the valley pattern onto the transparency. How does a valley like this form? Do you think it formed slowly over time, or quickly from a localized water source? Why? **(3 points)**

3. Now, on the wide-field view, trace the boundary between the uplands and plains on your close-up overlay (the transparency sheet) and label the Uplands and the Plains. Is Warrego located in the uplands or on the plains? **(2 points)**
  
4. Which terrain is older? Recall that we can use crater counting to help determine the age of a surface, so let's do some crater counting. *Overlay the transparency sheet on the wide-view image.* Pick out two square regions on the wide view image (#2), each  $5\text{ cm} \times 5\text{ cm}$ . One region should cover the smooth plains ("Icaria Planum") and the other should cover the upland region. Draw these two squares on the transparency sheet. Count all the impact craters greater than 1 millimeter in diameter within each of the two squares you have outlined. Write these numbers below, with identifications. Which region is older? What does this exercise tell you about when approximately (or relatively) Warrego formed? **(5 points)**
  
5. To figure out how much water was required to form this valley, we first need to estimate its volume. The volume of a rectangular solid (like a shoebox) is equal to  $\ell \times w \times h$ , where  $\ell$  is the length of the box,  $h$  is the height of the box, and  $w$  is the width. We will approximate the shape of the valley as one long shoebox and focus only on the main valley system. *Use the close-up image for this purpose.*  
 First, we need to add up the total length of all the branches of the valley. Note that in the close-up image there are two well-defined valley systems. A more compact one near the right edge, and the bigger one to the left of that. Let's concentrate on the bigger one that is closer to the middle of the image. Measure the length, in millimeters, of each branch and the main trunk. Be careful not to count the same length twice. Sometimes it is hard to tell where each branch ends. You need to use your own judgment and be consistent in the way you measure each branch. Now add up all your measurements and convert the sum to kilometers. In this image  $1\text{ mm} = 0.5\text{ km}$ . What is the total length  $\ell$  of the valley system in kilometers? Show your work. **(3 points)**

6. Second, we need to find the average width of the valley. Carefully measure the width of the valley (in millimeters) in several places. What is the average width? Convert this to kilometers. Show your work. **(2 points)**
  
7. Finally, we need to know the depth. It is hard to measure depths from photographs, so we will make an estimate. From other evidence that we will not discuss here, the depth of typical Martian valleys is about 200 meters. Convert this to kilometers. **(1 point)**
  
8. Now find the total valley volume in  $\text{km}^3$ , using the relation  $V = \ell \times w \times h$ . This is the amount of sediment and rocks that was removed by water erosion to form this valley. We do not know for sure how much water was required to remove each cubic kilometer, but we can guess. Let's assume that  $100 \text{ km}^3$  of water was required to erode  $1 \text{ km}^3$  of Mars. How much water was required to form Warrego Valles? Show your work. **(5 points)**

Image #4 is a recent image of one small “tributary” of the large valley network you have just measured (it is the leftmost branch that drains into the big valley system you explored). In this image the scientists have made identifications of a number of features that are much



too small to see in image #3. Note that these researchers traced the valley network for this tributary and note where dust has filled-in some of the valley, or where “faults”, cracks in the crust of the planet (orange line segments), have occurred. In addition, in the drawing on the right the dashed circles locate very old craters that have been eroded away. Using all of this information, you can begin to make good estimates of the age, and the sequences of events. Near the bottom they note a “crater with lobate ejecta that postdates valleys.” This crater, which is about 2 km in diameter, was created by a meteorite impact that occurred after the valley formed. *By doing this all along all of the tributaries of the Warrego Valles* the age of this feature can be estimated. Ansan & Mangold (2005) conclude that the Warrego valley network began forming 3.5 billion years ago, from a period of rain and snow that may have lasted for 500 million years.

**Clean-off transparency for the next section!**

### 10.1.2 Ares and Tiu Valles

We now move to a morphologically different site, the Ares and Tiu Valles. These valleys are found near the equator of Mars, in the “Margaritifer Terra”. This region can be found in the upper right quadrant of image #5 and is outlined in red. Note that the famous “Valles Marineris”, the “grand canyon” of Mars (which dwarfs our Grand Canyon), is connected to the Margaritifer Terra by a broad, complicated canyon. In the close up, image #6, the two valleys are identified (ignore the numbered white boxes, as they are part of a scientific study of this region). In this false-color image, elevation is indicated where the highest features are in white and brown, and the lowest features are pale green.

*The next set of questions refer to Ares and Tiu Valles. On the wide scale image, the spot where the Mars Pathfinder spacecraft landed is indicated. Can you guess why that particular spot was chosen?*

9. First, which way did the water flow that carved the Ares and Tiu Valles? Did water flow south-to-north, or north-to-south? How did you decide this? [Note that the latitude is indicated on the right hand side of image #6.] **(2 points)**
  
10. In our first close-up image (#7), there are two “teardrop islands”. These two features can be found close to the “1” in the Pathfinder landing site label in image #6. There are other features with the same shape elsewhere in the channel. In image #8, we provide a wide field view of the “flood plains” of Tiu and Ares centered on the two teardrop islands of image #7. *Lay the transparency on this image and make a sketch of the pattern of these channels. Now add arrows to show the path and direction*

**the flowing water took.** Look at the pattern of these channels. Are they dendritic or anastomosing? **(3 points)**

11. Now we want to get an idea of the volume of water required to form Ares Valles. Measure the length of the channel from the top end of the biggest “island” above the Pathfinder landing site (note there are two islands here, a smaller one with a deep crater, and a bigger one with a shallow crater. We want you to measure the channel that goes by this smaller island on the right side and to the left of the big island, and the channel that goes around the bigger island on the right to where they both join-up again at the top of this big island) to the bottom right corner of the image. In this image, 1 mm = 10 km. What is the total length of these channels? Show your work **(3 points)**
  
12. Measure the channel width in several places and find the average width. On average, how wide is the channel in km? Show your work **(2 points)**
  
13. The average depth is about 200 m. How much is that in km? **(1 point)**
  
14. Now multiply your answers (in units of km) to **find the volume of the channel in  $\text{km}^3$** . Use the same ratio of water volume to channel volume that we used in Question 3 to find the volume of water required to form the channel. Lake Michigan holds 5,000  $\text{km}^3$  of water, how does it compare to what you just calculated? Show your work. **(4**

points)

15. Obviously, the Ares and Tiu Valles formed in a different fashion than Warrego. We now want to examine the feature named “Hydaspis Chaos” in image #6. This feature “drains into” the Tiu Vallis. In image #9, we present a wide view image of this feature. In image #10, we show a close up of a small part of Hydaspis. Why do you think such features were given the name “Chaos” regions? (**2 points**)
  
16. Scientists believe that Chaos regions are formed by the sudden release of large amounts of groundwater (or, perhaps, the sudden melting of ice underneath the surface), causing massive, and rapid flooding. Does such an idea make sense to you? Why? What evidence for this hypothesis is present in these images to support this idea? (**4 points**)
  
  
  
  
  
  
  
  
  
  
17. In image #11 is a picture taken at the time of the disembarkation of the little Pathfinder rover (named “Sojourner”) as it drove down the ramp from its lander. Is the surrounding terrain consistent with its location in the flood plain of Ares Vallis? Why/why not?

(3 points)

18. Recent research into the age of the Ares and Tiu Valles suggest that, while they began to form around 3.6 billion years ago (like Warrego), water still flowed in these channels as recently as 2.5 billion years ago. Thus, the flood plains of Ares and Tiu are much younger than Warrego. Do you agree with this assessment? How did you arrive at this conclusion? (4 points)
19. You have now studied Warrego and Ares Valles up close. **Compare and contrast the two different varieties of fluvial (water-carved) landforms in as many ways as you can think of (at least three!).** Do you think they formed the same way? How does the volume of water required to form Ares Valles compare to the volume of water required to form Warrego Valles? (5 points)

## 10.2 The Global Perspective

In image #12 is a topographic map of Mars that is color-coded to show the altitude of the surface features where blue is low, and white is very high. Note that the northern half of Mars is lower than the southern half, and the North pole is several km lower than the South pole. The Ares and Tiu Valles eventually drain into the region labeled “Chryse Planitia” (longitude 330°, latitude 25°).

20. If there was an abundance of water on Mars, what would the planet look like? How might we prove if this was feasible? For example, scientists estimate the age of the northern plains as being formed between 3.6 and 2.5 billion years ago. How does this number compare with the ages of the Ares and Tiu Valles? Could they be one source of water for this ocean? **(5 points)**

One way to test the hypothesis that the northern region of Mars was once covered by an ocean is to look for similarities to Earth. Over the history of Earth, oceans have covered large parts of the current land masses/continents (as one once covered much of New Mexico). Thus, there could be ancient shoreline features from past Earth oceans that we can compare to the proposed “shoreline” areas of Mars. In image #13 is a comparison of the Ebro river basin (in Spain) to various regions found on Mars that border the northern plains. The Ebro river basin shown in the upper left panel was once below sea level, and a river drained into an ancient ocean. The sediment laid down by the river eventually became sedimentary rock, and once the area was uplifted, the softer material eroded away, leaving ridges of rock that trace the ancient river bed. The other three panels show similar features on Mars.

If the northern part of Mars was covered by an ocean, where did the water go? It might have evaporated away into space, or it could still be present frozen below the surface. In 2006, NASA sent a spacecraft named Phoenix that landed above the “arctic circle” of Mars (at a latitude of 68° North). This lander had a shovel to dig below the surface as well as a laboratory to analyze the material that the shovel dug up. Image #14 shows a trench that Phoenix dug, showing sub-surface ice and how chunks of ice (in the trench shadow) evaporated (technically “sublimated”, ice changing directly into gas) over time. The slow sublimation meant this was water ice, not carbon dioxide ice. This was confirmed when

water was detected in the samples delivered to the onboard laboratory.

21. Given all of this evidence presented in the lab today, Mars certainly once had abundant surface water. We still do not know how much there was, how long it was present on the surface, or where it all went. But explain why discovery of large amounts of subsurface water ice might be important for astronauts that could one day visit Mars (**5 points**)

Name:\_\_\_\_\_

Date:\_\_\_\_\_

### 10.3 Take Home Exercise (35 points total)

Answer the following questions on a separate sheet of paper, and turn it in with the rest of your lab.

1. What happened to all of the water that carved these valley systems? We do not see any water on the surface of Mars when we look at present-day images of the planet, but if our interpretation of these features is correct, and your calculated water volumes are correct (which they probably are), then where has all of the water gone? Discuss two possible (probable?) fates that the water might have experienced. Think about discussions we have had in class about the atmospheres of the various planets and what their fates have been. Also think about how Earth compares to Mars and how the water abundances on the two planets now differ. **(20 points)**
2. Scientists believe that life (the first, primitive, single cell creatures) on Earth began about 1 billion years after its formation, or 3.5 billion years ago. Scientists also believe that liquid water is essential for life to exist. Looking at the ages and lifetimes of the Warrego, Ares and Tiu Valles, what do you think about the possibility that life started on the planet Mars at the same time as Earth? What must have Mars been like at that time? What would have happened to this life? **(15 points)**

### 10.4 Possible Quiz Questions

1. Is water an important erosion process on Mars?
2. What does “dendritic” mean?
3. What does “anastomosing” mean?

### **10.5 Extra Credit (ask your TA for permission before attempting, 5 points)**

In this lab you have found that dendritic and anastomosing “river” patterns are found on Mars, suggesting there was free flowing water at some time in Mars’ history. Use web-based resources to investigate our current ideas about the history of water on Mars. Then find images of both dendritic and anastomosing features on the Earth (include them in your report). Describe where on our planet those particular patterns were found, and what type of climate exists in that part of the world. What does this suggest about the formation of similar features on Mars?



Name: \_\_\_\_\_

Date: \_\_\_\_\_

## 11 Characterizing Exoplanets

### 11.1 Introduction

Exoplanets are a hot topic in astronomy right now. As of January, 2015, there were over 1500 known exoplanets with more than 3000 candidates waiting to be confirmed. These exoplanets and exoplanet systems are of great interest to astronomers as they provide information on planet formation and evolution, as well as the discovery of a variety of types of planets not found in our solar system. A small subset of these planetary systems are of interest for another reason: They may support life. In this lab you will analyze observations of exoplanets to fully characterize their nature. At the end, you will then compare your results with simulated images of these exoplanets to see how well you performed. Note that the capabilities required to intensely study exoplanets have not yet been built and launched into space. But we know enough about optics that we can envision a day when advanced space telescopes, like those needed for the conclusion of today's lab, will be in Earth orbit and will directly image these objects, as well as obtain spectra to search for the chemical signatures of life.

### 11.2 Types of Exoplanets

As you have learned in class this semester, our solar system has two main types of planets: Terrestrial (rocky) and Jovian (gaseous). Because these were the only planets we knew about, it was hard to envision what other kinds of planets might exist. Thus, when the first exoplanet was discovered, it was a shock for astronomers to find out that this object was a gas giant like Jupiter, but had an orbit that was even smaller than that of Mercury! This led to a new kind of planet called "Hot Jupiters". In the two decades since the discovery of that first exoplanet, several other new types of planets have been recognized. Currently there are six major classes that we list below. We expect that other types of planets will be discovered as our observational techniques improve.

#### 11.2.1 Gas Giants

Gas giants are planets similar to Jupiter, Saturn, Uranus, and Neptune. They are mostly composed of hydrogen and helium with possible rocky or icy cores. Gas giants have masses greater than 10 Earth masses. Roughly 25 percent of all discovered exoplanets are gas giants.

#### 11.2.2 Hot Jupiters

Hot Jupiters are gas giants that either formed very close to their host star or formed farther out and "migrated" inward. If there are multiple planets orbiting a star, they can interact through their gravity. This means that planets can exchange energy, causing their orbits to expand or to shrink. Astronomers call this process migration, and we believe it happened

early in the history of our own solar system. Hot Jupiters are found within 0.05-0.5 AU of their host star (remember that the Earth is at 1 AU!). As such, they are extremely hot (with temperatures as high as 2400 K), and are the most common type of exoplanet found; about 50 percent of all discovered exoplanets are Hot Jupiters. This is due to the fact that the easiest exoplanets to detect are those that are close to their host star and very large. Hot Jupiters are both.

### **11.2.3 Water Worlds**

Water worlds are exoplanets that are completely covered in water. Simulations suggest that these planets actually formed from debris rich in ice further from their host star. As they migrated inward, the water melted and covered the planet in a giant ocean.

### **11.2.4 Exo-Earths**

Exo-Earths are planets just like the Earth. They have a similar mass, radius, and temperature to the Earth, orbiting within the “habitable zone” of their host stars. Only a very small number of Exo-Earth candidates have been discovered as they are the hardest type of planet to discover.

### **11.2.5 Super-Earths**

Super-Earths are potentially rocky planets that have a mass greater than the Earth, but no more than 10 times the mass of the Earth. “Super” only refers to the mass of the planet and has nothing to do with anything else. Therefore, some Super Earths may actually be gas planets similar to (slightly) smaller versions of Uranus or Neptune.

### **11.2.6 Chthonian Planets**

“Chthonian” is from the Greek meaning “of the Earth.” Chthonian Planets are exoplanets that used to be gas giants but migrated so close to their host star that their atmosphere was stripped away leaving only a rocky core. Due to their similarities, some Super Earths may actually be Chthonian Planets.

## **11.3 Detection Methods**

There are several methods used to detect exoplanets. The most useful ones are listed below.

### **11.3.1 Transit Method/Light Curves**

The transit method attempts to detect the “eclipse” of a star by a planet that is orbiting it. Because planets are tiny compared to their host stars, these eclipses are very small, requiring extremely precise measurements. This is best done from space, where observations can be made continuously, as there is no night or day, or clouds to get in the way. This is the detection method used by the *Kepler* Space Telescope. *Kepler* stared at a particular patch of sky and observed over a hundred thousand stars continuously for more than four years.

It measured the amount light coming from each star. It did this over and over, making a new measurement every 30 minutes. Why? If we were looking back at the Sun and wanted to detect the Earth, we would only see one transit per year! Thus, you have to continuously stare at the star to insure you do not miss this event (as you need at least three of these events to determine that the exoplanet is real, and to measure its orbital period). The end result is something called a “light curve”, a graph of the brightness of a star over time. The entire process is diagrammed in Figure 11.2. We will be exclusively using this method in lab today.

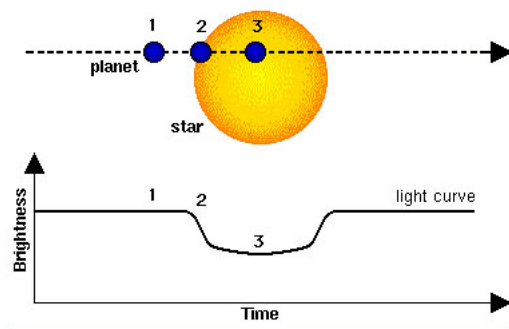


Figure 11.2: The diagram of an exoplanet transit. The planet, small, dark circle, crosses in front of the star as seen from Earth. In the process, it blocks out some light. The light curve, shown on the bottom, is a plot of brightness versus time, and shows that the star brightness is steady until the exoplanet starts to cover up some of the visible surface of the star. As it does so, the star dims. It eventually returns back to its normal brightness only to await the next transit.

In Figure 11.2, there is a dip in the light curve, signifying that an object passed between the star and our line of sight. If, however, *Kepler* continues to observe that star and sees the same sized dip in the light curve on a periodic basis, then it has probably detected an exoplanet (we say “probably” because a few other conditions must be met for it to be a confirmed exoplanet). The amount of star light removed by the planet is very small, as all planets are much, much smaller than their host stars (for example, the radius of Jupiter is 11 times that of the Earth, but it is only 10% the radius of the Sun, *or 1% of the area = how much the light dims*). Therefore, it is much easier to detect planets that are larger because they block more of the light from the star. It is also easier to detect planets that are close to their host star because they orbit quickly so *Kepler* could observe several dips in the light curve each year.

### 11.3.2 Direct Detection

Direct detection is exactly what it sounds like. This is the method of imaging (taking a picture) of the planets around another star. But we cannot simply point a telescope at a star and take a picture because the star is anywhere from 100 million ( $10^8$ ) to 100 billion ( $10^{11}$ )

times brighter than its exoplanets. In order to combat the overwhelming brightness of a star, astronomers use what is called a “coronagraph” to block the light from the star in order to see the planets around it. You may have already seen images made with a coronagraph to see the “corona” of the Sun in the Sun lab.

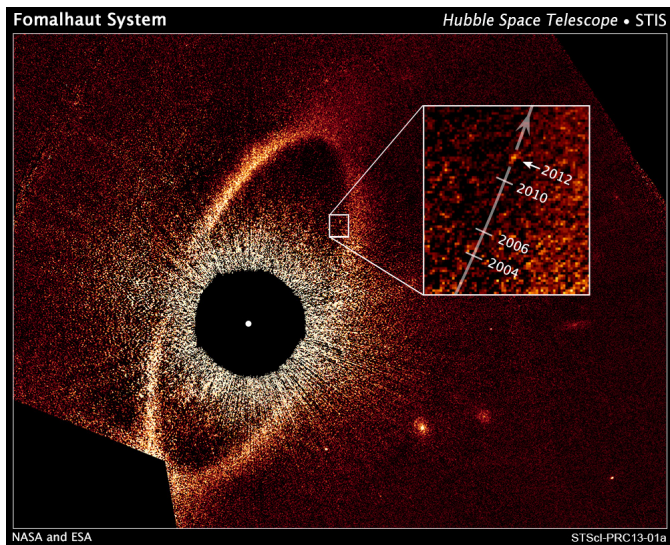


Figure 11.3: A coronagraphic image of an exoplanet orbiting the star Fomalhaut (inside the box, with the arrow labeled “2012”). This image was obtained with the Hubble Space Telescope, and the star’s light has been blocked-out using a small metal disk. Fomalhaut is also surrounded by a dusty disk of material—the broad band of light that makes a complete circle around the star. This band of dusty material is about the same size as the Kuiper belt in our solar system. The planet, “Fomalhaut B”, is estimated to take 1,700 years to orbit once around the star. Thus, using Kepler’s third law ( $P^2 \propto a^3$ ), it is roughly about 140 AU from Fomalhaut (remember that Pluto orbits at 39.5 AU from the Sun).

So if astronomers can block the light from the Sun to see its corona, they should be able to block the light from distant stars to see the exoplanets right? While this is true, directly seeing exoplanets is difficult. There are two problems: the exoplanet only shines by reflected light, and it is located very, very close to its host star. Thus, it takes highly specialized techniques to directly image exoplanets. However, for some of the closest stars this can be done. An example of direct exoplanet detection is shown in Figure 11.3. A new generation of space-based telescopes that will allow us to do this for many more stars is planned. Eventually, we should be able to take both spectra (to determine their composition) and direct images of the planets themselves. We will pretend that we can obtain good images of exoplanets later in lab today.

### 11.3.3 Radial Velocity (Stellar Wobble)

The radial velocity or “stellar wobble” method involves measuring the Doppler shift of the light from a particular star and seeing if the lines in its spectrum oscillate periodically

between a red and blue shift. As a planet orbits its star, the planet pulls on the star gravitationally just as the star pulls on the planet. Thus, as the planet goes around and around, it slightly tugs on the star and makes it wobble, causing a back and forth shift in its radial velocity, the motion we see towards and away from us. Therefore, if astronomers see a star wobbling back and forth on a repeating, periodic timescale, then the star has at least one planet orbiting around it. The size of the wobble allows astronomers to calculate the mass of the exoplanet.

## 11.4 Characterizing Exoplanets from Transit Light Curves

Quite a bit of information about an exoplanet can be gleaned from its transit light curve. Figure 11.4 shows how a little bit of math (from Kepler's laws), and a few measurements, can tell us much about a transiting exoplanet.

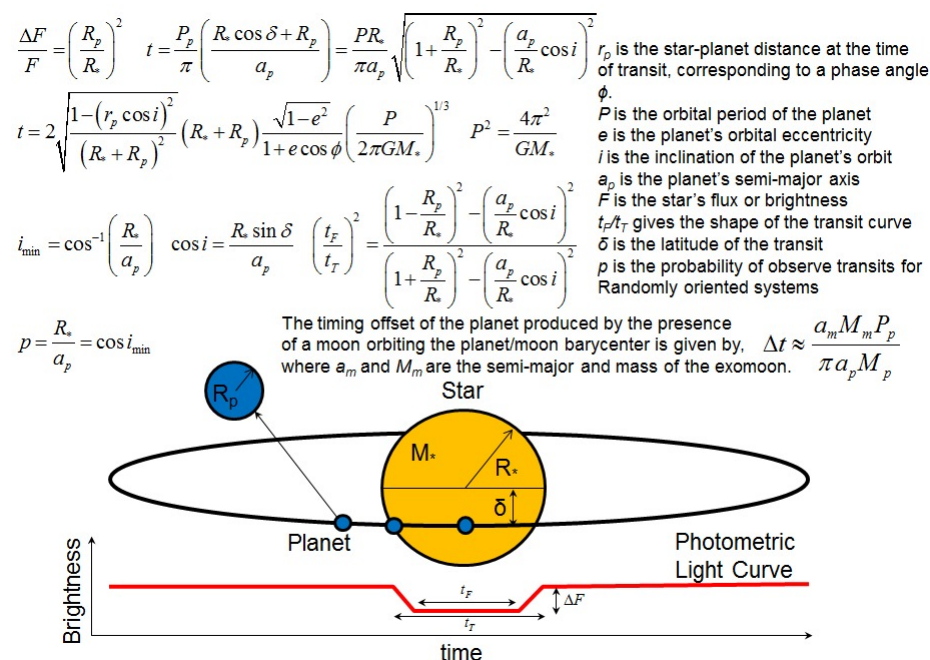


Figure 11.4: An exoplanet transit light curve (bottom) can provide a useful amount of information. The most important attribute is the radius of the exoplanet. But if you know the mass and radius of the exoplanet host star, you can determine other details about the exoplanet's orbit. As the figure suggests, by observing multiple transits of an exoplanet, you can actually determine whether it has a moon! This is because the exoplanet and its moon orbit around the center of mass of the system ("barycenter"), and thus the planet appears to wobble back and forth relative to the host star.

The equations shown in Figure 11.4 are complicated by the fact that exoplanets do not orbit their host stars in perfect circles, and that the transit is never exactly centered. Today we are going to only study planets that have circular orbits, and whose orbital plane is edge-

on. Thus, all of the terms with “ $\cos i$ ” (“ $i$ ” is the inclination of the orbit to our sight line, and  $i = 0^\circ$  for edge on),  $\cos \delta$  or  $\sin \delta$  ( $\delta$  is the transit latitude, here  $\delta = 90^\circ$ ), and “ $e$ ” (which is the eccentricity, the same orbital parameter you have heard about in class for our solar system planets, or in the orbit of Mercury lab, for circular orbits  $e = 1.0$ ) are equal to “1” or “0”.

First, let’s remember Kepler’s third law  $P^2 \propto a^3$ , where  $P$  is the orbital period, and  $a$  is the semi-major axis. For Earth, we have  $P = 1$  yr,  $a = 1$  AU. By taking ratios, you can figure out the orbital periods and semi-major axes of other planets in *our* solar system. Here we cannot do that, and we need to use Isaac Newton’s reformulation of Kepler’s third law:

$$P^2 = \frac{4\pi^2 a^3}{G(M_{star} + M_{planet})} \quad (1)$$

“ $G$ ” in this equation is the gravitational constant ( $G = 6.67 \times 10^{-11}$  Newton-m<sup>2</sup>/kg<sup>2</sup>), and  $\pi = 3.14$ .

We also have to estimate the size of the planet. As detailed in Fig. 11.4, the depth of the “eclipse” gives us the ratio of the radius of the planet to that of the star:

$$\frac{\Delta F}{F} = \left( \frac{R_{planet}}{R_{star}} \right)^2 \quad (2)$$

Now we have everything we need to use transits to characterize exoplanets. We will have to re-arrange equations 1 and 2 so as to extract unknown parameters where the other variables are known from measurements.

## 11.5 Deriving Parameters from Transit Light Curves

The orbital period of the exoplanet is the easiest parameter to measure. In Figure 11.5 is the light curve of “Kepler 1b”, the first of the exoplanets examined by the *Kepler* mission. Kepler 1b is a Hot Jupiter, so it has a deep transit. You can see from the figure that transits recur every 2.5 days. That is the orbital period of the planet. It is very easy to figure out orbital periods, so we will not be doing that in this lab today.

In the following eight figures are the light curves of eight different transiting exoplanets. Today you will be using these light curves to determine the properties of transiting exoplanets. To help you through this complicated process, the data for exoplanet #8 will be worked out at each step below. You will do the same process for one of the other seven transiting exoplanets. Your TA might assign one to you, or you will be left to choose one. Towards the end of today’s exercise your group will classify both of these exoplanets. Each panel lists the orbital period of the exoplanets (“xxx day orbit”), ranging from 3.89 days for exoplanet #3, to 3.48 years for exoplanet #2. You should be able to guess what that means already: one is close to its host star, the other far away. The other information contained in these figures is a measurement of “t”, the total time of the transit (“eclipse takes xxx hours”). When working with the equations below, all time units must be in seconds! Remember, 3600 seconds per hour, 24 hours per day, 365 days per year (there are  $3.15 \times 10^7$  seconds per year).

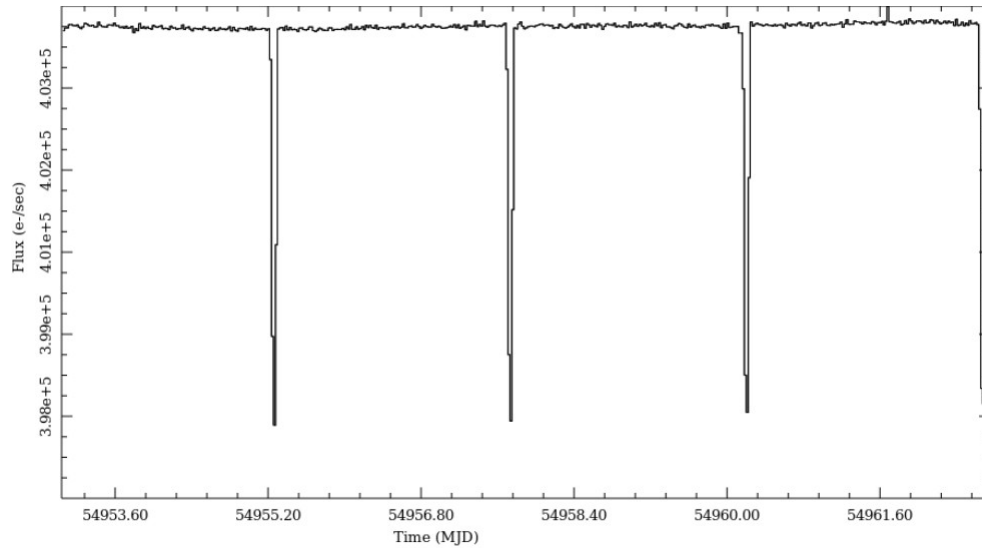


Figure 11.5: The light curve of Kepler 1b as measured by the *Kepler* satellite. The numbers on the y-axis are the total counts (how much light was measured), while the x-axis is “modified Julian days”. This is a system that simply makes it easy to figure out periods of astronomical events since it is a number that increases by 1 every day (instead of figuring out how many days there were between June 6<sup>th</sup> and November 3<sup>rd</sup>). Thus, to get an orbital period you just subtract the MJD of one event from the MJD of the next event.

### Exercise #1:

1. The first quantity we need to calculate is the size of the planet with respect to the host star. How do we do that? Go back to Figure 11.4. We need to measure “ $\Delta F/F$ ”. The data points in the exoplanet light curves have been fit with a transit model (the solid line fit to the data points) to make it easy to measure the *minimum*. For both of the transits, take a ruler and determine the value on the y axis by drawing a line across the model fit to the light curve minimum. Estimate this number as precisely as possible, then subtract this number from 1, and you get  $\Delta F/F$ . (**2 points**)

$$\Delta F/F \text{ for transit \# } \underline{\hspace{2cm}} = \underline{\hspace{2cm}}$$

$$\Delta F/F \text{ for transit \#8} = \underline{\hspace{2cm}} 0.00153$$

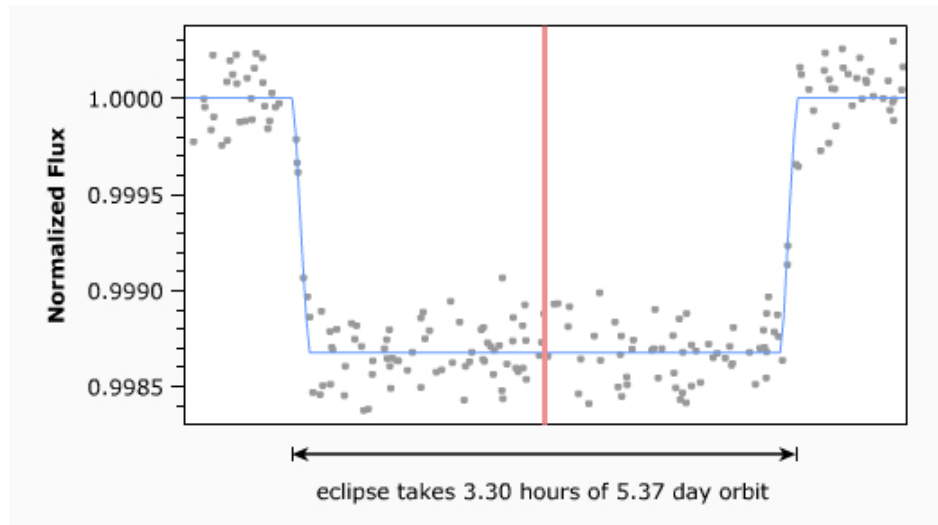


Figure 11.6: Transiting exoplanet #1. The vertical line in the center of the plot simply identifies the center of the eclipse.

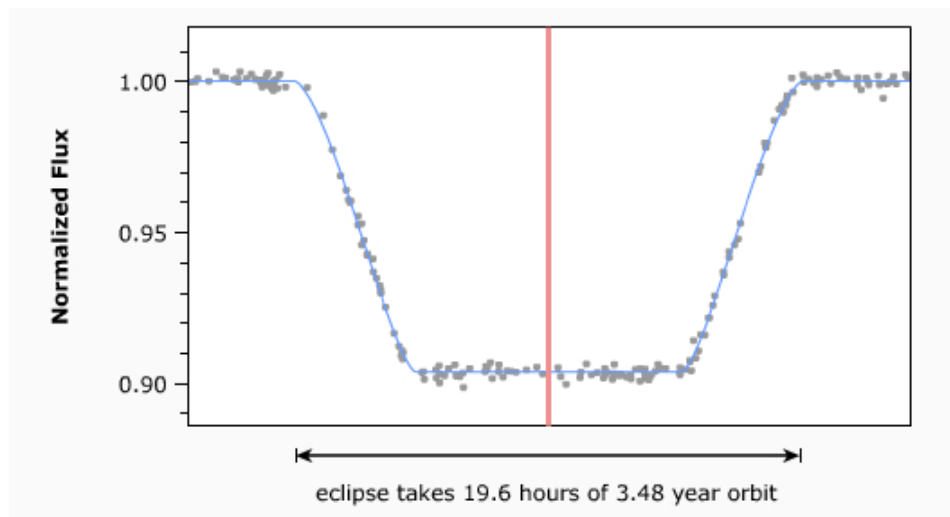


Figure 11.7: Transiting exoplanet #2.



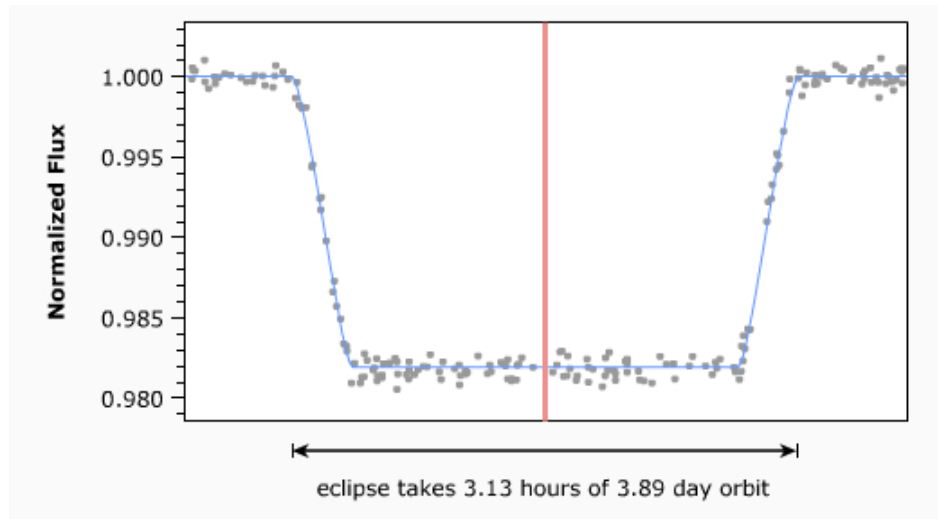


Figure 11.8: Transiting exoplanet #3.

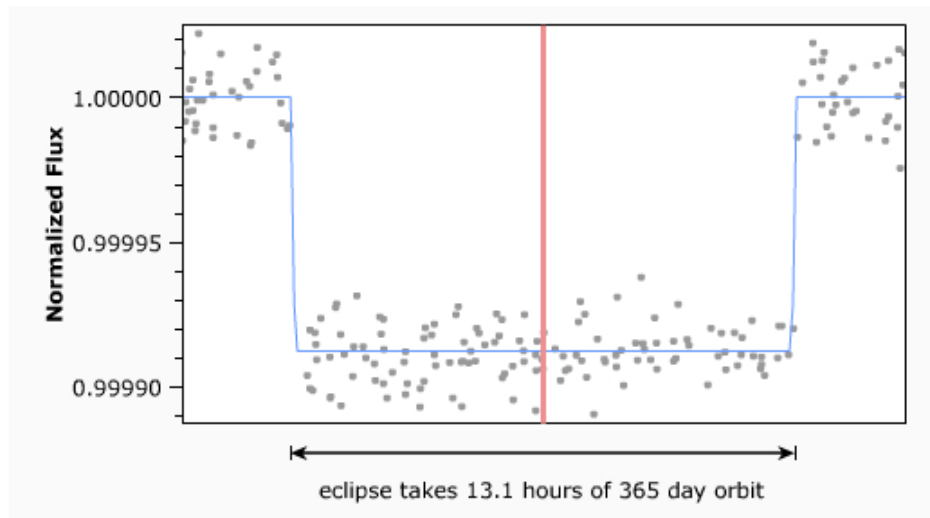


Figure 11.9: Transiting exoplanet #4.

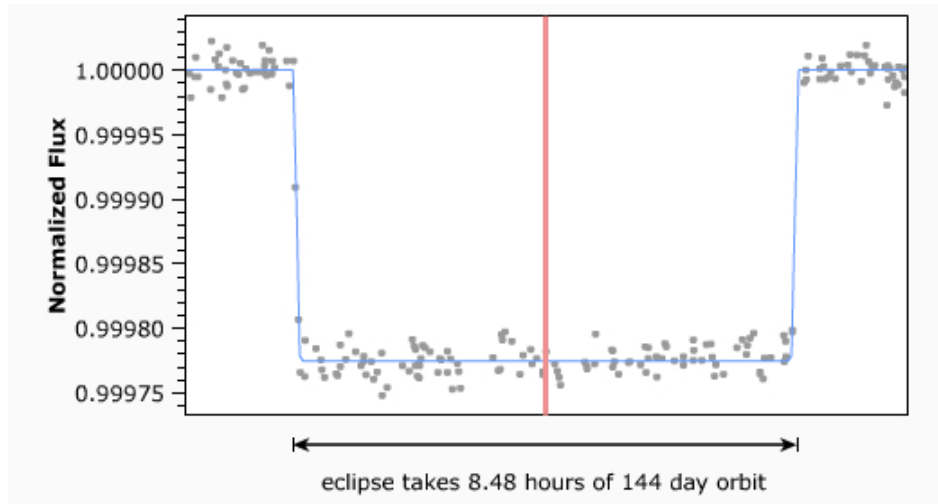


Figure 11.10: Transiting exoplanet #5.

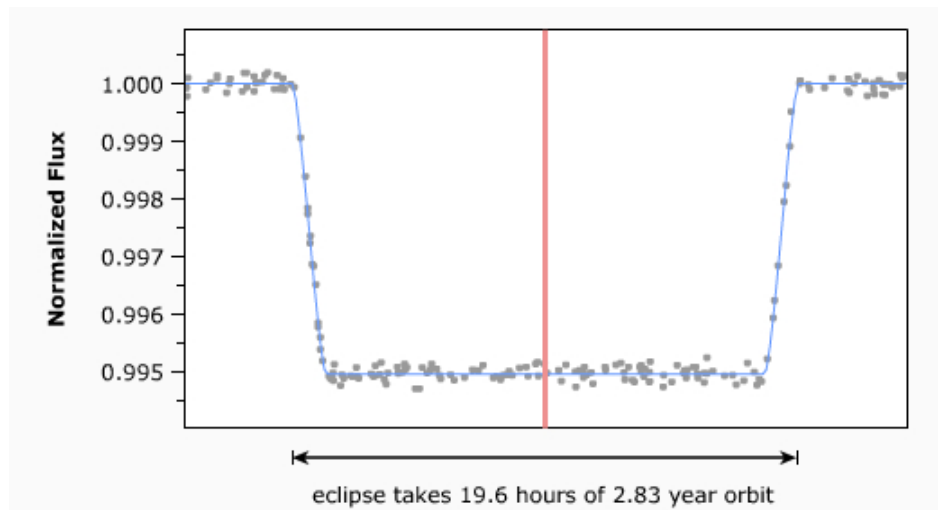


Figure 11.11: Transiting exoplanet #6.

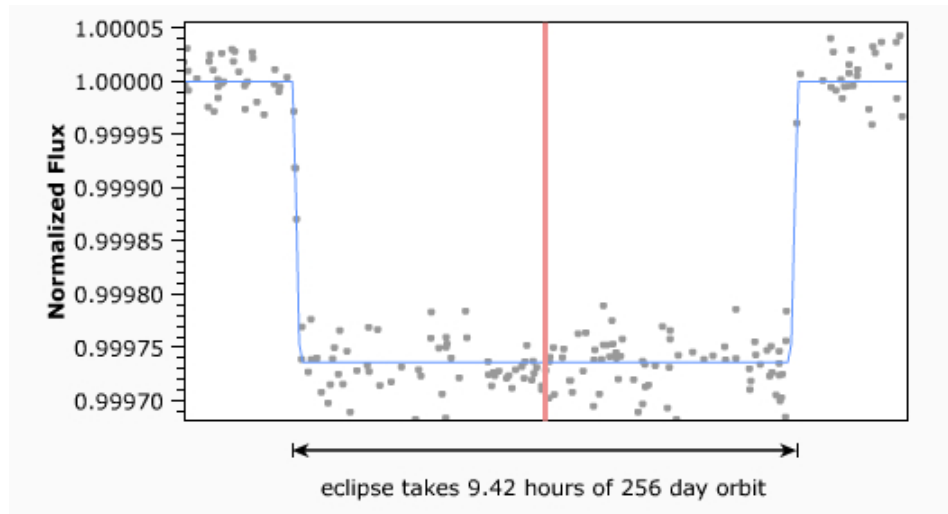


Figure 11.12: Transiting exoplanet #7.

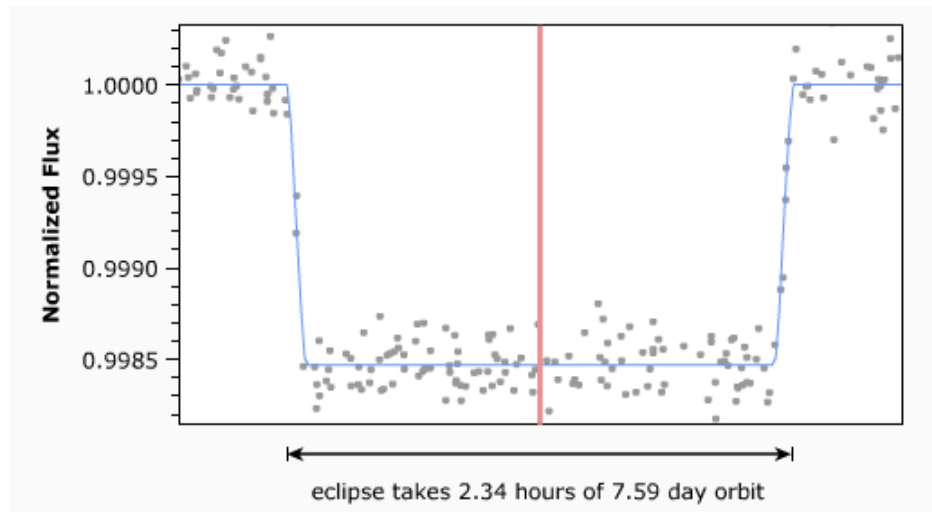


Figure 11.13: Transiting exoplanet #8.

Going back to equation #2, we have:

$$\frac{\Delta F}{F} = \left( \frac{R_{planet}}{R_{star}} \right)^2 \quad \text{or} \quad R_{planet} = \left( \frac{\Delta F}{F} \right)^{1/2} (\times R_{star})$$

2. Taking the square roots of the  $\Delta F/F$  from above, fill in the following blanks (**4 points**):

$$R_{planet} \text{ for transit \# } \underline{\hspace{2cm}} = \underline{\hspace{2cm}} (\times R_{star})$$

$$R_{planet} \text{ for transit } \underline{\hspace{2cm}} \text{ \#8 } = \underline{\hspace{2cm}} 0.0391 (\times R_{star})$$

You just calculated the relative sizes of the planets to their host stars. To turn these into real numbers, we have to know the sizes of the host stars. Astronomers can figure out the masses, radii, temperatures and luminosities of stars by combining several techniques (photometry, parallax, spectroscopy, and interferometry). Note that stars can have dramatically different values for their masses, radii, temperatures and luminosities, and these directly effect the parameters derived for their exoplanets. The data for the eight exoplanet host stars are listed in Table 11.1. The values for our Sun are  $M_{\odot} = 2 \times 10^{30}$  kg,  $R_{\odot} = 7 \times 10^8$  m,  $L_{\odot} = 4 \times 10^{26}$  Watts.

Table 11.1: Exoplanet Host Star Data

Object	Mass (kg)	Radius (meters)	Temperature (K)	Luminosity (Watts)
#1	$2.0 \times 10^{30}$	$7.00 \times 10^8$	5800	$4.0 \times 10^{26}$
#2	$1.3 \times 10^{30}$	$4.97 \times 10^8$	4430	$2.8 \times 10^{25}$
#3	$2.2 \times 10^{30}$	$7.56 \times 10^8$	6160	$1.2 \times 10^{27}$
#4	$2.0 \times 10^{30}$	$7.00 \times 10^8$	5800	$4.0 \times 10^{26}$
#5	$1.6 \times 10^{30}$	$5.88 \times 10^8$	5050	$2.4 \times 10^{26}$
#6	$2.0 \times 10^{30}$	$7.00 \times 10^8$	5800	$4.0 \times 10^{26}$
#7	$1.4 \times 10^{30}$	$5.25 \times 10^8$	4640	$4.8 \times 10^{25}$
#8	$1.0 \times 10^{30}$	$3.99 \times 10^8$	3760	$4.0 \times 10^{24}$

3. Now that you calculated the radius of the exoplanet with respect to the host star radius, use the data in Table 11.1 to convert the radii of your planet into meters, and put this value in the correct row and column in Table 11.2. (**5 points**)
4. Astronomer Judy, and her graduate student Bob, used the spectrograph on the Keck telescope in Hawaii to measure the masses of your planets using the radial velocity technique mentioned above. So we have entered their values for the masses for all of the exoplanets in Table 11.2. You need to calculate the density of your exoplanet and enter it in the correct places in Table 11.2. Remember that density = mass/volume,

Table 11.2: Exoplanet Data

Object	Radius (m)	Semi-major axis (m)	Mass (kg)	Density (kg/m <sup>3</sup> )	Temperature (K)
#1			$1.9 \times 10^{26}$		
#2			$1.9 \times 10^{28}$		
#3			$5.7 \times 10^{27}$		
#4			$6.0 \times 10^{24}$		
#5			$1.5 \times 10^{25}$		
#6			$8.0 \times 10^{26}$		
#7			$4.0 \times 10^{24}$		
#8	$1.6 \times 10^7$	$9.0 \times 10^9$	$5.5 \times 10^{25}$	3205	555

and the volume of all of the planets is  $V = 4\pi R^3/3$ , as we know that they all must be spherical. **(5 points)**

5. By calculating the density, you already know something about your planets. Remember that the density of Jupiter is  $1326 \text{ kg/m}^3$  and the density of the Earth is  $5514 \text{ kg/m}^3$ . If you did the Density lab this semester, we used the units of  $\text{gm/cm}^3$ , where water has a density of  $1.00 \text{ gm/cm}^3$ . This is the “cgs” system of units. To get from  $\text{kg/m}^3$  to  $\text{gm/cm}^3$ , you simply divide by 1000. Describe how the densities of your two exoplanets compare with the Earth and/or Jupiter. **(5 points)**

The next parameter we want to calculate is the semi-major axis “ $a$ ”. While we now know the size and densities of our planets, we do not know how hot or cold they are. We need to figure out how far away they are from their host stars. To do this we re-arrange equation #1, and we get this:

$$a = \left( \frac{P^2 G (M_{\text{star}} + M_{\text{planet}})}{4\pi^2} \right)^{1/3} = (1.69 \times 10^{-12} P^2 M_{\text{star}})^{1/3}$$

6. You must use seconds for  $P$ , and kg for the mass of the star (note: you can ignore the mass of the planet since it will be very small compared to the star). We have simplified the equation by bundling  $G$  and  $4\pi^2$  into a single constant. Note that you have to take the cube root of the quantity inside the parentheses. We write the cube root as an exponent of “ $1/3$ ”. Ask your TA for help on this step. Fill in the column for semi-major axis in Table 11.2 for your exoplanet. **(5 points)**

## 11.6 The Habitable Zone

The habitable zone is the region around a star in which the conditions are just right for a planet to have liquid water on its surface. Here on Earth, all life must have access to liquid water to survive. Therefore, a planet is considered “habitable” if it has liquid water. This zone is also colloquially known as the “Goldilocks Zone”.

To figure out the temperature of a planet is actually harder than you might think. We know how much energy the exoplanet host stars emit, as that is what we call their luminosities. We also know how far away your exoplanets are from this energy source (the semi-major axis). The formula to estimate the “equilibrium temperature” of an exoplanet with a semi-major axis of  $a$  around a host star with known parameters is:

$$T_{planet} = T_{star}(1.0 - A)^{1/4} \left( \frac{R_{star}}{2a} \right)^{1/2} \quad (3)$$

The “A” in this equation is the “Albedo,” how much of the energy intercepted by a planet is reflected back into space. Equation #3 is not too hard to derive, but we do not have enough time to explain how it arises. You can ask your professor, or search Wikipedia using the term “Planetary equilibrium temperature” to find out where this comes from. The big problem with using this equation is that different atmospheres create different effects. For example, Venus reflects 67% of the visible light from the Sun, yet is very hot. The Earth reflects 39% of the visible light from the Sun and has a comfortable climate. It is how the atmosphere “traps heat” that helps determine the surface temperature. Alternatively, a planet might not even have an atmosphere and could be bright or dark with no heat trapping (for example, the Albedo of the moon is 0.11, as dark as asphalt, and the surface is boiling hot during the day, and extremely cold at night).

Let’s demonstrate the problem using the Earth. If we use the value of  $A = 0.39$  for Earth, equation #3 would predict a temperature of  $T_{Earth} = 247$  K. But the mean temperature on the Earth is actually  $T_{Earth} = 277$  K. Thus, the atmosphere on Earth keeps it warmer than the equilibrium temperature. This is true for just about any planet with a significant atmosphere. To account for this effect, let’s go backwards and solve for “A”. With  $R_{\odot} = 7.0 \times 10^8$  m,  $a = 1.50 \times 10^{11}$  m,  $T_{Earth} = 277$  K, and  $T_{\odot} = 5800$  K, we find that  $A = 0.05$ . Thus, the Earth’s atmosphere makes it seem like we absorb 95% of the energy from the Sun. We will presume this is true for all of our planets.

If we assume  $A = 0.05$ , equation #3 simplifies to:

$$T_{planet} = 0.70 \left( \frac{R_{star}}{a} \right)^{1/2} T_{star} \quad (4)$$

[To understand what we did here, note that  $(1.0 - A) = 0.95$ . The fourth root of  $0.95 = 0.95^{1/4} = 0.99$  (remember the fourth root is two successive square roots:  $\sqrt{0.95} = 0.95^{1/2} = 0.97$ , and  $0.97^{1/2} = 0.99$ ). We then divided  $0.99$  by  $\sqrt{2}$  ( $= 1.41$ ) to have a single constant out front.]

7. Calculate the temperature of your exoplanet using equation #4 and enter it into Table 11.2. (5 points)

As we said, the habitable zone is the region around a star of a particular luminosity where water might exist in a liquid form somewhere on a planet orbiting that star. The Earth ( $a = 1$  AU) sits in the habitable zone for the Sun, while Venus is too close to the Sun ( $a = 0.67$  AU) to be inside the habitable zone, while Mars ( $a = 1.52$  AU) is near the outer edge. As we just demonstrated, the atmosphere of a planet can radically change the location of the habitable zone. Mars has a very thin atmosphere, so it is very cold there and all of its water is frozen. If Mars had the thick atmosphere of Venus, it would probably have abundant liquid water on its surface. As we noted, the mean temperature of Earth is 277 K, but the polar regions have average temperatures well below freezing ( $32^{\circ}\text{F} = 273$  K) with an average annual temperature at the North pole of 263 K, and 228 K at the South pole. The equatorial regions of Earth meanwhile have average temperatures of 300 K. So for just about every planet there will be wide ranges in surface temperature, and liquid water could exist somewhere on that planet.

8. Given that your temperature estimates are not very precise, we will consider your planet to be in the habitable zone if its temperature is between 200K and 350 K. Is either of your planets in the habitable zone? (**4 points**)

## 11.7 Classifying Your Exoplanets

At the beginning of today's lab we described the several types of exoplanet classes that currently exist. We now want you to classify your exoplanet into one of these types. To help you decide, in Table 11.3 we list the parameters of the planets in our solar system. After you have classified them, you will ask your TA to see "images" of your exoplanets to check to see how well your classifications turned out.

9. Compare the radii, the semi-major axes, the masses, densities and temperatures you found for your two exoplanets to the values found in our solar system. For example, if the radius of one of your exoplanets was  $8 \times 10^7$ , and its mass was  $2.5 \times 10^{27}$  it is similar in "size" to Jupiter. But it could have a higher or lower density, depending on composition, and it might be hotter than Mercury, or colder than Mars. Fully describe your two exoplanets. (**10 points**)



Table 11.3: Solar System Data

Object	Radius (m)	Semi-major axis (m)	Mass (kg)	Density (kg/m <sup>3</sup> )	Temperature (K)
Mercury	$2.44 \times 10^6$	$5.79 \times 10^{10}$	$3.3 \times 10^{23}$	5427	445
Venus	$6.05 \times 10^6$	$1.08 \times 10^{11}$	$4.9 \times 10^{24}$	5243	737
Earth	$6.37 \times 10^6$	$1.49 \times 10^{11}$	$5.9 \times 10^{24}$	5514	277
Mars	$3.39 \times 10^6$	$2.28 \times 10^{11}$	$6.4 \times 10^{23}$	3933	210
Jupiter	$6.99 \times 10^7$	$7.78 \times 10^{11}$	$1.9 \times 10^{27}$	1326	122
Saturn	$6.03 \times 10^7$	$1.43 \times 10^{12}$	$5.7 \times 10^{26}$	687	90
Uranus	$2.54 \times 10^7$	$2.87 \times 10^{12}$	$8.7 \times 10^{25}$	1270	63
Neptune	$2.46 \times 10^7$	$4.50 \times 10^{12}$	$1.0 \times 10^{26}$	1638	50
Pluto	$1.18 \times 10^6$	$5.87 \times 10^{12}$	$1.3 \times 10^{22}$	2030	43

As Table 11.3 shows you, there are two main kinds of planets in our solar system: the rocky Terrestrial planets with relatively thin atmospheres, and the Jovian planets, which are gas giants. Planets with high densities ( $> 3000 \text{ kg/m}^3$ ) are probably like the Terrestrial planets. Planets with low densities ( $< 3000 \text{ kg/m}^3$ ) are probably mostly gaseous or have large amounts of water (Pluto has a large fraction of its mass in water ice).

- Given your discussion from the previous question, and the discussion of the types of exoplanets in the introduction, classify your two exoplanets into one of the following categories: 1) Gas giant, 2) Hot Jupiter, 3) Water world, 4) Exo-Earth, 5) Super-Earth, or 6) Chthonian. What do you expect them to look like? (**10 points**)

11. Your TA has images for all eight exoplanets of this lab obtained from NASA's "Exoplanet Imager" mission that was successfully launched in 2040. Were your predictions correct? Yes/no. If no, what went wrong? [The TA also has the data for all of the exoplanets to help track down any errors.] (**10 points**)

Name: \_\_\_\_\_  
Date: \_\_\_\_\_

### 11.8 Take Home Exercise (35 points total)

Please summarize the important concepts discussed in this lab. Your summary should include:

- Discuss the different types of exoplanets and their characteristics.
- What are the measurements required for you to determine the most important parameters of an exoplanet?
- What requirement for an exoplanet gives it the possibility of harboring life?

Use complete sentences, and proofread your summary before handing in the lab.

### 11.9 Possible Quiz Questions

1. What are some of the different types of exoplanets?
2. What are some different exoplanet detection methods?
3. What is the habitable zone?

### 11.10 Extra Credit (ask your TA for permission before attempting, 5 points )

Your TA has the data for all of the exoplanets for today's lab. With that data, go back and answer questions #8 and #9 for all of the exoplanets.

Acknowledgement: This lab was made possible using the Extrasolar Planets Module of the Nebraska Astronomy Applet Project.



Name: \_\_\_\_\_  
Date: \_\_\_\_\_

## 12 Appendix A: Algebra Review

Because this is a freshman laboratory, we do not use high-level mathematics. But we do sometimes encounter a little basic algebra and we need to briefly review the main concepts. Algebra deals with equations and “unknowns”. Unknowns, or “variables”, are usually represented as a letter in an equation:  $y = 3x + 7$ . In this equation both “ $x$ ” and “ $y$ ” are variables. You do not know what the value of  $y$  is until you assign a value to  $x$ . For example, if  $x = 2$ , then  $y = 13$  ( $y = 3 \times 2 + 7 = 13$ ). Here are some additional examples:

$y = 5x + 3$ , if  $x=1$ , what is  $y$ ? Answer:  $y = 5 \times 1 + 3 = 5 + 3 = 8$

$q = 3t + 9$ , if  $t=5$ , what is  $q$ ? Answer:  $q = 3 \times 5 + 9 = 15 + 9 = 24$

$y = 5x^2 + 3$ , if  $x=2$ , what is  $y$ ? Answer:  $y = 5 \times (2^2) + 3 = 5 \times 4 + 3 = 20 + 3 = 23$

What is  $y$  if  $x = 6$  in this equation:  $y = 3x + 13 =$

### 12.1 Solving for X

These problems were probably easy for you, but what happens when you have this equation:  $y = 7x + 14$ , and you are asked to figure out what  $x$  is if  $y = 21$ ? Let’s do this step by step, first we re-write the equation:

$$y = 7x + 14$$

We now substitute the value of  $y$  ( $y = 21$ ) into the equation:

$$21 = 7x + 14$$

Now, if we could get rid of that 14 we could solve this equation! Subtract 14 from both sides of the equation:

$$21 - 14 = 7x + 14 - 14 \quad (\text{this gets rid of that pesky 14!})$$

$$7 = 7x \quad (\text{divide both sides by 7})$$

$$x = 1$$

Ok, your turn: If you have the equation  $y = 4x + 16$ , and  $y = 8$ , what is  $x$ ?

We frequently encounter more complicated equations, such as  $y = 3x^2 + 2x - 345$ , or  $p^2 = a^3$ . There are ways to solve such equations, but that is beyond the scope of our introduction. However, you do need to be able to solve equations like this:  $y^2 = 3x + 3$  (if you are told what “x” is!). Let’s do this for  $x = 11$ :

Copy down the equation again:

$$y^2 = 3x + 3$$

Substitute  $x = 11$ :

$$y^2 = 3 \times 11 + 3 = 33 + 3 = 36$$

Take the square root of both sides:


$$(y^2)^{1/2} = (36)^{1/2}$$

$$y = 6$$

Did that make sense? To get rid of the square of a variable you have to take the square root:  $(y^2)^{1/2} = y$ . So to solve for  $y^2$ , we took the square root of both sides of the equation.

## 13 Observatory Worksheets

## Campus Observatory Observation Sheet



Your Name: \_\_\_\_\_ T.A.: \_\_\_\_\_

Date & Time: \_\_\_\_\_ Telescope: \_\_\_\_\_

Type of Object: \_\_\_\_\_ Object Name: \_\_\_\_\_

Object Description: \_\_\_\_\_

\_\_\_\_\_

Fact about this object (and the source of information):


\_\_\_\_\_

\_\_\_\_\_

\_\_\_\_\_



## Campus Observatory Observation Sheet



Your Name: \_\_\_\_\_ T.A.: \_\_\_\_\_

Date & Time: \_\_\_\_\_ Telescope: \_\_\_\_\_

Type of Object: \_\_\_\_\_ Object Name: \_\_\_\_\_

Object Description: \_\_\_\_\_

\_\_\_\_\_

Fact about this object (and the source of information):

\_\_\_\_\_

\_\_\_\_\_

\_\_\_\_\_